



ଓଡିଶା ବିଦ୍ୟାଳୟ ଶିକ୍ଷା କାର୍ଯ୍ୟକ୍ରମ ପ୍ରାଧିକାରଣ

Odisha School Education Programme Authority

Government of Odisha

Application Seq No.	
Participant ID	
Participant Name	
Test Center Name	Government Polytechnic Jajpur
Test Date	09/11/2023
Test Time	2:00 PM - 4:30 PM
Subject	Junior Teacher (Schematic) CATEGORY I (Odia)

Section : Part I General English

Q.1 Identify the sentence with the correct subject-verb agreement:

Ans ☒ 1. The groups of students is excited about the trip.

☒ 2. The group of students is excited about the trip.

☒ 3. The group of students were excited about the trip.

☒ 4. The group of students are excited about the trip.

Question ID : 630680451695

Option 1 ID : 6306801763869

Option 2 ID : 6306801763867

Option 3 ID : 6306801763868

Option 4 ID : 6306801763866

Status : Answered

Chosen Option : 4

Q.2 In which sentence is the phrase correctly used?

Ans ☒ 1. Quickly, she walked reaching the bus stop in time.

☒ 2. Walking quickly, she reached the bus stop in time.

☒ 3. Quickly she walked, reaching the bus stop in time.

☒ 4. She walked quickly, reaching the bus stop in time.

Question ID : 630680451696

Option 1 ID : 6306801763872

Option 2 ID : 6306801763873

Option 3 ID : 6306801763871

Option 4 ID : 6306801763870

Status : Answered

Chosen Option : 1

Comprehension:

Read the given poem and answer the questions based on it:

It is true

I was created in you.

It is also true

That you were created for me.

I owned your voice.

It was shaped and tuned to soothe me.

Your arms were molded

Into a cradle to hold me, to rock me.

The scent of your body was the air

Perfumed for me to breathe.

Mother,

During those early, dearest days

I did not dream that you had

A large life which included me,

For I had a life

Which was only you.

SubQuestion No : 3

Q.3 What role did the mother's arms play in the speaker's life?

- Ans**
- ☐ 1. They helped the speaker learn to walk.
 - ☐ 2. They shaped the speaker's body.
 - ☐ 3. They symbolized the mother's strength.
 - ☒ 4. They provided warmth and comfort.

Question ID : **630680451653**

Option 1 ID : **6306801763704**

Option 2 ID : **6306801763707**

Option 3 ID : **6306801763705**

Option 4 ID : **6306801763706**

Status : **Answered**

Chosen Option : **4**

Comprehension:

Read the given poem and answer the questions based on it:

It is true

I was created in you.

It is also true

That you were created for me.

I owned your voice.

It was shaped and tuned to soothe me.

Your arms were molded

Into a cradle to hold me, to rock me.

The scent of your body was the air

Perfumed for me to breathe.

Mother,

During those early, dearest days

I did not dream that you had

A large life which included me,

For I had a life

Which was only you.

SubQuestion No : 4

Q.4 What is the primary inference drawn from the passage?

- Ans**
- ☐ 1. The speaker's mother had a separate life apart from the speaker.
 - ☐ 2. The speaker's mother had a difficult time raising the speaker.
 - ☒ 3. The speaker and their mother shared a deep and close bond.
 - ☐ 4. The speaker resented their mother's influence on their life.

Question ID : **630680451654**

Option 1 ID : **6306801763708**

Option 2 ID : **6306801763711**

Option 3 ID : **6306801763709**

Option 4 ID : **6306801763710**

Status : **Answered**

Chosen Option : **3**

Comprehension:

Read the given poem and answer the questions based on it:

It is true

I was created in you.

It is also true

That you were created for me.

I owned your voice.

It was shaped and tuned to soothe me.

Your arms were molded

Into a cradle to hold me, to rock me.

The scent of your body was the air

Perfumed for me to breathe.

Mother,

During those early, dearest days

I did not dream that you had

A large life which included me,

For I had a life

Which was only you.

SubQuestion No : 5

Q.5 What is the central theme of the passage?

Ans ✓ 1. The mother-child bond and interconnectedness

✗ 2. The mother's sacrifice for her child

✗ 3. Mother's dreams for her child

✗ 4. The child's independence from the mother

Question ID : **630680451652**

Option 1 ID : **6306801763700**

Option 2 ID : **6306801763702**

Option 3 ID : **6306801763703**

Option 4 ID : **6306801763701**

Status : **Answered**

Chosen Option : **1**

Comprehension:

Read the given poem and answer the questions based on it:

It is true

I was created in you.

It is also true

That you were created for me.

I owned your voice.

It was shaped and tuned to soothe me.

Your arms were molded

Into a cradle to hold me, to rock me.

The scent of your body was the air

Perfumed for me to breathe.

Mother,

During those early, dearest days

I did not dream that you had

A large life which included me,

For I had a life

Which was only you.

SubQuestion No : 6

Q.6 How does the speaker describe the role of the mother's voice?

- Ans**
- ☒ 1. It was used for singing and music.
 - ☒ 2. It was created to entertain the speaker.
 - ☒ 3. It was molded to soothe and comfort the speaker.
 - ☒ 4. It was shaped to discipline the speaker.

Question ID : **630680451651**

Option 1 ID : **6306801763698**

Option 2 ID : **6306801763696**

Option 3 ID : **6306801763697**

Option 4 ID : **6306801763699**

Status : **Answered**

Chosen Option : **3**

Comprehension:

Read the following passage and answer the questions below.

"In the tranquil village of Willowbrook, nestled amidst rolling hills and lush green forests, there lived a young girl named Eliza. With a heart as wild as the meadows that stretched beyond her cottage, she yearned for adventure that lay beyond her quaint surroundings. Each morning, as the sun's first rays painted the sky in shades of pink and gold, Eliza would wander into the woods, her loyal dog, Max, by her side. They would explore secret paths, discovering hidden clearings and bubbling streams. It was in these woods that Eliza found not just beauty, but also a profound connection to nature. The rustling leaves whispered ancient tales, and the birds serenaded her with melodies that spoke of hope and possibility. Eliza learned that the greatest adventures are often found in the places closest to our hearts, and that in the quiet of nature, one can find a world filled with wonder."

SubQuestion No : 7

Q.7 What is the antonym of "quaint" as used in the passage?

- Ans
- ☒ 1. Charming
 - ☒ 2. Beautiful
 - ☒ 3. Serene
 - ☒ 4. Modern

Question ID : 630680451694
Option 1 ID : 6306801763865
Option 2 ID : 6306801763863
Option 3 ID : 6306801763864
Option 4 ID : 6306801763862
Status : Answered
Chosen Option : 3

Comprehension:

Read the following passage and answer the questions below.

"In the tranquil village of Willowbrook, nestled amidst rolling hills and lush green forests, there lived a young girl named Eliza. With a heart as wild as the meadows that stretched beyond her cottage, she yearned for adventure that lay beyond her quaint surroundings. Each morning, as the sun's first rays painted the sky in shades of pink and gold, Eliza would wander into the woods, her loyal dog, Max, by her side. They would explore secret paths, discovering hidden clearings and bubbling streams. It was in these woods that Eliza found not just beauty, but also a profound connection to nature. The rustling leaves whispered ancient tales, and the birds serenaded her with melodies that spoke of hope and possibility. Eliza learned that the greatest adventures are often found in the places closest to our hearts, and that in the quiet of nature, one can find a world filled with wonder."

SubQuestion No : 8

Q.8 What could be an appropriate title for this passage?

- Ans
- ☒ 1. "Eliza's Daily Adventures"
 - ☒ 2. "Max and Eliza's Forest Journey"
 - ☒ 3. "The Enchanted Village of Willowbrook"
 - ☒ 4. "Exploring Nature in Willowbrook"

Question ID : 630680451691
Option 1 ID : 6306801763850
Option 2 ID : 6306801763852
Option 3 ID : 6306801763851
Option 4 ID : 6306801763853
Status : Answered
Chosen Option : 1

Comprehension:

Read the following passage and answer the questions below.

"In the tranquil village of Willowbrook, nestled amidst rolling hills and lush green forests, there lived a young girl named Eliza. With a heart as wild as the meadows that stretched beyond her cottage, she yearned for adventure that lay beyond her quaint surroundings. Each morning, as the sun's first rays painted the sky in shades of pink and gold, Eliza would wander into the woods, her loyal dog, Max, by her side. They would explore secret paths, discovering hidden clearings and bubbling streams. It was in these woods that Eliza found not just beauty, but also a profound connection to nature. The rustling leaves whispered ancient tales, and the birds serenaded her with melodies that spoke of hope and possibility. Eliza learned that the greatest adventures are often found in the places closest to our hearts, and that in the quiet of nature, one can find a world filled with wonder."

SubQuestion No : 9

Q.9 Which of the following statements best connects the passage to real-life situations?

- Ans ☒ 1. Adventure is only for those who travel to distant lands.
- ☒ 2. Nature can provide solace and inspiration in our lives.
- ☒ 3. Exploring the woods is dangerous and should be avoided.
- ☒ 4. Dogs are unreliable companions for outdoor activities.

Question ID : 630680451693
Option 1 ID : 6306801763858
Option 2 ID : 6306801763861
Option 3 ID : 6306801763860
Option 4 ID : 6306801763859
Status : Answered
Chosen Option : 2

Comprehension:

Read the following passage and answer the questions below.

"In the tranquil village of Willowbrook, nestled amidst rolling hills and lush green forests, there lived a young girl named Eliza. With a heart as wild as the meadows that stretched beyond her cottage, she yearned for adventure that lay beyond her quaint surroundings. Each morning, as the sun's first rays painted the sky in shades of pink and gold, Eliza would wander into the woods, her loyal dog, Max, by her side. They would explore secret paths, discovering hidden clearings and bubbling streams. It was in these woods that Eliza found not just beauty, but also a profound connection to nature. The rustling leaves whispered ancient tales, and the birds serenaded her with melodies that spoke of hope and possibility. Eliza learned that the greatest adventures are often found in the places closest to our hearts, and that in the quiet of nature, one can find a world filled with wonder."

SubQuestion No : 10

Q.10 Which sentence best summarizes the passage?

- Ans ☒ 1. Eliza loved exploring the village of Willowbrook with her dog, Max.
- ☒ 2. Eliza discovered the magic of nature in the woods of Willowbrook.
- ☒ 3. The village of Willowbrook was known for its tranquil forests and hills.
- ☒ 4. Max and Eliza had many adventures together in the village.

Question ID : 630680451692
Option 1 ID : 6306801763854
Option 2 ID : 6306801763856
Option 3 ID : 6306801763855
Option 4 ID : 6306801763857
Status : Answered
Chosen Option : 2

Comprehension:

ନିମ୍ନଲିଖିତ ଗଦ୍ୟାଂଶଟିକୁ ପଢ଼ି ଦିଆ ଯାଇଥିବା ପ୍ରଶ୍ନର ଉତ୍ତର ଦିଅନ୍ତୁ ।

ଜାତୀୟ ଜୀବନ

“ମୋ ସାଙ୍ଗେ ଆପଣଙ୍କ ମନ ମିଳିଲା ନାହିଁ, ଅତଏବ ମୁଁ ସମ୍ବଳନୀରେ କାର୍ଯ୍ୟ କରିପାରିବି ନାହିଁ ।” ଏଥିର କାରଣ ଆତ୍ମମାନଙ୍କର ଜାତୀୟ ଜୀବନର ଅଭାବ । ଜାତୀୟ ଜୀବନ ଗଠିତ ହେଲେ ବ୍ୟକ୍ତିଗତ ଭାବରେ ଅସଭାବ ଥିଲେ ସୁଦ୍ଧା ଜାତୀୟ ଅନୁଷ୍ଠାନରେ ସମସ୍ତେ ମିଳିମିଶି କାର୍ଯ୍ୟ କରିପାରିବା, ଏଥିରେ ସନ୍ଦେହ ନାହିଁ ।”

SubQuestion No : 1

Q.1 “ମୁଁ ସମ୍ବଳନୀରେ କାର୍ଯ୍ୟ କରିପାରିବି ନାହିଁ”- ଏହାର କାରଣ କଣ?

- Ans
- ☒ 1. ବ୍ୟକ୍ତିଗତ ଆଗ୍ରହର ଅଭାବ
 - ☒ 2. ଜାତୀୟ ଜୀବନର ଅଭାବ
 - ☒ 3. ଜାତୀୟତାର ଅଭାବ
 - ☒ 4. ଶିକ୍ଷାର ଅଭାବ

Question ID : 630680452581

Option 1 ID : 6306801767389

Option 2 ID : 6306801767387

Option 3 ID : 6306801767388

Option 4 ID : 6306801767390

Status : Answered

Chosen Option : 2

Comprehension:

ନିମ୍ନଲିଖିତ ଗଦ୍ୟାଂଶଟିକୁ ପଢ଼ି ଦିଆ ଯାଇଥିବା ପ୍ରଶ୍ନର ଉତ୍ତର ଦିଅନ୍ତୁ ।

ଜାତୀୟ ଜୀବନ

“ମୋ ସାଙ୍ଗେ ଆପଣଙ୍କ ମନ ମିଳିଲା ନାହିଁ, ଅତଏବ ମୁଁ ସମ୍ବଳନୀରେ କାର୍ଯ୍ୟ କରିପାରିବି ନାହିଁ ।” ଏଥିର କାରଣ ଆତ୍ମମାନଙ୍କର ଜାତୀୟ ଜୀବନର ଅଭାବ । ଜାତୀୟ ଜୀବନ ଗଠିତ ହେଲେ ବ୍ୟକ୍ତିଗତ ଭାବରେ ଅସଭାବ ଥିଲେ ସୁଦ୍ଧା ଜାତୀୟ ଅନୁଷ୍ଠାନରେ ସମସ୍ତେ ମିଳିମିଶି କାର୍ଯ୍ୟ କରିପାରିବା, ଏଥିରେ ସନ୍ଦେହ ନାହିଁ ।”

SubQuestion No : 2

Q.2 କେଉଁଟି “ଅସଭାବ” ର ବିପରୀତ ଶବ୍ଦ?

- Ans
- ☒ 1. ସଭାବର
 - ☒ 2. ସଭାବନା
 - ☒ 3. ସଭାବନୀୟ
 - ☒ 4. ସଭାବ

Question ID : 630680452583

Option 1 ID : 6306801767397

Option 2 ID : 6306801767396

Option 3 ID : 6306801767398

Option 4 ID : 6306801767395

Status : Answered

Chosen Option : 4

Comprehension:


ନିମ୍ନଲିଖିତ ଗଦ୍ୟାଂଶଟିକୁ ପଢି ଦିଆ ଯାଇଥିବା ପ୍ରଶ୍ନର ଉତ୍ତର ଦିଅନ୍ତୁ ।

ଜାତୀୟ ଜୀବନ

“ମୋ ସାଙ୍ଗେ ଆପଣଙ୍କ ମନ ମିଳିଲା ନାହିଁ, ଅତଏବ ମୁଁ ସମ୍ବିଳନୀରେ କାର୍ଯ୍ୟ କରିପାରିବି ନାହିଁ ।” ଏଥିର କାରଣ ଆତ୍ମମାନଙ୍କର ଜାତୀୟ ଜୀବନର ଅଭାବ । ଜାତୀୟ ଜୀବନ ଗଠିତ ହେଲେ ବ୍ୟକ୍ତିଗତ ଭାବରେ ଅସଭାବ ଥିଲେ ସୁଦ୍ଧା ଜାତୀୟ ଅନୁଷ୍ଠାନରେ ସମସ୍ତେ ମିଳିମିଶି କାର୍ଯ୍ୟ କରିପାରିବା, ଏଥିରେ ସନ୍ଦେହ ନାହିଁ ।”

SubQuestion No : 3

Q.3 ଏଠାରେ କେଉଁ ସମ୍ବିଳନୀ ସଂପର୍କରେ ଉଲ୍ଲେଖ କରାଯାଇଛି?

- Ans  1. ଉତ୍କଳ ସମ୍ବିଳନୀ
 2. ଜାତୀୟ ସମ୍ବିଳନୀ
 3. ଚକ୍ରଧରପୁର ସମ୍ବିଳନୀ
 4. ନାଗପୁର ସମ୍ବିଳନୀ

Question ID : 630680452580

Option 1 ID : 6306801767384

Option 2 ID : 6306801767383

Option 3 ID : 6306801767385

Option 4 ID : 6306801767386

Status : Answered

Chosen Option : 2

Comprehension:

ନିମ୍ନଲିଖିତ ଗଦ୍ୟାଂଶଟିକୁ ପଢି ଦିଆ ଯାଇଥିବା ପ୍ରଶ୍ନର ଉତ୍ତର ଦିଅନ୍ତୁ ।

ଜାତୀୟ ଜୀବନ

“ମୋ ସାଙ୍ଗେ ଆପଣଙ୍କ ମନ ମିଳିଲା ନାହିଁ, ଅତଏବ ମୁଁ ସମ୍ବିଳନୀରେ କାର୍ଯ୍ୟ କରିପାରିବି ନାହିଁ ।” ଏଥିର କାରଣ ଆତ୍ମମାନଙ୍କର ଜାତୀୟ ଜୀବନର ଅଭାବ । ଜାତୀୟ ଜୀବନ ଗଠିତ ହେଲେ ବ୍ୟକ୍ତିଗତ ଭାବରେ ଅସଭାବ ଥିଲେ ସୁଦ୍ଧା ଜାତୀୟ ଅନୁଷ୍ଠାନରେ ସମସ୍ତେ ମିଳିମିଶି କାର୍ଯ୍ୟ କରିପାରିବା, ଏଥିରେ ସନ୍ଦେହ ନାହିଁ ।”

SubQuestion No : 4

Q.4 “ସମସ୍ତେ ମିଳିମିଶି କାର୍ଯ୍ୟ କରିପାରିବେ”, ଏଥିପାଇଁ କ’ଣ ଦରକାର?

- Ans  1. ଆଧୁନିକ ଶିକ୍ଷା
 2. ଜାତୀୟ ଜୀବନ
 3. ଦେଶସେବା
 4. ଭଲପାଇବା

Question ID : 630680452582

Option 1 ID : 6306801767392

Option 2 ID : 6306801767393

Option 3 ID : 6306801767394

Option 4 ID : 6306801767391

Status : Answered

Chosen Option : 2

Comprehension:

ନିମ୍ନଲିଖିତ ପଦ୍ୟାଂଶଟିକୁ ପଢ଼ି ଦିଆ ଯାଇଥିବା ପ୍ରଶ୍ନର ଉତ୍ତର ଦିଅନ୍ତୁ ।

ଆରେ ବାବୁ ଶ୍ୟାମଘନ ତୁ ଗଲେ ମଧୁଭୁବନ

କାହା ମୁଖ ଅନାଇ ବଞ୍ଚିବି

ହେବ ଦଶଦିଗ ଶୂନ୍ୟ-ଅଥିଉ ହେବ ଜୀବନ

ନିଶି ଦିବସରେ ଝୁରୁଥିବିରେ ଜୀବଧନ ।

ଜୀବନ ବିହନେ ଯେହ୍ନେ ଝୁଷ ।

ରାଜା ବିନେ ଯେହ୍ନେ ଗ୍ରାମ ଦେଶରେ ।


SubQuestion No : 5

Q.5 କେଉଁଟି ନିଶି-ଶବ୍ଦର ପ୍ରତିଶବ୍ଦ ?

Ans  1. ଅସ୍ତ୍ର

 2. ରାତି

 3. ଦିନ

 4. ସକାଳ

Question ID : **630680452629**

Option 1 ID : **6306801767552**

Option 2 ID : **6306801767553**

Option 3 ID : **6306801767554**

Option 4 ID : **6306801767551**

Status : **Answered**

Chosen Option : **2**

Comprehension:

ନିମ୍ନଲିଖିତ ପଦ୍ୟାଂଶଟିକୁ ପଢି ଦିଆ ଯାଇଥିବା ପ୍ରଶ୍ନର ଉତ୍ତର ଦିଅନ୍ତୁ ।

ଆରେ ବାବୁ ଶ୍ୟାମଘନ ତୁ ଗଲେ ମଧୁଭୁବନ

କାହା ମୁଖ ଅନାଇ ବଞ୍ଚିବି

ହେବ ଦଶଦିଗ ଶୂନ୍ୟ-ଅଥିର ହେବ ଜୀବନ

ନିଶି ଦିବସରେ ଝୁରୁଥିବିରେ ଜୀବଧନ ।

ଜୀବନ ବିହନେ ଯେହ୍ନେ ଝୁଷ ।

ରାଜା ବିନେ ଯେହ୍ନେ ଗ୍ରାମ ଦେଶରେ ।

SubQuestion No : 6

Q.6 “ଝୁଷ” ଶବ୍ଦର ଅର୍ଥ କଣ?

Ans  1. କଇଁଚ

 2. ପୋକ

 3. ମାଛ

 4. ଯୋକ

Question ID : 630680452630

Option 1 ID : 6306801767557

Option 2 ID : 6306801767555

Option 3 ID : 6306801767558

Option 4 ID : 6306801767556

Status : Answered

Chosen Option : 3

Comprehension:

ନିମ୍ନଲିଖିତ ପଦ୍ୟାଂଶଟିକୁ ପଢି ଦିଆ ଯାଇଥିବା ପ୍ରଶ୍ନର ଉତ୍ତର ଦିଅନ୍ତୁ ।

ଆରେ ବାବୁ ଶ୍ୟାମଘନ ତୁ ଗଲେ ମଧୁଭୁବନ

କାହା ମୁଖ ଅନାଇ ବଞ୍ଚିବି

ହେବ ଦଶଦିଗ ଶୂନ୍ୟ-ଅଥିର ହେବ ଜୀବନ

ନିଶି ଦିବସରେ ଝୁରୁଥିବିରେ ଜୀବଧନ ।

ଜୀବନ ବିହୁନେ ଯେହ୍ନେ ଝୁଷ ।

ରାଜା ବିନେ ଯେହ୍ନେ ଗ୍ରାମ ଦେଶରେ ।

SubQuestion No : 7

Q.7 ଏହି ପଦ୍ୟାଂଶରେ ଶ୍ୟାମଘନ ବୋଲି କାହାକୁ ସମ୍ବୋଧନ କରାଯାଇଛି?

Ans  1. ରାମ

 2. ବଳରାମ

 3. ହରି

 4. କୃଷ୍ଣ

Question ID : 630680452627

Option 1 ID : 6306801767543

Option 2 ID : 6306801767544

Option 3 ID : 6306801767545

Option 4 ID : 6306801767546

Status : Answered

Chosen Option : 4

Comprehension:

ନିମ୍ନଲିଖିତ ପଦ୍ୟାଂଶଟିକୁ ପଢି ଦିଆ ଯାଇଥିବା ପ୍ରଶ୍ନର ଉତ୍ତର ଦିଅନ୍ତୁ ।

ଆରେ ବାବୁ ଶ୍ୟାମଘନ ତୁ ଗଲେ ମଧୁଭୁବନ

କାହା ମୁଖ ଅନାଇ ବଞ୍ଚିବି

ହେବ ଦଶଦିଗ ଶୂନ୍ୟ-ଅଥିଉ ହେବ ଜୀବନ

ନିଶି ଦିବସରେ ଝୁରୁଥିବିରେ ଜୀବଧନ ।

ଜୀବନ ବିହନେ ଯେହ୍ନେ ଝୁଷ ।

ରାଜା ବିନେ ଯେହ୍ନେ ଗ୍ରାମ ଦେଶରେ ।

SubQuestion No : 8

Q.8 ଏହି ପଦ୍ୟାଂଶରେ “ମଧୁଭୁବନ” କେଉଁ ସ୍ଥାନକୁ ବୁଝାଏ?

Ans ☒ 1. ଦ୍ଵାରିକା

☒ 2. ଗୋପ

☒ 3. ହସ୍ତିନା

☒ 4. ମଥୁରା

Question ID : 630680452628

Option 1 ID : 6306801767549

Option 2 ID : 6306801767548

Option 3 ID : 6306801767550

Option 4 ID : 6306801767547

Status : Answered

Chosen Option : 4

Q.9 “ବ୍ୟାଧି” ଶବ୍ଦର ପ୍ରତିଶବ୍ଦ କଣ?

Ans ☒ 1. ରୋଗ

☒ 2. ଜ୍ଵର

☒ 3. ବିକଳାଙ୍ଗ

☒ 4. ସଂକ୍ରମଣ

Question ID : 630680452614

Option 1 ID : 6306801767495

Option 2 ID : 6306801767496

Option 3 ID : 6306801767497

Option 4 ID : 6306801767498

Status : Answered

Chosen Option : 1

Q.10 "ବାହାଳୀ"ରେ କିଏ ପାଠ ପଢ଼ାନ୍ତି?

- Ans
- ☐ 1. ଶିକ୍ଷକ
 - ☐ 2. ଶିକ୍ଷୟତ୍ରୀ
 - ☐ 3. ପଣ୍ଡିତ
 - ☒ 4. ଅବଧାନ

Question ID : 630680452615
Option 1 ID : 6306801767499
Option 2 ID : 6306801767501
Option 3 ID : 6306801767502
Option 4 ID : 6306801767500

Status : Answered

Chosen Option : 1

Section : Part 1 General Knowledge and Current Affairs

Q.1 _____ crops are sown in winter from October to December and harvested in summer from April to June.

- Ans
- ☐ 1. Kharif and Zaid both
 - ☐ 2. Zaid
 - ☒ 3. Rabi
 - ☐ 4. Kharif

Question ID : 630680451096
Option 1 ID : 6306801761484
Option 2 ID : 6306801761483
Option 3 ID : 6306801761485
Option 4 ID : 6306801761482

Status : Answered

Chosen Option : 4

Q.2 Environment performs vital function of producing :-

- Ans
- ☐ 1. Non Conventional sources of energy only
 - ☐ 2. non renewable sources only
 - ☐ 3. renewable resources only
 - ☒ 4. renewable and non renewable resources

Question ID : 630680451095
Option 1 ID : 6306801761481
Option 2 ID : 6306801761479
Option 3 ID : 6306801761478
Option 4 ID : 6306801761480

Status : Answered

Chosen Option : 4

Q.3 Each gene has a _____ DNA (Deoxyribonucleic acid) sequence.

Ans ☒ 1. common

☒ 2. repetitive

☒ 3. similar

☒ 4. unique

Question ID : 630680451094

Option 1 ID : 6306801761476

Option 2 ID : 6306801761477

Option 3 ID : 6306801761475

Option 4 ID : 6306801761474

Status : Answered

Chosen Option : 2

Q.4 The 102nd Amendment inserted Article 338B into the Constitution. This article provides for the establishment of :-

Ans ☒ 1. National Finance Commission

☒ 2. Election Commission

☒ 3. National Commission for Scheduled Class

☒ 4. National Commission for Backward Classes

Question ID : 630680451098

Option 1 ID : 6306801761490

Option 2 ID : 6306801761493

Option 3 ID : 6306801761491

Option 4 ID : 6306801761492

Status : Answered

Chosen Option : 2

Q.5 _____ ranks among the most populous districts of Odisha.

Ans ☒ 1. Debagarh

☒ 2. Jharsuguda

☒ 3. Gajapati

☒ 4. Ganjam

Question ID : 630680451090

Option 1 ID : 6306801761458

Option 2 ID : 6306801761460

Option 3 ID : 6306801761459

Option 4 ID : 6306801761461

Status : Answered

Chosen Option : 4

Q.6 Which among the given options is not a part of Equatorial Region:-

Ans ☒ 1. Central Asia

☒ 2. The Amazon Valley in South America

☒ 3. Malayan Peninsula

☒ 4. Congo Basin and Ghana in Africa

Question ID : 630680451099

Option 1 ID : 6306801761494

Option 2 ID : 6306801761495

Option 3 ID : 6306801761497

Option 4 ID : 6306801761496

Status : Not Answered

Chosen Option : --

Q.7 _____ popularly known as Jayee Rajguru a great freedom fighter and martyr of Odisha was born on, 29th October, 1739.

Ans ☒ 1. Haramani Devi

☒ 2. Raja Artatran Deo

☒ 3. Aykrushana Mohapatra

☒ 4. Chand Rajguru

Question ID : 630680451093

Option 1 ID : 6306801761471

Option 2 ID : 6306801761473

Option 3 ID : 6306801761470

Option 4 ID : 6306801761472

Status : Answered

Chosen Option : 3

Q.8 _____, a 13-year-old from Bengaluru, wins the International EcoHero Award for her innovative and dedicated environmental activism.

Ans ☒ 1. Maya Harsha

☒ 2. Bangaru Adhiyan

☒ 3. Rajeshwari Acharya

☒ 4. Maria Sultan

Question ID : 630680451092

Option 1 ID : 6306801761466

Option 2 ID : 6306801761469

Option 3 ID : 6306801761468

Option 4 ID : 6306801761467

Status : Not Answered

Chosen Option : --

Q.9 Recently in July 2023, which country has imposed a complete ban on single-use produce bags.

- Ans
- ☐ 1. China
 - ☐ 2. Nepal
 - ☐ 3. India
 - ☒ 4. New Zealand

Question ID : 630680451091
Option 1 ID : 6306801761464
Option 2 ID : 6306801761465
Option 3 ID : 6306801761463
Option 4 ID : 6306801761462
Status : Not Answered
Chosen Option : --

Q.10 The abolition of Diarchy in the provinces was recommended by the _____.

- Ans
- ☐ 1. Charter Act
 - ☐ 2. Indian Council Act
 - ☒ 3. Government of India Act of
 - ☐ 4. Vernacular Press Act

Question ID : 630680451097
Option 1 ID : 6306801761487
Option 2 ID : 6306801761489
Option 3 ID : 6306801761486
Option 4 ID : 6306801761488
Status : Not Answered
Chosen Option : --

Section : Part 1 Reasoning Ability

Q.1 Select the option that is related to the fifth number-letter cluster in the same way as the fourth number-letter cluster is related to the third number-letter cluster and the second number-letter cluster is related to the first number-letter cluster.

BHUBANESWAR : UAEA114 :: CHANDIGARH : AIA73 :: HYDERABAD : ?

- Ans
- ☐ 1. EAA56
 - ☐ 2. AE62
 - ☐ 3. EAA66
 - ☒ 4. EAA68

Question ID : 630680451212
Option 1 ID : 6306801761947
Option 2 ID : 6306801761949
Option 3 ID : 6306801761948
Option 4 ID : 6306801761946
Status : Not Answered
Chosen Option : --

Q.2 Select the option that is related to the third number in the same way as the second number is related to the first number.

26 : 676 :: 125 : ?

- Ans**
- ☒ 1. 10500
 - ☒ 2. 25625
 - ☒ 3. 15625
 - ☒ 4. 5100

Question ID : 630680451208

Option 1 ID : 6306801761931

Option 2 ID : 6306801761933

Option 3 ID : 6306801761932

Option 4 ID : 6306801761930

Status : Answered

Chosen Option : 3

Q.3 In a class of 110 students, Nirmal's rank from the top is 56. Harsh is ten ranks below Nirmal. What is Harsh's rank from the bottom?

- Ans**
- ☒ 1. 45th
 - ☒ 2. 46th
 - ☒ 3. 43rd
 - ☒ 4. 44th

Question ID : 630680451214

Option 1 ID : 6306801761956

Option 2 ID : 6306801761957

Option 3 ID : 6306801761954

Option 4 ID : 6306801761955

Status : Answered

Chosen Option : 1

Q.4 If X denotes 'multiplication', Y denotes 'addition', Z denotes 'division', and W denotes 'subtraction', then what will be the value of the following equation?

16 X 3 Z 6 Y 9 W 5 = ?

- Ans**
- ☒ 1. 8
 - ☒ 2. 48
 - ☒ 3. 12
 - ☒ 4. 24

Question ID : 630680451207

Option 1 ID : 6306801761926

Option 2 ID : 6306801761929

Option 3 ID : 6306801761927

Option 4 ID : 6306801761928

Status : Answered

Chosen Option : 3

Q.5 Anand, Bishal, Celia, Drake, and Eshwar are five friends sitting around a circular table facing the centre. Drake sits to the immediate right of Anand. Celia is not sitting next to Drake or Anand. Eshwar is sitting to the immediate right of Celia. Who is sitting to the immediate right of Drake?

- Ans**
- ☒ 1. Bishal
 - ☐ 2. Eshwar
 - ☐ 3. Celia
 - ☐ 4. Anand

Question ID : 630680451215
Option 1 ID : 6306801761961
Option 2 ID : 6306801761959
Option 3 ID : 6306801761958
Option 4 ID : 6306801761960

Status : Answered
Chosen Option : 2

Q.6 If ' $M \times N$ ' means 'M is the mother of N'.
If ' $M + N$ ' means 'M is the father of N'.
If ' $M \div N$ ' means 'M is the sister of N'.
If ' $M - N$ ' means 'M is the brother of N'.

How is A related to D in the expression ' $A - B \div C \times D$ '?

- Ans**
- ☐ 1. Father's brother
 - ☒ 2. Mother's brother
 - ☐ 3. Father's father
 - ☐ 4. Brother

Question ID : 630680451210
Option 1 ID : 6306801761938
Option 2 ID : 6306801761940
Option 3 ID : 6306801761941
Option 4 ID : 6306801761939

Status : Answered
Chosen Option : 2

Q.7 In a certain code language, if BOTTLE is coded as APSUKF, GLASS is coded as FMZTR, then what will PLATE be coded as?

- Ans**
- ☐ 1. OMZSF
 - ☒ 2. OMZUD
 - ☐ 3. QMBUF
 - ☐ 4. QKBSF

Question ID : 630680451211
Option 1 ID : 6306801761942
Option 2 ID : 6306801761943
Option 3 ID : 6306801761945
Option 4 ID : 6306801761944

Status : Answered
Chosen Option : 2

Q.8 Two Statements are given followed by two conclusions numbered I and II. Assuming the statements to be true, even if they seem to be at variance with commonly known facts, decide which of the conclusions logically follow(s) from the statements.

Statements:

Statement I: No lamp is a bulb.

Statement II: All bulbs are fans.

Conclusions:

Conclusion I: No lamp is a fan.

Conclusion II: Some fans are bulbs.

- Ans**
- ✓ 1. Only conclusion II follows
 - ✗ 2. Only conclusion I follows
 - ✗ 3. Both conclusions I and II follow
 - ✗ 4. Neither conclusion I nor II follows

Question ID : 630680451216

Option 1 ID : 6306801761963

Option 2 ID : 6306801761962

Option 3 ID : 6306801761964

Option 4 ID : 6306801761965

Status : Answered

Chosen Option : 2

Q.9 How many vowels are there in the given letter series that are immediately preceded by a consonant?

H J D T U H V N X Z L K I E B U Q

- Ans**
- ✗ 1. 1
 - ✗ 2. 2
 - ✗ 3. 4
 - ✓ 4. 3

Question ID : 630680451209

Option 1 ID : 6306801761936

Option 2 ID : 6306801761934

Option 3 ID : 6306801761937

Option 4 ID : 6306801761935

Status : Answered

Chosen Option : 4

Q.10 Four letter-cluster pairs have been given, out of which three are alike in some manner and one is different. Select the odd letter-cluster pair.

- Ans**
- ✓ 1. UX : DF
 - ✗ 2. IL : RO
 - ✗ 3. EH : VS
 - ✗ 4. PS : KH

Question ID : 630680451213

Option 1 ID : 6306801761953

Option 2 ID : 6306801761952

Option 3 ID : 6306801761950

Option 4 ID : 6306801761951

Status : Answered

Chosen Option : 1

Q.1 What is the primary concern regarding the ethical use of artificial intelligence (AI) in society?

- Ans
- ☒ 1. Lack of skilled AI developers
 - ☒ 2. Privacy and security
 - ☒ 3. Limited computing power
 - ☒ 4. High implementation costs

Question ID : 630680451220
Option 1 ID : 6306801761978
Option 2 ID : 6306801761979
Option 3 ID : 6306801761981
Option 4 ID : 6306801761980
Status : Answered
Chosen Option : 2

Q.2 A company has a network of offices across the world. The company wants to implement a secure and reliable way for employees to access confidential files and applications from any office. Which of the following solutions would be best for the company?

- Ans
- ☒ 1. Wide area network (WAN)
 - ☒ 2. Public cloud-based storage and application suite
 - ☒ 3. Virtual private network (VPN)
 - ☒ 4. Local area network (LAN)

Question ID : 630680451219
Option 1 ID : 6306801761976
Option 2 ID : 6306801761975
Option 3 ID : 6306801761974
Option 4 ID : 6306801761977
Status : Answered
Chosen Option : 3

Q.3 Which of the following is a function of the operating system's kernel?

- Ans
- ☒ 1. Running application software
 - ☒ 2. Allocating system resources
 - ☒ 3. Creating documents and files
 - ☒ 4. Managing user interfaces

Question ID : 630680451223
Option 1 ID : 6306801761992
Option 2 ID : 6306801761991
Option 3 ID : 6306801761993
Option 4 ID : 6306801761990
Status : Answered
Chosen Option : 1

Q.4 What is the primary function of the Central Processing Unit (CPU) in a computer?

Ans ☒ 1. Execute instructions and perform calculations

☐ 2. Input data from peripherals

☐ 3. Store data in memory

☐ 4. Display graphical information

Question ID : 630680451221

Option 1 ID : 6306801761984

Option 2 ID : 6306801761982

Option 3 ID : 6306801761983

Option 4 ID : 6306801761985

Status : Answered

Chosen Option : 2

Q.5 Which programming language is often used for data analysis, scientific computing, and machine learning?

Ans ☐ 1. Swift

☐ 2. Ruby

☐ 3. PHP

☒ 4. R

Question ID : 630680451222

Option 1 ID : 6306801761989

Option 2 ID : 6306801761986

Option 3 ID : 6306801761988

Option 4 ID : 6306801761987

Status : Marked For Review

Chosen Option : 2

Section : Part 1 Child Development Learning Curriculum and Assessment

Q.1 ପ୍ରଭାବଶାଳୀ ଲୁକବୋର୍ଡ ଲେଖା ପାଇଁ କେଉଁ କାରକକୁ ବିଚାର କରିବା ଜରୁରୀ?

Ans ☐ 1. କିଛିବି ନ ଲିଭାଇ ପୁରା ବୋର୍ଡ ଭରିବା ।

☐ 2. ଯଥାସମ୍ଭବ ଶୀଘ୍ର ଶୀଘ୍ର ଲେଖିବା ।

☐ 3. କର୍ଷିତ୍ ଓ କଳାତ୍ମକ ଲେଖା ଶୈଳୀ ବ୍ୟବହାର କରିବା ।

☒ 4. ଯଥାର୍ଥତା ଏବଂ ସଂରଚନାତ୍ମକ ଉପସ୍ଥାପନାକୁ ନିଶ୍ଚିତ କରିବା ।

Question ID : 630680451574

Option 1 ID : 6306801763397

Option 2 ID : 6306801763394

Option 3 ID : 6306801763395

Option 4 ID : 6306801763396

Status : Answered

Chosen Option : 4

Q.2 In implementing inclusive education, how do regular assessments enhance student learning?

- Ans ☒ 1. By identifying areas of improvement and adapting instruction.
- ☐ 2. By focusing solely on grades.
- ☐ 3. By increasing competition among students.
- ☐ 4. By reducing hands-on learning.

Question ID : 630680451569

Option 1 ID : 6306801763375

Option 2 ID : 6306801763376

Option 3 ID : 6306801763374

Option 4 ID : 6306801763377

Status : Answered

Chosen Option : 1

Q.3 The Right to Education (RTE) is a fundamental right under which Article of the Indian Constitution?

- Ans ☐ 1. Article 19
- ☒ 2. Article 21A
- ☐ 3. Article 370
- ☐ 4. Article 32

Question ID : 630680451566

Option 1 ID : 6306801763362

Option 2 ID : 6306801763363

Option 3 ID : 6306801763364

Option 4 ID : 6306801763365

Status : Answered

Chosen Option : 2

Q.4 Which approach mainly revolves around the teacher delivering knowledge?

- Ans ☒ 1. Teacher-centered
- ☐ 2. Learning-centered
- ☐ 3. Constructivist
- ☐ 4. Learner-centered

Question ID : 630680451564

Option 1 ID : 6306801763356

Option 2 ID : 6306801763355

Option 3 ID : 6306801763357

Option 4 ID : 6306801763354

Status : Answered

Chosen Option : 1

Q.5 What characterizes the "continuous" aspect of CCA?

- Ans
- ☐ 1. Annual assessment of students.
 - ☒ 2. Regular and periodic evaluations.
 - ☐ 3. Evaluation only during semester ends.
 - ☐ 4. Occasional feedback on performance.

Question ID : 630680451571
Option 1 ID : 6306801763384
Option 2 ID : 6306801763383
Option 3 ID : 6306801763385
Option 4 ID : 6306801763382
Status : Answered
Chosen Option : 2

Q.6 Which developmental milestone is typically expected for children aged 7-11, during the concrete operational stage in Piaget's theory of cognitive development?

- Ans
- ☒ 1. Ability to think logically about concrete events and classify objects.
 - ☐ 2. Basic reflexes and sensory exploration.
 - ☐ 3. Egocentric thinking with a strong focus on oneself.
 - ☐ 4. Abstract thinking and moral reasoning.

Question ID : 630680451578
Option 1 ID : 6306801763412
Option 2 ID : 6306801763411
Option 3 ID : 6306801763413
Option 4 ID : 6306801763410
Status : Answered
Chosen Option : 1

Q.7 In an experience-centered curriculum, what is most likely to be used as a primary teaching strategy?

- Ans
- ☐ 1. Standardized tests.
 - ☒ 2. Field trips and project-based learning.
 - ☐ 3. Lecture method.
 - ☐ 4. Traditional textbooks.

Question ID : 630680451568
Option 1 ID : 6306801763372
Option 2 ID : 6306801763371
Option 3 ID : 6306801763370
Option 4 ID : 6306801763373
Status : Answered
Chosen Option : 2

Q.8 Why might adolescents experience heightened emotional sensitivity and mood swings?

- Ans ☒ 1. Rapid hormonal changes.
- ☐ 2. They are naturally more aggressive.
- ☐ 3. They resist adult authority.
- ☐ 4. They are seeking attention.

Question ID : 630680451575
Option 1 ID : 6306801763399
Option 2 ID : 6306801763400
Option 3 ID : 6306801763401
Option 4 ID : 6306801763398
Status : Answered
Chosen Option : 1

Q.9 In the constructivist approach, learning is primarily viewed as:

- Ans ☐ 1. A passive absorption of facts
- ☒ 2. An active process of constructing knowledge
- ☐ 3. A process of memorization
- ☐ 4. A quick process based on imitation

Question ID : 630680451565
Option 1 ID : 6306801763358
Option 2 ID : 6306801763360
Option 3 ID : 6306801763359
Option 4 ID : 6306801763361
Status : Answered
Chosen Option : 2

Q.10 The objective of the Udaan initiative, launched by the Central Board of Secondary Education (CBSE) in India, was to:

- Ans ☒ 1. Mentor and facilitate girl students to pursue higher education in engineering and technology.
- ☐ 2. Reduce the dropout rate of girl students.
- ☐ 3. Increase enrollment of girl students in primary education.
- ☐ 4. Provide free bicycles to girl students.

Question ID : 630680451570
Option 1 ID : 6306801763380
Option 2 ID : 6306801763378
Option 3 ID : 6306801763381
Option 4 ID : 6306801763379
Status : Answered
Chosen Option : 1

Q.11 Why is it crucial to tailor curriculum objectives to the learner's context?

Ans ☒ 1. It helps make learning more relevant and relatable.

☐ 2. It encourages memorization over understanding.

☐ 3. It promotes a centralized education system.

☐ 4. It ensures all students study the same material.

Question ID : 630680451573

Option 1 ID : 6306801763391

Option 2 ID : 6306801763393

Option 3 ID : 6306801763392

Option 4 ID : 6306801763390

Status : Answered

Chosen Option : 1

Q.12 How does a positive school environment primarily benefit a child's socio-emotional development?

Ans ☐ 1. By ensuring the child has high academic grades.

☐ 2. By focusing solely on textbook knowledge.

☒ 3. By promoting healthy peer relationships and a sense of belonging.

☐ 4. By emphasizing competition among students.

Question ID : 630680451577

Option 1 ID : 6306801763406

Option 2 ID : 6306801763409

Option 3 ID : 6306801763407

Option 4 ID : 6306801763408

Status : Answered

Chosen Option : 3

Q.13 Which statement best represents the nature vs. nurture debate in child development?

Ans ☐ 1. Nature refers to learning, and nurture to genetic factors.

☒ 2. Nature refers to heredity, and nurture refers to environment.

☐ 3. Both heredity and environment play negligible roles.

☐ 4. Nurture has a minor role, while nature is dominant.

Question ID : 630680451576

Option 1 ID : 6306801763405

Option 2 ID : 6306801763402

Option 3 ID : 6306801763404

Option 4 ID : 6306801763403

Status : Answered

Chosen Option : 2

Q.14 When preparing a multiple-choice question, what is the distractor?

Ans ☒ 1. An incorrect answer choice

☐ 2. The correct answer

☐ 3. The question stem

☐ 4. The topic of the question

Question ID : 630680451572

Option 1 ID : 6306801763389

Option 2 ID : 6306801763386

Option 3 ID : 6306801763388

Option 4 ID : 6306801763387

Status : Answered

Chosen Option : 1

Q.15 What best defines the concept of a curriculum in the context of education?

Ans ☐ 1. A list of textbooks for a subject.

☒ 2. A planned set of educational experiences and content.

☐ 3. The layout of a school's physical infrastructure.

☐ 4. A collection of the school's achievement data.

Question ID : 630680451567

Option 1 ID : 6306801763366

Option 2 ID : 6306801763368

Option 3 ID : 6306801763369

Option 4 ID : 6306801763367

Status : Answered

Chosen Option : 2

Section : Part II Subject Contents

Q.1 Find the rational number which is equivalent to $\frac{11}{13}$.

Ans

☐ 1. $\frac{65}{78}$

☐ 2. $\frac{104}{88}$

☒ 3. $\frac{77}{91}$

☐ 4. $\frac{22}{39}$

Question ID : 630680451585

Option 1 ID : 6306801763439

Option 2 ID : 6306801763441

Option 3 ID : 6306801763440

Option 4 ID : 6306801763438

Status : Answered

Chosen Option : 3

Q.2 An angle that measures less than 90 degrees is known as:

- Ans
- ☒ 1. Reflex
 - ☒ 2. Obtuse
 - ☒ 3. Straight
 - ☒ 4. Acute

Question ID : 630680451589

Option 1 ID : 6306801763456

Option 2 ID : 6306801763454

Option 3 ID : 6306801763455

Option 4 ID : 6306801763457

Status : Answered

Chosen Option : 4

Q.3 Find the value of $3.8 \div 1.9 + 45 \times 4$

- Ans
- ☒ 1. 179
 - ☒ 2. 180
 - ☒ 3. 182
 - ☒ 4. 170

Question ID : 630680451587

Option 1 ID : 6306801763448

Option 2 ID : 6306801763447

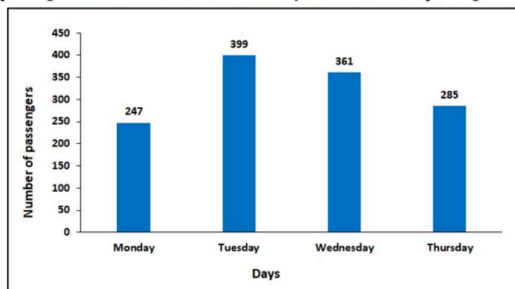
Option 3 ID : 6306801763446

Option 4 ID : 6306801763449

Status : Answered

Chosen Option : 3

Q.4 The given bar graph shows the number of passengers who booked cabs on four different days. Find the ratio of the number of passengers who booked cabs on Wednesday to the number of passengers who booked on Tuesday.



- Ans**
- ☒ 1. 21: 17
 - ☒ 2. 19: 14
 - ☒ 3. 19: 17
 - ☒ 4. 19: 21

Question ID : 630680451582
Option 1 ID : 6306801763428
Option 2 ID : 6306801763429
Option 3 ID : 6306801763427
Option 4 ID : 6306801763426

Status : Answered

Chosen Option : 4

Q.5 A clock gains 4 minutes in 1 hour. It is set right at 9:20 a.m. What time will the clock show at 4:20 pm the same day?

- Ans**
- ☒ 1. 3:02 p.m.
 - ☒ 2. 4:48 p.m.
 - ☒ 3. 4:02 p.m.
 - ☒ 4. 4:22 p.m.

Question ID : 630680451584
Option 1 ID : 6306801763435
Option 2 ID : 6306801763436
Option 3 ID : 6306801763434
Option 4 ID : 6306801763437

Status : Answered

Chosen Option : 2

Q.6 Find the highest common factor of 34 and 51.

- Ans
- ☐ 1. 12
 - ☐ 2. 11
 - ☐ 3. 18
 - ☒ 4. 17

Question ID : 630680451586
Option 1 ID : 6306801763443
Option 2 ID : 6306801763444
Option 3 ID : 6306801763442
Option 4 ID : 6306801763445

Status : Answered

Chosen Option : 4

Q.7 In an election, candidate A got 64% of the total valid votes. 30% of the total votes were declared invalid. If the total number of votes is 55,000, find the number of valid votes polled in favour of the candidate.

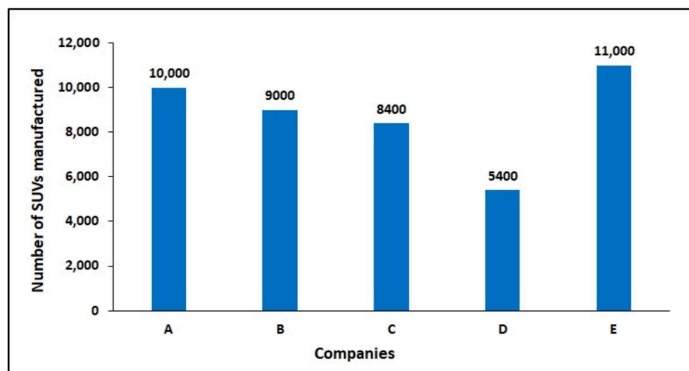
- Ans
- ☐ 1. 24,000
 - ☐ 2. 22,660
 - ☐ 3. 25,500
 - ☒ 4. 24,640

Question ID : 630680451588
Option 1 ID : 6306801763453
Option 2 ID : 6306801763450
Option 3 ID : 6306801763452
Option 4 ID : 6306801763451

Status : Answered

Chosen Option : 4

Q.8 The given bar chart shows the number of SUVs manufactured by five different companies (A, B, C, D and E) in 2022. SUVs manufactured by C is what percent of SUVs manufactured by A?



- Ans**
- ☒ 1. 80%
 - ☒ 2. 78%
 - ☒ 3. 77%
 - ☒ 4. 84%

Question ID : 630680451583

Option 1 ID : 6306801763433

Option 2 ID : 6306801763430

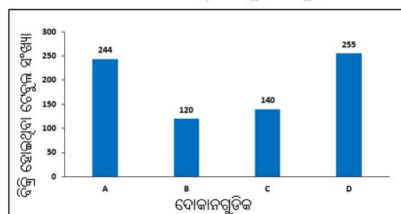
Option 3 ID : 6306801763432

Option 4 ID : 6306801763431

Status : Answered

Chosen Option : 4

Q.9 ପ୍ରଦତ୍ତ ବାରଗ୍ରାଫ, ଚାରୋଟି ଭିନ୍ନ ଦୋକାନ A, B, C ଏବଂ D ଦ୍ୱାରା ବିକ୍ରି ହୋଇଥିବା ଟେବୁଲ୍ ସଂଖ୍ୟା ଦର୍ଶାଏ । କ୍ଷେତ୍ର A ଦ୍ୱାରା ବିକ୍ରି ହୋଇଥିବା ଟେବୁଲ୍ ଏବଂ କ୍ଷେତ୍ର C ଦ୍ୱାରା ବିକ୍ରି ହୋଇଥିବା ଟେବୁଲ୍‌ର ଅନୁପାତ କେତେ?



- Ans**
- ☒ 1. 61: 35
 - ☒ 2. 20: 33
 - ☒ 3. 16: 55
 - ☒ 4. 61: 30

Question ID : 630680451581

Option 1 ID : 6306801763422

Option 2 ID : 6306801763424

Option 3 ID : 6306801763423

Option 4 ID : 6306801763425

Status : Answered

Chosen Option : 1

Q.10 The two angles of a quadrilateral are 67° and 107° . If the other two angles are in the ratio of 43: 50, then find the measure of each of them.

- Ans**
- ☒ 1. 100° and 84°
 - ☒ 2. 94° and 90°
 - ☒ 3. 80° and 74°
 - ☒ 4. 100° and 86°

Question ID : 630680451590
Option 1 ID : 6306801763458
Option 2 ID : 6306801763460
Option 3 ID : 6306801763461
Option 4 ID : 6306801763459

Status : Answered

Chosen Option : 4

Q.11 Which of the following is not a macronutrient required by the body?

- Ans**
- ☒ 1. Iodine
 - ☒ 2. Carbohydrates
 - ☒ 3. Fats
 - ☒ 4. Proteins

Question ID : 630680451599
Option 1 ID : 6306801763496
Option 2 ID : 6306801763494
Option 3 ID : 6306801763497
Option 4 ID : 6306801763495

Status : Answered

Chosen Option : 1

Q.12 CPCB Stands for:

- Ans**
- ☒ 1. Central Pollution and Prevention Control Board
 - ☒ 2. Commission for Pollution Control and Biohazard
 - ☒ 3. Central Pollution Control Board
 - ☒ 4. Conventional Pollution Prevention Board

Question ID : 630680451598
Option 1 ID : 6306801763492
Option 2 ID : 6306801763490
Option 3 ID : 6306801763491
Option 4 ID : 6306801763493

Status : Answered

Chosen Option : 1

Q.13 Salt satyagraha march happened in which of the following year?

Ans ☒ 1. 1932

☒ 2. 1931

☒ 3. 1929

☒ 4. 1930

Question ID : 630680451601

Option 1 ID : 6306801763505

Option 2 ID : 6306801763504

Option 3 ID : 6306801763502

Option 4 ID : 6306801763503

Status : Answered

Chosen Option : 4

Q.14 Tropical cyclones are intense low-pressure areas confined to the area lying between _____ and _____ latitudes.

Ans ☒ 1. 30° N and 30° S

☒ 2. 40° N and 40° S

☒ 3. 50° N and 50° S

☒ 4. 60° N and 60° S

Question ID : 630680451607

Option 1 ID : 6306801763526

Option 2 ID : 6306801763527

Option 3 ID : 6306801763528

Option 4 ID : 6306801763529

Status : Not Attempted and
Marked For Review

Chosen Option : --

Q.15 Which of the following is not under the general classifications as per physiographical features of India?

Ans ☒ 1. Costal Plains

☒ 2. Aravali hills

☒ 3. Himalayan Mountain

☒ 4. Peninsular plateau

Question ID : 630680451605

Option 1 ID : 6306801763520

Option 2 ID : 6306801763521

Option 3 ID : 6306801763518

Option 4 ID : 6306801763519

Status : Answered

Chosen Option : 1

Q.16 Which of the following is not a factor affecting evaporation?

- Ans ☒ 1. decrease in pressure
☒ 2. Increase of surface area
☒ 3. Increase of temperature
☒ 4. decrease in humidity

Question ID : 630680451603
Option 1 ID : 6306801763513
Option 2 ID : 6306801763510
Option 3 ID : 6306801763511
Option 4 ID : 6306801763512

Status : Answered

Chosen Option : 1

Q.17 What is the percentage of oxygen in exhaled air?

- Ans ☒ 1. 18.0
☒ 2. 16.4
☒ 3. 17.0
☒ 4. 17.4

Question ID : 630680451602
Option 1 ID : 6306801763509
Option 2 ID : 6306801763507
Option 3 ID : 6306801763506
Option 4 ID : 6306801763508

Status : Not Attempted and
Marked For Review

Chosen Option : --

Q.18 E-waste consists of:

- Ans ☒ 1. Dismantle part of Computer
☒ 2. Plastic
☒ 3. Dry waste
☒ 4. Wet waste

Question ID : 630680451600
Option 1 ID : 6306801763498
Option 2 ID : 6306801763499
Option 3 ID : 6306801763501
Option 4 ID : 6306801763500

Status : Answered

Chosen Option : 3

Q.19 What is the critical temperature of carbon dioxide?

Ans ☒ 1. 30.98°C

☐ 2. 50.98°C

☐ 3. 40.98°C

☐ 4. 20.98°C

Question ID : 630680451604

Option 1 ID : 6306801763515

Option 2 ID : 6306801763517

Option 3 ID : 6306801763516

Option 4 ID : 6306801763514

Status : Not Answered

Chosen Option : --

Q.20 ନିମ୍ନୋକ୍ତ ମଧ୍ୟରୁ କେଉଁଟି ଶକ୍ତିର ଏକ ପାରମ୍ପରିକ ରୂପ ଅଟେ?

Ans ☐ 1. ପାରମାଣବିକ ଶକ୍ତି

☐ 2. ଜୁଆର ଶକ୍ତି

☒ 3. ଚୈଳ

☐ 4. ବାୟୋମାସ୍

Question ID : 630680451606

Option 1 ID : 6306801763523

Option 2 ID : 6306801763522

Option 3 ID : 6306801763525

Option 4 ID : 6306801763524

Status : Answered

Chosen Option : 2

Q.21 Fill in the blank with the correct preposition.

The treasure was hidden _____ the ancient ruins.

Ans ☐ 1. within

☐ 2. near

☐ 3. through

☒ 4. beneath

Question ID : 630680451619

Option 1 ID : 6306801763577

Option 2 ID : 6306801763576

Option 3 ID : 6306801763575

Option 4 ID : 6306801763574

Status : Answered

Chosen Option : 1

Q.22 The word given in the brackets defines the modification of the noun. Based on this understanding fill in the blank with the correct adjective from the given options.
In the dark and (intriguing) _____ forest, the hikers cautiously navigated their way through the dense undergrowth, hoping to catch a glimpse of elusive wildlife.

Ans ☒ 1. mysterious

☐ 2. towering

☐ 3. enchanting

☐ 4. treacherous

Question ID : 630680451616

Option 1 ID : 6306801763564

Option 2 ID : 6306801763563

Option 3 ID : 6306801763562

Option 4 ID : 6306801763565

Status : Not Answered

Chosen Option : --

Q.23 Fill in the blank with the correct adverb.
She spoke _____ when delivering the important news to the anxious audience.

Ans ☐ 1. loud

☐ 2. louder

☐ 3. loudest

☒ 4. loudly

Question ID : 630680451617

Option 1 ID : 6306801763567

Option 2 ID : 6306801763568

Option 3 ID : 6306801763569

Option 4 ID : 6306801763566

Status : Answered

Chosen Option : 1

Q.24 Fill in the blank with the correct irregular verb.
She had _____ the novel before the movie adaptation was released.

Ans ☐ 1. reads

☐ 2. reading

☐ 3. readed

☒ 4. read

Question ID : 630680451620

Option 1 ID : 6306801763579

Option 2 ID : 6306801763580

Option 3 ID : 6306801763581

Option 4 ID : 6306801763578

Status : Answered

Chosen Option : 4

Q.25 Complete the sentence with the correct form of the tense:
When we got to the theatre, the show _____.

- Ans
- ☒ 1. starts
 - ☒ 2. is starting
 - ☒ 3. had started
 - ☒ 4. started

Question ID : 630680451624
Option 1 ID : 6306801763595
Option 2 ID : 6306801763597
Option 3 ID : 6306801763596
Option 4 ID : 6306801763594
Status : Answered
Chosen Option : 3

Q.26 Complete the sentence with the correct form of the tense:
By next month, I _____ my driving test.

- Ans
- ☒ 1. will pass
 - ☒ 2. passing
 - ☒ 3. passed
 - ☒ 4. will be passing

Question ID : 630680451623
Option 1 ID : 6306801763593
Option 2 ID : 6306801763591
Option 3 ID : 6306801763592
Option 4 ID : 6306801763590
Status : Answered
Chosen Option : 1

Q.27 Choose the correct punctuation from the given options:
I'm not sure when they will arrive _____.

- Ans
- ☒ 1. colon
 - ☒ 2. full stop
 - ☒ 3. question mark
 - ☒ 4. comma

Question ID : 630680451622
Option 1 ID : 6306801763589
Option 2 ID : 6306801763586
Option 3 ID : 6306801763588
Option 4 ID : 6306801763587
Status : Answered
Chosen Option : 2

Q.28 Fill in the blank with the correct collective noun.

A _____ of geese flew in formation across the sky.

- Ans
- ☒ 1. flock
 - ☐ 2. school
 - ☐ 3. pride
 - ☐ 4. herd

Question ID : 630680451618

Option 1 ID : 6306801763570

Option 2 ID : 6306801763571

Option 3 ID : 6306801763572

Option 4 ID : 6306801763573

Status : Answered

Chosen Option : 2

Q.29 Complete the sentence with the appropriate article to make it grammatically correct.

I need to buy _____ ingredients for the recipe.

- Ans
- ☒ 1. the
 - ☐ 2. an
 - ☐ 3. any
 - ☐ 4. a

Question ID : 630680451615

Option 1 ID : 6306801763560

Option 2 ID : 6306801763558

Option 3 ID : 6306801763561

Option 4 ID : 6306801763559

Status : Answered

Chosen Option : 1

Q.30 Choose the correct punctuation from the given options:

She asked me to bring some fruits _____ a bag of chips, and drinks to the picnic.

- Ans
- ☐ 1. colon
 - ☒ 2. comma
 - ☐ 3. full stop
 - ☐ 4. question mark

Question ID : 630680451621

Option 1 ID : 6306801763585

Option 2 ID : 6306801763583

Option 3 ID : 6306801763582

Option 4 ID : 6306801763584

Status : Answered

Chosen Option : 2

Q.31 'ସାପ' ଶବ୍ଦଟିର ସମାର୍ଥବୋଧକ ଶବ୍ଦ କେଉଁଟି ?

- Ans ☒ 1. ଭୂଜଙ୍ଗ
☐ 2. ଭୂମର
☐ 3. ଭୂଜ
☐ 4. ଭଜନ

Question ID : 630680451703
Option 1 ID : 6306801763899
Option 2 ID : 6306801763901
Option 3 ID : 6306801763898
Option 4 ID : 6306801763900

Status : Answered

Chosen Option : 1

Q.32 'ଆଖି ପକାଇବା'ର ଅର୍ଥ କେଉଁଟି ?

- Ans ☐ 1. ଲକ୍ଷ୍ୟ ରଖିବା
☐ 2. ମୃତ୍ୟୁବରଣ କରିବା
☐ 3. ମୋଟାମୋଟି ଦେଖିବା
☒ 4. ଲୋଲୁପ ଦୃଷ୍ଟି ପକାଇବା

Question ID : 630680451705
Option 1 ID : 6306801763906
Option 2 ID : 6306801763908
Option 3 ID : 6306801763909
Option 4 ID : 6306801763907

Status : Answered

Chosen Option : 4

Q.33 ନିମ୍ନୋକ୍ତ ମଧ୍ୟରୁ 'ପଖାଳ' ଶବ୍ଦଟିର ବିପରୀତବୋଧକ ଶବ୍ଦ କେଉଁଟି ?

- Ans ☐ 1. ସଜ
☒ 2. ତବତ
☐ 3. ବାସି
☐ 4. ନରମ

Question ID : 630680451702
Option 1 ID : 6306801763895
Option 2 ID : 6306801763896
Option 3 ID : 6306801763897
Option 4 ID : 6306801763894

Status : Answered

Chosen Option : 2

Q.34 'ପ୍ରାଚୀ' ଶବ୍ଦଟିର ବିପରୀତ ଶବ୍ଦଟିକୁ ଚିହ୍ନଟ କର ।

- Ans
- ☒ 1. ଅପ୍ରାଚୀ
 - ☒ 2. ନବୀନ
 - ☒ 3. ପ୍ରାଚୀନ
 - ☒ 4. ଅର୍ଦ୍ଧାଚୀନ

Question ID : 630680451704
Option 1 ID : 6306801763902
Option 2 ID : 6306801763904
Option 3 ID : 6306801763905
Option 4 ID : 6306801763903

Status : Answered

Chosen Option : 4

Q.35 'ଆଜ୍ଞା' ପଦଟି କେଉଁ ପ୍ରକାରର ଅବ୍ୟୟ ?

- Ans
- ☒ 1. ଭାବସୂଚକ ଅବ୍ୟୟ
 - ☒ 2. ବିକଳାର୍ଥକ ଅବ୍ୟୟ
 - ☒ 3. ସମ୍ବନ୍ଧସୂଚକ ଅବ୍ୟୟ
 - ☒ 4. ସମ୍ବୋଧନସୂଚକ ଅବ୍ୟୟ

Question ID : 630680451698
Option 1 ID : 6306801763881
Option 2 ID : 6306801763878
Option 3 ID : 6306801763880
Option 4 ID : 6306801763879

Status : Answered

Chosen Option : 3

Q.36 'ଅକାଳ କୁଷ୍ମାଣ୍ଡ' - ରୁଚି ପଦଟିର ଅର୍ଥ ଚିହ୍ନଟ କର ।

- Ans
- ☒ 1. ଅବୁଝା ହେବା
 - ☒ 2. ଅକାଳରେ ପଡ଼ି ବାଟବଣା ହେବା
 - ☒ 3. ନିତାନ୍ତ ଅଯୋଗ୍ୟ
 - ☒ 4. ଅକାଳରେ ମରିଯିବା

Question ID : 630680451706
Option 1 ID : 6306801763913
Option 2 ID : 6306801763911
Option 3 ID : 6306801763912
Option 4 ID : 6306801763910

Status : Answered

Chosen Option : 3

Q.37 'ପ୍ରତୀକ' ଶବ୍ଦରେ ବ୍ୟବହୃତ ଉପସର୍ଗଟିକୁ ଚିହ୍ନିଅ ?

- Ans
- ☒ 1. ପ୍ର
 - ☒ 2. ଅତି
 - ☒ 3. ପରା
 - ☒ 4. ପ୍ରତି

Question ID : 630680451701
Option 1 ID : 6306801763890
Option 2 ID : 6306801763893
Option 3 ID : 6306801763891
Option 4 ID : 6306801763892

Status : Answered

Chosen Option : 4

Q.38 ସାରଳା ଦାସ ଓଡ଼ିଶାରେ ମୁନି ଭାବରେ ପରିଚିତ - ରେଖାଙ୍କିତ ପଦଟି କେଉଁ ପ୍ରକାରର ବିଶେଷ ?

- Ans
- ☒ 1. ଗୁଣାଚରକ ବିଶେଷ
 - ☒ 2. ଜାତିବାଚକ ବିଶେଷ
 - ☒ 3. କ୍ରିୟାବାଚକ ବିଶେଷ
 - ☒ 4. ବସ୍ତୁବାଚକ ବିଶେଷ

Question ID : 630680451699
Option 1 ID : 6306801763883
Option 2 ID : 6306801763884
Option 3 ID : 6306801763885
Option 4 ID : 6306801763882

Status : Answered

Chosen Option : 1

Q.39 ନିମ୍ନୋକ୍ତ ମଧ୍ୟରୁ କେଉଁଟି ବିଶେଷ ?

- Ans
- ☒ 1. ଅତଏବ
 - ☒ 2. ପରୁଷି
 - ☒ 3. କିଏ
 - ☒ 4. କାଠ

Question ID : 630680451697
Option 1 ID : 6306801763874
Option 2 ID : 6306801763876
Option 3 ID : 6306801763875
Option 4 ID : 6306801763877

Status : Answered

Chosen Option : 4

Q.40 'ଭୂଗୋଳ' ଶବ୍ଦରେ 'ଭଳ' ପ୍ରତ୍ୟୟ ଯୋଗହେଲେ କେଉଁ ଶବ୍ଦ ହୁଏ ?

- Ans
- ☒ 1. ଭୌଗଳିକ
 - ☒ 2. ଭୂଗଳିକ
 - ☒ 3. ଭୂଗୋଳିକ
 - ☒ 4. ଭୌଗୋଳିକ

Question ID : 630680451700
Option 1 ID : 6306801763887
Option 2 ID : 6306801763889
Option 3 ID : 6306801763886
Option 4 ID : 6306801763888
Status : Answered
Chosen Option : 4

Section : Part II Pedagogy

Q.1 A grammatically correct declarative sentence that makes sense, which is either true or false but not both, is a:

- Ans
- ☒ 1. undefined term
 - ☒ 2. definition
 - ☒ 3. proposition
 - ☒ 4. axiom

Question ID : 630680451683
Option 1 ID : 6306801763824
Option 2 ID : 6306801763823
Option 3 ID : 6306801763822
Option 4 ID : 6306801763825
Status : Answered
Chosen Option : 3

Q.2 Which of the following represents the lowest level of Bloom's taxonomy in case of teaching mathematics to a high school student?

- Ans
- ☒ 1. Remembering
 - ☒ 2. Creating
 - ☒ 3. Applying
 - ☒ 4. Organising

Question ID : 630680451685
Option 1 ID : 6306801763833
Option 2 ID : 6306801763831
Option 3 ID : 6306801763830
Option 4 ID : 6306801763832
Status : Answered
Chosen Option : 1

Q.3 ନିମ୍ନଲିଖିତ ଉଦ୍ଦେଶ୍ୟଗୁଡ଼ିକ ମଧ୍ୟରୁ କେଉଁଟି 'ଏକ ବୃତ୍ତର ପରିଧି' ବିଷୟ ପ୍ରତି ଅନୁକୂଳ ନୁହେଁ?

Ans ☒ 1.

ଶିକ୍ଷାର୍ଥୀମାନଙ୍କୁ, ଏକ ବୃତ୍ତର ପରିଧି ଏବଂ ବ୍ୟାସ ମଧ୍ୟରେ ସମ୍ପର୍କ ନିର୍ଣ୍ଣୟ କରିବା ପାଇଁ ସକ୍ଷମ କରିବା

☒ 2.

ଶିକ୍ଷାର୍ଥୀମାନଙ୍କୁ, ବୃତ୍ତର ପରିଧି ସମ୍ବନ୍ଧୀୟ ସୂତ୍ର ବ୍ୟବହାର କରି, ଏହା ସମ୍ବନ୍ଧୀୟ ସମସ୍ୟାଗୁଡ଼ିକର ସମାଧାନ କରିବା ପାଇଁ ସକ୍ଷମ କରିବା

☒ 3.

ଶିକ୍ଷାର୍ଥୀମାନଙ୍କୁ, ବୃତ୍ତର କ୍ଷେତ୍ରଫଳ ସମ୍ବନ୍ଧୀୟ ସମସ୍ୟା ସମାଧାନ କରିବାକୁ ସକ୍ଷମ କରିବା

☒ 4. ଶିକ୍ଷାର୍ଥୀମାନଙ୍କୁ, ଏକ ବୃତ୍ତର ଧାରଣା ବୁଝିବାକୁ ସକ୍ଷମ କରିବା

Question ID : 630680451684

Option 1 ID : 6306801763827

Option 2 ID : 6306801763829

Option 3 ID : 6306801763828

Option 4 ID : 6306801763826

Status : Answered

Chosen Option : 2

Q.4 A teacher wrote natural numbers 1 to 20 into two tables as follows.

Table I: 2, 3, 5, 7, 11, 13, 17, 19

Table II: 4, 6, 8, 9, 10, 12, 14, 15, 16, 18, 20

Further she asked the students to share observations about this grouping. Which of the following observations is NOT correct?

Ans ☒ 1. Numbers in table I are prime numbers.

☒ 2. Table II consists of even prime numbers.

☒ 3. Numbers in table II have more than two factors.

☒ 4. Numbers in table I cannot be divisible by 5.

Question ID : 630680451686

Option 1 ID : 6306801763837

Option 2 ID : 6306801763834

Option 3 ID : 6306801763836

Option 4 ID : 6306801763835

Status : Answered

Chosen Option : 2

Q.5 A comprehensive series of meaningful learning experiences built around a central theme or idea and organised in such a way as to result in appropriate behavioural changes in pupils is called a:

Ans ☒ 1. unit plan

☒ 2. year plan

☒ 3. lesson plan

☒ 4. unit test

Question ID : 630680451687

Option 1 ID : 6306801763838

Option 2 ID : 6306801763839

Option 3 ID : 6306801763840

Option 4 ID : 6306801763841

Status : Answered

Chosen Option : 2

Q.6 Which pedagogical tool in EVS can be most effective in fostering global environmental awareness?

Ans ☒ 1. Comparative studies of different ecosystems

☐ 2. Only local case studies

☐ 3. Ignoring international environmental events

☐ 4. Only reading textbooks

Question ID : 630680451641

Option 1 ID : 6306801763664

Option 2 ID : 6306801763662

Option 3 ID : 6306801763665

Option 4 ID : 6306801763663

Status : Answered

Chosen Option : 1

Q.7 How does EVS contribute to the holistic development of a child?

Ans ☐ 1. By teaching only laboratory techniques

☐ 2. By focusing solely on exam preparation

☒ 3. By connecting academic knowledge with real-world situations

☐ 4. By teaching only about plants

Question ID : 630680451640

Option 1 ID : 6306801763661

Option 2 ID : 6306801763658

Option 3 ID : 6306801763660

Option 4 ID : 6306801763659

Status : Answered

Chosen Option : 3

Q.8 EVS ଶିକ୍ଷାବିଜ୍ଞାନ ପରିପ୍ରେକ୍ଷୀରେ କେଉଁ ନୀତି, ଗଢ଼ାଏ ବୁଝାମଣା ଏବଂ ଦୀର୍ଘସମୟ ପାଇଁ ଧାରଣଶକ୍ତିକୁ ସୁନିଶ୍ଚିତ କରି ଧାରଣାଗୁଡ଼ିକର ପୁନର୍ବାର ପରିଦର୍ଶନ ହେଉଥିବା ପ୍ରକ୍ରିୟାର ସମୀକ୍ଷା ଆବଶ୍ୟକ କରେ?

Ans ☐ 1. ଏକକ-ସମୟ ଶିକ୍ଷଣର ସିଦ୍ଧାନ୍ତ (Principle of One-Time Learning)

☒ 2. ପର୍ଯ୍ୟାୟ ପୁନରାବୃତ୍ତିର ସିଦ୍ଧାନ୍ତ (Principle of Periodic Reiteration)

☐ 3. କେବଳ ଅଗ୍ରଗତିର ସିଦ୍ଧାନ୍ତ (Principle of Forward-only Progression)

☐ 4. ପ୍ରାରମ୍ଭିକ ଦକ୍ଷତାର ସିଦ୍ଧାନ୍ତ (Principle of Initial Mastery)

Question ID : 630680451643

Option 1 ID : 6306801763670

Option 2 ID : 6306801763671

Option 3 ID : 6306801763672

Option 4 ID : 6306801763673

Status : Answered

Chosen Option : 2

Q.9 Which of the following best describes the significance of Environmental Studies (EVS) in education?

- Ans
- ☒ 1. To understand geographical landscapes only.
 - ☒ 2. To solely focus on biological species and their classifications.
 - ☒ 3. To develop an interdisciplinary understanding of our natural and human-made environments.
 - ☒ 4. To study political systems in different countries.

Question ID : 630680451639
Option 1 ID : 6306801763654
Option 2 ID : 6306801763655
Option 3 ID : 6306801763656
Option 4 ID : 6306801763657
Status : Answered
Chosen Option : 3

Q.10 Which of the following principles stresses the importance of relating EVS concepts with daily life experiences?

- Ans
- ☒ 1. Principle of Theory
 - ☒ 2. Principle of Correlation
 - ☒ 3. Principle of Application
 - ☒ 4. Principle of Practice

Question ID : 630680451642
Option 1 ID : 6306801763667
Option 2 ID : 6306801763669
Option 3 ID : 6306801763666
Option 4 ID : 6306801763668
Status : Answered
Chosen Option : 2

Q.11 Fill in the blank:

Personal interest in learning English and personal need to accomplish a goal are examples of _____.

- Ans
- ☒ 1. intrinsic motivation
 - ☒ 2. areas of demand
 - ☒ 3. extrinsic motivation
 - ☒ 4. social environment

Question ID : 630680451675
Option 1 ID : 6306801763793
Option 2 ID : 6306801763791
Option 3 ID : 6306801763792
Option 4 ID : 6306801763790
Status : Answered
Chosen Option : 1

Q.12 What is one of the main aims of teaching prose to learners?

- Ans
- ☒ 1. Enabling socialization skills
 - ☒ 2. Facilitating usage of internet
 - ☒ 3. Development of digital skills
 - ☒ 4. Development of language ability

Question ID : 630680451676

Option 1 ID : 6306801763794

Option 2 ID : 6306801763796

Option 3 ID : 6306801763795

Option 4 ID : 6306801763797

Status : Answered

Chosen Option : 4

Q.13 Listening skills is a type of ____.

- Ans
- ☒ 1. time management skills
 - ☒ 2. communication skills
 - ☒ 3. creativity skills
 - ☒ 4. data analysis skills

Question ID : 630680451672

Option 1 ID : 6306801763781

Option 2 ID : 6306801763779

Option 3 ID : 6306801763780

Option 4 ID : 6306801763778

Status : Answered

Chosen Option : 2

Q.14 Identify the non-verbal cue which signifies the manner of speaking.

- Ans
- ☒ 1. Emotion
 - ☒ 2. Words
 - ☒ 3. Mood
 - ☒ 4. Tone

Question ID : 630680451673

Option 1 ID : 6306801763784

Option 2 ID : 6306801763785

Option 3 ID : 6306801763782

Option 4 ID : 6306801763783

Status : Answered

Chosen Option : 1

Q.15 Which of the following will help non-native English speakers in a language class?

- Ans
- ☒ 1. Allowing the students to speak in their own language in the class.
 - ☒ 2. Explain that it is not acceptable to ask questions during the class.
 - ☒ 3. Pairing them with students who speak their language to talk during the class.
 - ☒ 4. Asking questions by the teacher at first that require short answers.

Question ID : 630680451674
Option 1 ID : 6306801763786
Option 2 ID : 6306801763789
Option 3 ID : 6306801763787
Option 4 ID : 6306801763788
Status : Answered
Chosen Option : 3

Q.16 କେଉଁ ପଦ୍ଧତି ମନୋବିଜ୍ଞାନ ସମ୍ପର୍କିତ ?

- Ans
- ☒ 1. ଭାଷା ସଂସ୍ପର୍ଶ ପଦ୍ଧତି
 - ☒ 2. ଆରୋହୀ ପଦ୍ଧତି
 - ☒ 3. ଆଲୋଚନା ପଦ୍ଧତି
 - ☒ 4. ଅବରୋହ ପଦ୍ଧତି

Question ID : 630680451712
Option 1 ID : 6306801763936
Option 2 ID : 6306801763935
Option 3 ID : 6306801763934
Option 4 ID : 6306801763937
Status : Answered
Chosen Option : 1

Q.17 ସୂକ୍ଷ୍ମ ଅଧ୍ୟାପନା ପଦ୍ଧତିର ପ୍ରବର୍ତ୍ତନ କିଏ ?

- Ans
- ☒ 1. ଏଡ଼ୱାର୍ଡ ସାପିର
 - ☒ 2. କାର୍ତ୍ତବିରାଜ
 - ☒ 3. ଡକ୍ଟର ଏଚ କିଶୋରୀ
 - ☒ 4. ଆଲେକ୍ସ

Question ID : 630680451713
Option 1 ID : 6306801763941
Option 2 ID : 6306801763938
Option 3 ID : 6306801763939
Option 4 ID : 6306801763940
Status : Not Answered
Chosen Option : --

Q.18 କେଉଁ ଧାରଣାଟି ଜ୍ଞାନାତ୍ମକ ଉଦ୍ଦେଶ୍ୟ ଅନୁର୍ଗତ ?

- Ans
- ☒ 1. ଶିଶୁର ସୃଜନଶକ୍ତିର ବିକାଶ କରାଇବା
 - ☒ 2. ଭାଷାର ଭିନ୍ନ ଭିନ୍ନ ବିଭାଗ ସହିତ ପରିଚିତ କରାଇବା
 - ☒ 3. ଲିଖିତ ଭାଷା ଅଧ୍ୟୟନ କରିବା
 - ☒ 4. ଅଳଙ୍କାର ସଂପର୍କରେ ସୂଚନା ନ ଦେବା

Question ID : 630680451711
Option 1 ID : 6306801763931
Option 2 ID : 6306801763930
Option 3 ID : 6306801763932
Option 4 ID : 6306801763933

Status : Answered

Chosen Option : 2

Q.19 ଟିଏ- କେଉଁ ବିଭକ୍ତିର ଚିହ୍ନ ?

- Ans
- ☒ 1. ୁତ୍ତତୀୟ
 - ☒ 2. ସପ୍ତମୀ
 - ☒ 3. ପ୍ରଥମୀ
 - ☒ 4. ଦ୍ୱିତୀୟା

Question ID : 630680451714
Option 1 ID : 6306801763944
Option 2 ID : 6306801763945
Option 3 ID : 6306801763942
Option 4 ID : 6306801763943

Status : Answered

Chosen Option : 3

Q.20 ମାତୃଭାଷା ମଣିଷର କାହା ସଦୃଶ ?

- Ans
- ☒ 1. ମାଆ
 - ☒ 2. ବାପା
 - ☒ 3. ଭାଇ
 - ☒ 4. ପଡୋଶୀ

Question ID : 630680451710
Option 1 ID : 6306801763926
Option 2 ID : 6306801763927
Option 3 ID : 6306801763928
Option 4 ID : 6306801763929

Status : Answered

Chosen Option : 1