



ଓଡ଼ିଶା ବିଦ୍ୟାଳୟ ଶିକ୍ଷା କାର୍ଯ୍ୟକ୍ରମ ପ୍ରାଧିକାରଣ
Odisha School Education Programme Authority
Government of Odisha

Application Seq No.	
Participant ID	
Participant Name	
Test Center Name	Ganesh Institute Of Engineering And Technology
Test Date	08/11/2023
Test Time	9:00 AM - 11:30 AM
Subject	Junior Teacher (Schematic) CATEGORY II (Science)

Section : Part I General English

OdishaJobAlert.Net

Comprehension:

Refer to the below passage and answer the questions.

The little old house was out with a little new shed
In front at the edge of the road where the traffic sped,
A roadside stand that too pathetically pled,
It would not be fair to say for a dole of bread,
But for some of the money, the cash, whose flow supports
The flower of cities from sinking and withering faint.
The polished traffic passed with a mind ahead,
Or if ever aside a moment, then out of sorts
At having the landscape marred with the artless paint
Of signs that with N turned wrong and S turned wrong
Offered for sale wild berries in wooden quarts,
Or crook-necked golden squash with silver warts,
Or beauty rest in a beautiful mountain scene,
You have the money, but if you want to be mean,
Why keep your money (this crossly) and go along.
The hurt to the scenery wouldn't be my complaint
So much as the trusting sorrow of what is unsaid:
Here far from the city we make our roadside stand
And ask for some city money to feel in hand
To try if it will not make our being expand,
And give us the life of the moving-pictures' promise
That the party in power is said to be keeping from us.

It is in the news that all these pitiful kin
Are to be bought out and mercifully gathered in
To live in villages, next to the theatre and the store,
Where they won't have to think for themselves anymore,
While greedy good-doers, beneficent beasts of prey,
Swarm over their lives enforcing benefits
That are calculated to soothe them out of their wits,
And by teaching them how to sleep they sleep all day,
Destroy their sleeping at night the ancient way.

Sometimes I feel myself I can hardly bear
The thought of so much childish longing in vain,
The sadness that lurks near the open window there,
That waits all day in almost open prayer
For the squeal of brakes, the sound of a stopping car,
Of all the thousand selfish cars that pass,
Just one to inquire what a farmer's prices are,
And one did stop, but only to plow up grass
In using the yard to back and turn around;
And another to ask the way to where it was bound;

And another to ask could they sell it a gallon of gas
They couldn't (this crossly); they had none, didn't it see?

No, in country money, the country scale of gain,
the requisite lift of spirit has never been found,
Or so the voice of the country seems to complain,
I can't help owning the great relief it would be
To put these people at one stroke out of their pain.
And then next day as I come back into the sane,
I wonder how I should like you to come to me
And offer to put me gently out of my pain.

SubQuestion No : 1

Q.1 Select the most appropriate **SYNONYM** of the given word below.
Swarm

- Ans**
- ☒ 1. Loner
 - ☒ 2. Need
 - ☒ 3. Individual
 - ☒ 4. Flock

Question ID : 630680448295

Option 1 ID : 6306801750383

Option 2 ID : 6306801750380

Option 3 ID : 6306801750381

Option 4 ID : 6306801750382

Status : Answered

Chosen Option : 2

Comprehension:

Refer to the below passage and answer the questions.

The little old house was out with a little new shed
In front at the edge of the road where the traffic sped,
A roadside stand that too pathetically pled,
It would not be fair to say for a dole of bread,
But for some of the money, the cash, whose flow supports
The flower of cities from sinking and withering faint.
The polished traffic passed with a mind ahead,
Or if ever aside a moment, then out of sorts
At having the landscape marred with the artless paint
Of signs that with N turned wrong and S turned wrong
Offered for sale wild berries in wooden quarts,
Or crook-necked golden squash with silver warts,
Or beauty rest in a beautiful mountain scene,
You have the money, but if you want to be mean,
Why keep your money (this crossly) and go along.
The hurt to the scenery wouldn't be my complaint
So much as the trusting sorrow of what is unsaid:
Here far from the city we make our roadside stand
And ask for some city money to feel in hand
To try if it will not make our being expand,
And give us the life of the moving-pictures' promise
That the party in power is said to be keeping from us.

It is in the news that all these pitiful kin
Are to be bought out and mercifully gathered in
To live in villages, next to the theatre and the store,
Where they won't have to think for themselves anymore,
While greedy good-doers, beneficent beasts of prey,
Swarm over their lives enforcing benefits
That are calculated to soothe them out of their wits,
And by teaching them how to sleep they sleep all day,
Destroy their sleeping at night the ancient way.

Sometimes I feel myself I can hardly bear
The thought of so much childish longing in vain,
The sadness that lurks near the open window there,
That waits all day in almost open prayer
For the squeal of brakes, the sound of a stopping car,
Of all the thousand selfish cars that pass,
Just one to inquire what a farmer's prices are,
And one did stop, but only to plow up grass
In using the yard to back and turn around;
And another to ask the way to where it was bound;

And another to ask could they sell it a gallon of gas
They couldn't (this crossly); they had none, didn't it see?

No, in country money, the country scale of gain,
the requisite lift of spirit has never been found,
Or so the voice of the country seems to complain,
I can't help owning the great relief it would be
To put these people at one stroke out of their pain.
And then next day as I come back into the sane,
I wonder how I should like you to come to me
And offer to put me gently out of my pain.

SubQuestion No : 2

Q.2 Select the most appropriate meaning of the given word below.
Withering

- Ans ☒ 1. To give a spoken statement of an opinion or thought
☒ 2. The particular state that something or someone is in
☒ 3. One that is intended to make someone feel ashamed
☒ 4. The act of thinking about or considering something, an idea or opinion, or a set of ideas about a particular subject

Question ID : 630680448296

Option 1 ID : 6306801750384

Option 2 ID : 6306801750387

Option 3 ID : 6306801750385

Option 4 ID : 6306801750386

Status : Answered

Chosen Option : 4

Comprehension:

Refer to the below passage and answer the questions.
The little old house was out with a little new shed
In front at the edge of the road where the traffic sped,
A roadside stand that too pathetically pled,
It would not be fair to say for a dole of bread,
But for some of the money, the cash, whose flow supports
The flower of cities from sinking and withering faint.
The polished traffic passed with a mind ahead,
Or if ever aside a moment, then out of sorts
At having the landscape marred with the artless paint
Of signs that with N turned wrong and S turned wrong
Offered for sale wild berries in wooden quarts,
Or crook-necked golden squash with silver warts,
Or beauty rest in a beautiful mountain scene,
You have the money, but if you want to be mean,
Why keep your money (this crossly) and go along.
The hurt to the scenery wouldn't be my complaint
So much as the trusting sorrow of what is unsaid:
Here far from the city we make our roadside stand
And ask for some city money to feel in hand
To try if it will not make our being expand,
And give us the life of the moving-pictures' promise
That the party in power is said to be keeping from us.

It is in the news that all these pitiful kin
Are to be bought out and mercifully gathered in
To live in villages, next to the theatre and the store,
Where they won't have to think for themselves anymore,
While greedy good-doers, beneficent beasts of prey,
Swarm over their lives enforcing benefits
That are calculated to soothe them out of their wits,
And by teaching them how to sleep they sleep all day,
Destroy their sleeping at night the ancient way.





Sometimes I feel myself I can hardly bear
The thought of so much childish longing in vain,
The sadness that lurks near the open window there,
That waits all day in almost open prayer
For the squeal of brakes, the sound of a stopping car,
Of all the thousand selfish cars that pass,
Just one to inquire what a farmer's prices are,
And one did stop, but only to plow up grass
In using the yard to back and turn around;
And another to ask the way to where it was bound;

And another to ask could they sell it a gallon of gas
They couldn't (this crossly); they had none, didn't it see?

No, in country money, the country scale of gain,
the requisite lift of spirit has never been found,
Or so the voice of the country seems to complain,
I can't help owning the great relief it would be
To put these people at one stroke out of their pain.
And then next day as I come back into the sane,
I wonder how I should like you to come to me
And offer to put me gently out of my pain.

SubQuestion No : 3

Q.3 Identify the suitable title for the poem.

- Ans  1. A beautiful mountain scene
 2. The old village and memories
 3. A Roadside Stand
 4. The little old house

Question ID : 630680448293

Option 1 ID : 6306801750373

Option 2 ID : 6306801750374

Option 3 ID : 6306801750375

Option 4 ID : 6306801750372

Status : Answered

Chosen Option : 2

Comprehension:

Refer to the below passage and answer the questions.

The little old house was out with a little new shed
In front at the edge of the road where the traffic sped,
A roadside stand that too pathetically pled,
It would not be fair to say for a dole of bread,
But for some of the money, the cash, whose flow supports
The flower of cities from sinking and withering faint.
The polished traffic passed with a mind ahead,
Or if ever aside a moment, then out of sorts
At having the landscape marred with the artless paint
Of signs that with N turned wrong and S turned wrong
Offered for sale wild berries in wooden quarts,
Or crook-necked golden squash with silver warts,
Or beauty rest in a beautiful mountain scene,
You have the money, but if you want to be mean,
Why keep your money (this crossly) and go along.
The hurt to the scenery wouldn't be my complaint
So much as the trusting sorrow of what is unsaid:
Here far from the city we make our roadside stand
And ask for some city money to feel in hand
To try if it will not make our being expand,
And give us the life of the moving-pictures' promise
That the party in power is said to be keeping from us.

It is in the news that all these pitiful kin
Are to be bought out and mercifully gathered in
To live in villages, next to the theatre and the store,
Where they won't have to think for themselves anymore,
While greedy good-doers, beneficent beasts of prey,
Swarm over their lives enforcing benefits
That are calculated to soothe them out of their wits,
And by teaching them how to sleep they sleep all day,
Destroy their sleeping at night the ancient way.





Sometimes I feel myself I can hardly bear
The thought of so much childish longing in vain,
The sadness that lurks near the open window there,
That waits all day in almost open prayer
For the squeal of brakes, the sound of a stopping car,
Of all the thousand selfish cars that pass,
Just one to inquire what a farmer's prices are,
And one did stop, but only to plow up grass
In using the yard to back and turn around;
And another to ask the way to where it was bound;

And another to ask could they sell it a gallon of gas
They couldn't (this crossly); they had none, didn't it see?

No, in country money, the country scale of gain,
the requisite lift of spirit has never been found,
Or so the voice of the country seems to complain,
I can't help owning the great relief it would be
To put these people at one stroke out of their pain.
And then next day as I come back into the sane,
I wonder how I should like you to come to me
And offer to put me gently out of my pain.

SubQuestion No : 4

Q.4 Identify the central theme of the poem.

- Ans**  1. The city people have a very empathetic approach towards the rural people, and they are always willing to help them.
-  2. The narrator observes that the city folks who drove through the countryside hardly paid any heed to the roadside stand or to the people who ran it. If at all they did, it was to complain.
-  3. The government and other social service agencies helped the poor rural people and were always available to assist the rural people.
-  4. The roadside people do not want the onlooker to buy consumable items from them.

Question ID : 630680448294

Option 1 ID : 6306801750379

Option 2 ID : 6306801750378

Option 3 ID : 6306801750376

Option 4 ID : 6306801750377

Status : Answered

Chosen Option : 2

Q.5 Read the below passage:

Most states do not have enough well-trained experts to retrieve or perform transplant procedures. Also, there is an acute shortage of advanced healthcare facilities to carry out a transplant. So, it is referred to other big centres in metropolitan cities. Organs retrieved from Aurangabad, Indore, Surat, and Pune are sent to Mumbai as these cities do not have super-specialty healthcare centres, informed officials.

Which of the following is the CORRECT logical inference based on the information in the above passage?

I) Most people do not go for organ transplants because it is very risky and expensive.

II) All metropolitan cities are well equipped and ready to handle critical transplant cases.

III) Most states refer organ transplant cases to big hospitals because they don't have well trained experts

- Ans
- ☒ 1. II only
 - ☒ 2. I only
 - ☒ 3. II & III only
 - ☒ 4. I, II, & III only

Question ID : 630680448298

Option 1 ID : 6306801750394

Option 2 ID : 6306801750393

Option 3 ID : 6306801750395

Option 4 ID : 6306801750392

Status : Answered

Chosen Option : 4

Q.6 Read the below passage:

The art of living is learnt easily by those who are positive and optimistic. From humble and simple people to great leaders in history, science, or literature, we can learn a lot about the art of living by having a peep into their lives. The daily routines of these great men not only reveal their different, maybe unique life styles, but also help us learn certain habits and practices they followed.

Which of the following is the CORRECT logical inference based on the information in the above passage?

I) The unique life styles of great men are revealed by their daily routines and practices that they follow.

II) For positive and optimistic people the art of living is learnt quite easily.

III) All great men followed good practices and their daily routines also helped them in shaping their lives.

- Ans
- ☒ 1. II & III only
 - ☒ 2. I, II, & III only
 - ☒ 3. II only
 - ☒ 4. I & III only

Question ID : 630680448297

Option 1 ID : 6306801750389

Option 2 ID : 6306801750390

Option 3 ID : 6306801750391

Option 4 ID : 6306801750388

Status : Answered

Chosen Option : 1

Comprehension:

Refer to the below passage and answer the questions.





The young generation is a diverse group of individuals who are below 21 years of age, which is the official age of adulthood. They include preschoolers, students between primary and secondary schooling age, and young people working part- or full-time. It is essential to acknowledge that the young come from various cultures and nations, each with unique values and behaviors.

Various factors influence a young person's lifestyle, including parents, government, faith, and the media. While television and films are among the sources of influence from the media, it is crucial to recognize that they are not the only ones. The educational institutions that a young person attends, the family that they come from, and the nation that they live in also shape their beliefs, thoughts, and actions. For many young people worldwide, their lives are characterized by poverty, with many working part-time to supplement their family incomes. For those who can afford to attend school, their educational workloads consume most of their time, leaving them with limited time for leisure.

Today's young spend more time with their peers, and studies have shown that they are the main influence on them, particularly with the trend towards smaller families and busier working parents. Parents, siblings, or teachers may also play a pivotal role in younger children's lives. For those who can afford it, music, handphones, and computers are increasingly engaging their attention.

SubQuestion No : 7

Q.7 Identify the suitable title for the passage.

- Ans**  **1. The Diverse Influences on the Young Generation**
-  **2. Primary and secondary schooling**
-  **3. Generation gap and Families**
-  **4. Educational institutions and their influence on young generation**

Question ID : 630680448288

Option 1 ID : 6306801750356

Option 2 ID : 6306801750357

Option 3 ID : 6306801750359

Option 4 ID : 6306801750358

Status : **Answered**

Chosen Option : 1

Comprehension:

Refer to the below passage and answer the questions.





The young generation is a diverse group of individuals who are below 21 years of age, which is the official age of adulthood. They include preschoolers, students between primary and secondary schooling age, and young people working part- or full-time. It is essential to acknowledge that the young come from various cultures and nations, each with unique values and behaviors.

Various factors influence a young person's lifestyle, including parents, government, faith, and the media. While television and films are among the sources of influence from the media, it is crucial to recognize that they are not the only ones. The educational institutions that a young person attends, the family that they come from, and the nation that they live in also shape their beliefs, thoughts, and actions. For many young people worldwide, their lives are characterized by poverty, with many working part-time to supplement their family incomes. For those who can afford to attend school, their educational workloads consume most of their time, leaving them with limited time for leisure.

Today's young spend more time with their peers, and studies have shown that they are the main influence on them, particularly with the trend towards smaller families and busier working parents. Parents, siblings, or teachers may also play a pivotal role in younger children's lives. For those who can afford it, music, handphones, and computers are increasingly engaging their attention.

SubQuestion No : 8

Q.8 Identify the central theme of the passage.

- Ans**  1. There is very limited resource and leisure time for youth which contributes to their boredom a lot.
-  2. The educational institutions that a young person attends, the family that they come from, and the nation that they live in does not contribute much to shape their beliefs, thoughts, and actions.
-  3. Parents, siblings, and teachers only play a pivotal role in younger children's lives. None of the other things matter when it comes to today's youth's belief system.
-  4. The young generation is a diverse group of individuals which is easily influenced by a lot of factors which includes their peers, parents, the educational institutions etc.

Question ID : 630680448289

Option 1 ID : 6306801750363

Option 2 ID : 6306801750360

Option 3 ID : 6306801750361

Option 4 ID : 6306801750362

Status : Answered

Chosen Option : 4

Comprehension:

Refer to the below passage and answer the questions.

The young generation is a diverse group of individuals who are below 21 years of age, which is the official age of adulthood. They include preschoolers, students between primary and secondary schooling age, and young people working part- or full-time. It is essential to acknowledge that the young come from various cultures and nations, each with unique values and behaviors.

Various factors influence a young person's lifestyle, including parents, government, faith, and the media. While television and films are among the sources of influence from the media, it is crucial to recognize that they are not the only ones. The educational institutions that a young person attends, the family that they come from, and the nation that they live in also shape their beliefs, thoughts, and actions. For many young people worldwide, their lives are characterized by poverty, with many working part-time to supplement their family incomes. For those who can afford to attend school, their educational workloads consume most of their time, leaving them with limited time for leisure.

Today's young spend more time with their peers, and studies have shown that they are the main influence on them, particularly with the trend towards smaller families and busier working parents. Parents, siblings, or teachers may also play a pivotal role in younger children's lives. For those who can afford it, music, handphoned, and computers are increasingly engaging their attention.

SubQuestion No : 9

Q.9 Select the most appropriate **SYNONYM** of the given word below.
Pivotal

- Ans** ☒ 1. Critical
 ☐ 2. Minor
 ☐ 3. Insignificant
 ☐ 4. Slight

Question ID : **630680448290**

Option 1 ID : **6306801750367**

Option 2 ID : **6306801750364**

Option 3 ID : **6306801750365**

Option 4 ID : **6306801750366**

Status : **Answered**

Chosen Option : **1**

Comprehension:

Refer to the below passage and answer the questions.

The young generation is a diverse group of individuals who are below 21 years of age, which is the official age of adulthood. They include preschoolers, students between primary and secondary schooling age, and young people working part- or full-time. It is essential to acknowledge that the young come from various cultures and nations, each with unique values and behaviors.

Various factors influence a young person's lifestyle, including parents, government, faith, and the media. While television and films are among the sources of influence from the media, it is crucial to recognize that they are not the only ones. The educational institutions that a young person attends, the family that they come from, and the nation that they live in also shape their beliefs, thoughts, and actions. For many young people worldwide, their lives are characterized by poverty, with many working part-time to supplement their family incomes. For those who can afford to attend school, their educational workloads consume most of their time, leaving them with limited time for leisure.

Today's young spend more time with their peers, and studies have shown that they are the main influence on them, particularly with the trend towards smaller families and busier working parents. Parents, siblings, or teachers may also play a pivotal role in younger children's lives. For those who can afford it, music, handphones, and computers are increasingly engaging their attention.

SubQuestion No : 10

Q.10 Select the most appropriate meaning of the given word below.

Leisure

- Ans ☒ 1. a thing that you can see or touch but that is not usually a living animal, plant, or person
- ☒ 2. the time when you are not working or doing other duties
- ☒ 3. to find information, a place, or an object, especially for the first time
- ☒ 4. a place, especially including buildings, where a particular activity happens

Question ID : 630680448291

Option 1 ID : 6306801750371

Option 2 ID : 6306801750368

Option 3 ID : 6306801750370

Option 4 ID : 6306801750369

Status : Not Answered

Chosen Option : --

Section : Part 1 General Odia

Comprehension:

“ଉତ୍କଳ କମଳା ବିଳାସ ଦୀର୍ଘକା
ମରାଳ ମାଳିନୀ ନୀଳାମ୍ବୁ ଚିଲିକା ।
“ଉତ୍କଳ କମଳା ବିଳାସ ଦୀର୍ଘକା
ମରାଳ ମାଳିନୀ ନୀଳାମ୍ବୁ ଚିଲିକା ।
ଉତ୍କଳର ତୁହି ଚାହୁ ଅଳଂକାର
ଉତ୍କଳ ଭୁବନେ ଶୋଭାର ଭଣ୍ଡାର ।
ସ୍ୱଭାବେ ଭାବୁକ ମାନସ ଉଲ୍ଲାସୀ
ଦିଗନ୍ତ ବିସ୍ତାରୀ ତୋର ବାରିରାଣୀ ।” (ରାଧାନାଥ)

SubQuestion No : 1

Q.1 ‘ଧନୀ’ ଶବ୍ଦର ବିପରୀତାର୍ଥବୋଧକ ଶବ୍ଦଟି କଣ?

- Ans ☒ 1. ମଧ୍ୟବିତ୍
- ☒ 2. ଭିକାରୀ
- ☒ 3. ନିର୍ଧନୀ
- ☒ 4. ନିର୍ଧନ

Question ID : 630680448308

Option 1 ID : 6306801750426

Option 2 ID : 6306801750427

Option 3 ID : 6306801750425

Option 4 ID : 6306801750424

Status : Answered

Chosen Option : 4

Comprehension:

“ଉତ୍କଳ କମଳା ବିଳାସ ଦୀର୍ଘକା
ମରାଳ ମାଳିନୀ ନୀଳାମ୍ବୁ ଚିଲିକା ।
“ଉତ୍କଳ କମଳା ବିଳାସ ଦୀର୍ଘକା
ମରାଳ ମାଳିନୀ ନୀଳାମ୍ବୁ ଚିଲିକା ।
ଉତ୍କଳର ତୁହି ଚାହୁ ଅଳଂକାର
ଉତ୍କଳ ଭୁବନେ ଶୋଭାର ଭଣ୍ଡାର ।
ସ୍ୱଭାବେ ଭାବୁକ ମାନସ ଉଲ୍ଲାସୀ
ଦିଗନ୍ତ ବିସ୍ତାରୀ ତୋର ବାରିରାଣୀ ।” (ରାଧାନାଥ)

SubQuestion No : 2

Q.2 ଉପଯୁକ୍ତ ଶବ୍ଦାଂଶ ଶୂନ୍ୟସ୍ଥାନ ପୂରଣ କର-
ଯାହା ସ୍ଥିର କରାଯାଇଛି ତାହା-----

- Ans** ☒ 1. ସ୍ଥିରୀକୃତ
☐ 2. ଅସ୍ଥିର
☐ 3. ଧୀରସ୍ଥିର
☐ 4. ସ୍ଥିରକର

Question ID : 630680448306

Option 1 ID : 6306801750416

Option 2 ID : 6306801750417

Option 3 ID : 6306801750419

Option 4 ID : 6306801750418

Status : Answered

Chosen Option : 1

Comprehension:

“ଉତ୍କଳ କମଳା ବିଳାସ ଦୀର୍ଘକା
ମରାଳ ମାଳିନୀ ନୀଳାମ୍ବୁ ଚିଲିକା ।
“ଉତ୍କଳ କମଳା ବିଳାସ ଦୀର୍ଘକା
ମରାଳ ମାଳିନୀ ନୀଳାମ୍ବୁ ଚିଲିକା ।
ଉତ୍କଳର ତୁହି ଚାହୁ ଅଳଂକାର
ଉତ୍କଳ ଭୁବନେ ଶୋଭାର ଭଣ୍ଡାର ।
ସ୍ୱଭାବେ ଭାବୁକ ମାନସ ଉଲ୍ଲାସୀ
ଦିଗନ୍ତ ବିସ୍ତାରୀ ତୋର ବାରିରାଣୀ ।” (ରାଧାନାଥ)

SubQuestion No : 3

Q.3 ନିମ୍ନୋକ୍ତ କେଉଁ ଶବ୍ଦଟି ‘ଇନ୍ଦ୍ର’ ଶବ୍ଦକୁ ବୁଝାଏ?

- Ans** ☐ 1. ମହାରାଜା
☐ 2. ଦେବତା
☒ 3. ଦେବରାଜ
☐ 4. ସ୍ୱାମୀ

Question ID : 630680448307

Option 1 ID : 6306801750422

Option 2 ID : 6306801750420

Option 3 ID : 6306801750421

Option 4 ID : 6306801750423

Status : Answered

Chosen Option : 3

Comprehension:

“ଉକ୍ରଳ କମଳା ବିଳାସ ଦୀର୍ଘକା
ମରାଳ ମାଳିନୀ ନୀଳାମ୍ବୁ ଚିଲିକା ।
“ଉକ୍ରଳ କମଳା ବିଳାସ ଦୀର୍ଘକା
ମରାଳ ମାଳିନୀ ନୀଳାମ୍ବୁ ଚିଲିକା ।
ଉକ୍ରଳର ତୁହି ଚାନ୍ଦୁ ଅଳଂକାର
ଉକ୍ରଳ ଭୁବନେ ଶୋଭାର ଉଷାର ।
ସ୍ୱଭାବେ ଭାବୁକ ମାନସ ଉଲ୍ଲାସୀ
ବିଗଳ ବିସ୍ତାରୀ ଚୋର ବାରିରାଣୀ ।” (ରାଧାନାଥ)

SubQuestion No : 4

Q.4 ଉପରୋକ୍ତ କବିତାଂଶରେ ‘ନୀଳାମ୍ବୁ’ ଶବ୍ଦର ଅର୍ଥ କଣ?

- Ans**  1. ନୀଳଶଙ୍ଖ
 2. ନୀଳଜଳ
 3. ନୀଳ ସମୁଦ୍ର
 4. ନୀଳପକ୍ଷୀ

Question ID : 630680448305

Option 1 ID : 6306801750413

Option 2 ID : 6306801750414

Option 3 ID : 6306801750412

Option 4 ID : 6306801750415

Status : Answered

Chosen Option : 3

OdishaJobAlert.Net

Comprehension:

ସାଂସାରିକ ବାଧାବିଘ୍ନ ମଧ୍ୟରେ ମନୁଷ୍ୟର ନିଜସ୍ବ ପ୍ରକାଶିତ ହେବା ସହଜ ନୁହେଁ । ଅନେକ ସମୟରେ ସାମାଜିକ ରୀତିନୀତି ମଧ୍ୟ ପ୍ରତିବନ୍ଧକ ସ୍ବରୂପ ହୋଇଥାଏ । ପୂର୍ବକାଳରେ ଆମ ଦେଶରେ ଗୃହସ୍ଥର ଆଚରଣ ସମ୍ବନ୍ଧରେ ଶିକ୍ଷା ଦିଆ ହେଉଥିଲା, କିନ୍ତୁ ଆଜିକାଲି ସେପରି ଶିକ୍ଷାର ପ୍ରଚଳନ ନାହିଁ । ମନୁଷ୍ୟର ଗୋଟାଏ ସଂକୃତିତ ଅବସ୍ଥା ଆସିଗଲେ, ସେ ସହଜରେ ଆଉ ସେଥିରୁ ନିଷ୍ପତ୍ତି ପାଏ ନାହିଁ । ଯେଉଁମାନଙ୍କର ମାନସିକ ପ୍ରବୃତ୍ତି ଚିକିତ୍ସା ଉଚ୍ଚବର୍ଗରେ ଥାଏ, ସେହିମାନେ କୌଣସି କାରଣବଶତଃ ଏପରି ଅବସ୍ଥାର ଅଧୀନ ହେଲେ ସୁଦ୍ଧା ବିନେ ସୁସମୟ ଆସି ଆତ୍ମଶକ୍ତିର ପରୀକ୍ଷା ଦେବା ପାଇଁ ସେମାନଙ୍କୁ ଗୋଟିଏ ଭିନ୍ନ କର୍ମକ୍ଷେତ୍ରରେ ପ୍ରବେଶ କରାଏ । ପ୍ରତ୍ୟେକ ଗୃହସ୍ଥ ନିଜର ପାରିବାରିକ ପରିସ୍ଥିତି ମଧ୍ୟରେ ଲକ୍ଷ୍ୟାନ୍ୱୟରେ ଅନୁକୂଳ ଅବସ୍ଥାକୁ ଲକ୍ଷ୍ୟ ରଖି ଶକ୍ତି ପ୍ରୟୋଗ କରିପାରେ ଓ ତଦ୍ୱାରା ତାର ଯେଉଁ ବିକାଶ ଜନ୍ମେ, ସେଥିରେ ନିଜସ୍ବର ଯଥେଷ୍ଟ ପରିଚୟ ମିଳେ । ନିଜସ୍ବ ରକ୍ଷା କରି ନ ପାରି ଅଧିକାଂଶ କେବଳ ଏକ ଧାରାବାହିକ କର୍ମପନ୍ଥାର ଆଶ୍ରୟରେ ଜୀବନକୁ କଟାଇ ଦିଅନ୍ତି । ମନୁଷ୍ୟସ୍ବର ଶ୍ରେଷ୍ଠ ନିଦର୍ଶନ ଏଥିରେ ନଥାଏ । ଜଗତରେ ଯେତେ ବିସ୍ମୟକର ଓ ମହତ୍ତ୍ୱ କାର୍ଯ୍ୟ ସମ୍ପାଦିତ ହୋଇଛି, ସେଥିରେ ଗୃହସ୍ଥର ପ୍ରଭାବ ଅଛି । ଗୃହସ୍ଥ ନିଜକୁ ଛୋଟ ମନେ କରିବା ଉଚିତ ନୁହେଁ । ଅର୍ଥ କିମ୍ବା କ୍ଷମତାର ପ୍ରଭାବକୁ ଭୟ କରି ସେ ଯଦି ଶକ୍ତିବିକାଶର ପଥରୋଧ କରିଦିଏ, ତାହାହେଲେ ଜଗତରେ ତା ପାଇଁ ଉପଯୁକ୍ତ ସ୍ଥାନ ରହେ ନାହିଁ । ଯେଉଁମାନେ ସର୍ବଦା ଦୀନ ହୀନ ଭାବରେ କାଳାତିପାତ କରନ୍ତି, ସେମାନଙ୍କର ପଥ ମଧ୍ୟ ସଂକୃତିତ ନୁହେଁ । ପ୍ରତ୍ୟେକ ଗୃହସ୍ଥର ଦୃଢ଼ କର୍ତ୍ତବ୍ୟ ଜ୍ଞାନ ରହିବା ବାଞ୍ଛନୀୟ । ସାମାନ୍ୟ କର୍ମ ନିଷ୍ଠାର ସହିତ ସମ୍ପାଦନ କରି ଜଣେ ଗୃହସ୍ଥ ଉଚ୍ଚସ୍ଥାନର ଅଧିକାରୀ ହୋଇପାରେ । କର୍ତ୍ତବ୍ୟଜ୍ଞାନରୁ ନିଜସ୍ବର ପରାକାଷ୍ଠ ମିଳେ । କର୍ତ୍ତବ୍ୟପରାୟଣତା ଗୃହୀ ସାଂସାରିକ ବିପଦର ସମ୍ମୁଖୀନ ହୋଇ ସୁଦ୍ଧା ନିଜସ୍ବ ହରାଏ ନାହିଁ । ତାର ଲକ୍ଷ୍ୟ ଗୋଟାଏ ଅବଲମ୍ବନକୁ ଆଶ୍ରୟ କରିଥାଏ । ଅବଲମ୍ବନ ନଥିଲେ ମନୁଷ୍ୟର ଗତି ସହଜ ହୁଏ ନାହିଁ ଓ ଲକ୍ଷ୍ୟର ସ୍ଥିରତା ମଧ୍ୟ ରହେ ନାହିଁ । ନିଜର ଆକାଂକ୍ଷା ଓ ରୁଚି ଅନୁଯାୟୀ ମନୁଷ୍ୟ ଅବଲମ୍ବନ ଗ୍ରହଣ କରେ । କେବଳ ଗୋଟିଏ ଗଢ଼ାଳିକା ପ୍ରବାହରେ ଭାସିଯିବା ଲୋକଙ୍କ ସଂଖ୍ୟା ସଂସାରରେ ଅନେକ ଦେଖାଯାଏ । ସେମାନଙ୍କୁ ପ୍ରକୃତ ଗୃହସ୍ଥ ବୋଲି କୁହାଯାଇ ନ ପାରେ । କୌଣସି ରୀତି କିମ୍ବା ପ୍ରଥାକୁ ଅନୁସରଣ କରି କାନ୍ଦୁନାଚୁଥିବା ଗ୍ରହଣ କରାଯାଇପାରେ; କିନ୍ତୁ ସେଥିରେ ବିଶେଷତ୍ୱ ପ୍ରତି ଲକ୍ଷ୍ୟ ଦେବା ଉଚିତ । ଯାବତୀୟ କର୍ମ କରି ନିଜର ଲକ୍ଷ୍ୟ ଆଡ଼କୁ ଅଗ୍ରସର ହେବା ପାଇଁ ଆଦୌ ବାଧା ନାହିଁ । କର୍ମରେ ଅନୁପ୍ରାଣିତ ହୋଇ ନିଜସ୍ବକୁ ଭୁଲିଯିବା ଦ୍ୱାରା ମନୁଷ୍ୟସ୍ବର ଅବମାନନା ଘଟେ । ସୈନିକ ଯୁଦ୍ଧକ୍ଷେତ୍ରରେ ସେନାନାୟକର ଆଦେଶ ଅତି ଦୃଢ଼ ଭାବରେ ପାଳନ କରେ । ସେପରି କରିବା ତାର ପ୍ରଧାନ କର୍ତ୍ତବ୍ୟ, କିନ୍ତୁ କର୍ତ୍ତବ୍ୟ ପାଳନ ବେଳେ ଅବଲମ୍ବନର ଶକ୍ତି ତାକୁ ଯେପରି ପ୍ରଫୁଲ୍ଲ ରଖେ ଓ ସେ ଯେପରି ଅଦମ୍ୟ ସାହସରେ ସଂଗ୍ରାମ କରେ, ତାହା କେବଳ ସେନାପତିଙ୍କର ଆଦେଶବାଣୀ ଶ୍ରବଣରେ ସମ୍ଭବପର ନୁହେଁ । ପ୍ରତ୍ୟେକ ଗୃହସ୍ଥର ବୀର ପରି ଆଚରଣ କରିବା ଗୋଟିଏ ଧର୍ମ । ଭୟାନ୍ତ୍ର ହେଲେ ତା ପାଇଁ ଜଗତରେ ଉଚ୍ଚସ୍ଥାନ ରହେ ନାହିଁ । ଗୃହସ୍ଥର ପ୍ରଧାନ ଧର୍ମ ସଂସାର କ୍ଷେତ୍ରରେ ନିଷ୍ଠାର ସହିତ କର୍ତ୍ତବ୍ୟ ପାଳନ ।

SubQuestion No : 5

Q.5 ମନୁଷ୍ୟର ସଂକୃତିତ ଅବସ୍ଥା ଆସିଗଲେ କଣ ହୁଏ?

- Ans ☒ 1. ସାମାଜିକ ରୀତିନୀତି ପ୍ରତିବନ୍ଧକ ସ୍ବରୂପ ଦେଖା ଦେଇଥାଏ ।
- ☒ 2. ସେ ସହଜରେ ଆଉ ସେଥିରୁ ନିଷ୍ପତ୍ତି ପାଏ ନାହିଁ ।
- ☒ 3. ଉଚ୍ଚସ୍ଥାନର ଅଧିକାରୀ ହୋଇପାରେ ।
- ☒ 4. ସାଂସାରିକ ବାଧାବିଘ୍ନ ଦେଖାଦିଏ ।

Question ID : 630680448301

Option 1 ID : 6306801750401

Option 2 ID : 6306801750402

Option 3 ID : 6306801750403

Option 4 ID : 6306801750400

Status : Answered

Chosen Option : 2

Comprehension:

ସାଂସାରିକ ବାଧାବିଧି ମଧ୍ୟରେ ମନୁଷ୍ୟର ନିଜସ୍ବ ପ୍ରକାଶିତ ହେବା ସହଜ ନୁହେଁ । ଅନେକ ସମୟରେ ସାମାଜିକ ରୀତିନୀତି ମଧ୍ୟ ପ୍ରତିବନ୍ଧକ ସ୍ବରୂପ ହୋଇଥାଏ । ପୂର୍ବକାଳରେ ଆମ ଦେଶରେ ଗୃହସ୍ଥର ଆଚରଣ ସମ୍ବନ୍ଧରେ ଶିକ୍ଷା ଦିଆ ହେଉଥିଲା, କିନ୍ତୁ ଆଜିକାଲି ସେପରି ଶିକ୍ଷାର ପ୍ରଚଳନ ନାହିଁ । ମନୁଷ୍ୟର ଗୋଟାଏ ସଂକୃତିତ ଅବସ୍ଥା ଆସିଗଲେ, ସେ ସହଜରେ ଆଉ ସେଥିରୁ ନିଷ୍ପତ୍ତି ପାଏ ନାହିଁ । ଯେଉଁମାନଙ୍କର ମାନସିକ ପ୍ରବୃତ୍ତି ଚିକିତ୍ସା ଉଚ୍ଚବର୍ଗରେ ଥାଏ, ସେହିମାନେ କୌଣସି କାରଣବଶତଃ ଏପରି ଅବସ୍ଥାର ଅଧୀନ ହେଲେ ସୁଦ୍ଧା ବିନେ ସୁସମୟ ଆସି ଆତ୍ମଶକ୍ତିର ପରୀକ୍ଷା ଦେବା ପାଇଁ ସେମାନଙ୍କୁ ଗୋଟିଏ ଭିନ୍ନ କର୍ମକ୍ଷେତ୍ରରେ ପ୍ରବେଶ କରାଏ । ପ୍ରତ୍ୟେକ ଗୃହସ୍ଥ ନିଜର ପାରିବାରିକ ପରିସ୍ଥିତି ମଧ୍ୟରେ ଲକ୍ଷ୍ୟାନ୍ୱୟରେ ଅନୁକୂଳ ଅବସ୍ଥାକୁ ଲକ୍ଷ୍ୟ ରଖି ଶକ୍ତି ପ୍ରୟୋଗ କରିପାରେ ଓ ତଦ୍ୱାରା ତାର ଯେଉଁ ବିକାଶ ଜନ୍ମେ, ସେଥିରେ ନିଜସ୍ବର ଯଥେଷ୍ଟ ପରିଚୟ ମିଳେ । ନିଜସ୍ବ ରକ୍ଷା କରି ନ ପାରି ଅଧିକାଂଶ କେବଳ ଏକ ଧାରାବାହିକ କର୍ମପନ୍ଥାର ଆଶ୍ରୟରେ ଜୀବନକୁ କଟାଇ ଦିଅନ୍ତି । ମନୁଷ୍ୟସ୍ବର ଶ୍ରେଷ୍ଠ ନିଦର୍ଶନ ଏଥିରେ ନଥାଏ । ଜଗତରେ ଯେତେ ବିସ୍ମୟକର ଓ ମହତ୍ତ୍ୱ କାର୍ଯ୍ୟ ସମ୍ପାଦିତ ହୋଇଛି, ସେଥିରେ ଗୃହସ୍ଥର ପ୍ରଭାବ ଅଛି । ଗୃହସ୍ଥ ନିଜକୁ ଛୋଟ ମନେ କରିବା ଉଚିତ ନୁହେଁ । ଅର୍ଥ କିମ୍ବା କ୍ଷମତାର ପ୍ରଭାବକୁ ଭୟ କରି ସେ ଯଦି ଶକ୍ତିବିକାଶର ପଥରୋଧ କରିଦିଏ, ତାହାହେଲେ ଜଗତରେ ତା ପାଇଁ ଉପଯୁକ୍ତ ସ୍ଥାନ ରହେ ନାହିଁ । ଯେଉଁମାନେ ସର୍ବଦା ଦୀନ ହୀନ ଭାବରେ କାଳାତିପାତ କରନ୍ତି, ସେମାନଙ୍କର ପଥ ମଧ୍ୟ ସଂକୃତିତ ନୁହେଁ । ପ୍ରତ୍ୟେକ ଗୃହସ୍ଥର ଦୃଢ଼ କର୍ତ୍ତବ୍ୟ ଜ୍ଞାନ ରହିବା ବାଞ୍ଛନୀୟ । ସାମାନ୍ୟ କର୍ମ ନିଷ୍ଠାର ସହିତ ସମ୍ପାଦନ କରି ଜଣେ ଗୃହସ୍ଥ ଉଚ୍ଚସ୍ଥାନର ଅଧିକାରୀ ହୋଇପାରେ । କର୍ତ୍ତବ୍ୟଜ୍ଞାନରୁ ନିଜସ୍ବର ପରାକାଷ୍ଠ ମିଳେ । କର୍ତ୍ତବ୍ୟପରାୟଣତା ଗୃହୀ ସାଂସାରିକ ବିପଦର ସମ୍ମୁଖୀନ ହୋଇ ସୁଦ୍ଧା ନିଜସ୍ବ ହରାଏ ନାହିଁ । ତାର ଲକ୍ଷ୍ୟ ଗୋଟାଏ ଅବଲମ୍ବନକୁ ଆଶ୍ରୟ କରିଥାଏ । ଅବଲମ୍ବନ ନଥିଲେ ମନୁଷ୍ୟର ଗତି ସହଜ ହୁଏ ନାହିଁ ଓ ଲକ୍ଷ୍ୟର ସ୍ଥିରତା ମଧ୍ୟ ରହେ ନାହିଁ । ନିଜର ଆକାଂକ୍ଷା ଓ ରୁଚି ଅନୁଯାୟୀ ମନୁଷ୍ୟ ଅବଲମ୍ବନ ଗ୍ରହଣ କରେ । କେବଳ ଗୋଟିଏ ଗଣ୍ଡାଳିକା ପ୍ରବାହରେ ଭାସିଯିବା ଲୋକଙ୍କ ସଂଖ୍ୟା ସଂସାରରେ ଅନେକ ଦେଖାଯାଏ । ସେମାନଙ୍କୁ ପ୍ରକୃତ ଗୃହସ୍ଥ ବୋଲି କୁହାଯାଇ ନ ପାରେ । କୌଣସି ରୀତି କିମ୍ବା ପ୍ରଥାକୁ ଅନୁସରଣ କରି କାନ୍ଦୁଆନୁଷ୍ଠାନ ଗ୍ରହଣ କରାଯାଇପାରେ; କିନ୍ତୁ ସେଥିରେ ବିଶେଷତ୍ୱ ପ୍ରତି ଲକ୍ଷ୍ୟ ଦେବା ଉଚିତ । ଯାବତୀୟ କର୍ମ କରି ନିଜର ଲକ୍ଷ୍ୟ ଆଡ଼କୁ ଅଗ୍ରସର ହେବା ପାଇଁ ଆଦୌ ବାଧା ନାହିଁ । କର୍ମରେ ଅନୁପ୍ରାଣିତ ହୋଇ ନିଜସ୍ବକୁ ଭୁଲିଯିବା ଦ୍ୱାରା ମନୁଷ୍ୟସ୍ବର ଅବମାନନା ଘଟେ । ସୈନିକ ଯୁଦ୍ଧକ୍ଷେତ୍ରରେ ସେନାନାୟକର ଆଦେଶ ଅତି ଦୃଢ଼ ଭାବରେ ପାଳନ କରେ । ସେପରି କରିବା ତାର ପ୍ରଧାନ କର୍ତ୍ତବ୍ୟ, କିନ୍ତୁ କର୍ତ୍ତବ୍ୟ ପାଳନ ବେଳେ ଅବଲମ୍ବନର ଶକ୍ତି ତାକୁ ଯେପରି ପ୍ରଫୁଲ୍ଲ ରଖେ ଓ ସେ ଯେପରି ଅଦମ୍ୟ ସାହସରେ ସଂଗ୍ରାମ କରେ, ତାହା କେବଳ ସେନାପତିଙ୍କର ଆଦେଶବାଣୀ ଶ୍ରବଣରେ ସମ୍ଭବପର ନୁହେଁ । ପ୍ରତ୍ୟେକ ଗୃହସ୍ଥର ବୀର ପରି ଆଚରଣ କରିବା ଗୋଟିଏ ଧର୍ମ । ଭୟାନ୍ତ୍ର ହେଲେ ତା ପାଇଁ ଜଗତରେ ଉଚ୍ଚସ୍ଥାନ ରହେ ନାହିଁ । ଗୃହସ୍ଥର ପ୍ରଧାନ ଧର୍ମ ସଂସାର କ୍ଷେତ୍ରରେ ନିଷ୍ଠାର ସହିତ କର୍ତ୍ତବ୍ୟ ପାଳନ ।

SubQuestion No : 6**Q.6** ଉପରୋକ୍ତ ଅନୁଛେଦଟିର ଶୀର୍ଷକ କଣ ହେବ ଲେଖ?

- Ans** ☒ 1. ମନୁଷ୍ୟର ଅବସ୍ଥା
☒ 2. ସଂସାରଚିତ୍ର
☒ 3. ସାମାଜିକ ରୀତିନୀତି
☒ 4. ଗୃହସ୍ଥର ଧର୍ମ

Question ID : 630680448300

Option 1 ID : 6306801750396

Option 2 ID : 6306801750399

Option 3 ID : 6306801750398

Option 4 ID : 6306801750397

Status : Answered

Chosen Option : 4

Comprehension:

ସାଂସାରିକ ବାଧାବିଧି ମଧ୍ୟରେ ମନୁଷ୍ୟର ନିଜସ୍ବ ପ୍ରକାଶିତ ହେବା ସହଜ ନୁହେଁ । ଅନେକ ସମୟରେ ସାମାଜିକ ରୀତିନୀତି ମଧ୍ୟ ପ୍ରତିବନ୍ଧକ ସ୍ବରୂପ ହୋଇଥାଏ । ପୂର୍ବକାଳରେ ଆମ ଦେଶରେ ଗୃହସ୍ଥର ଆଚରଣ ସମ୍ବନ୍ଧରେ ଶିକ୍ଷା ଦିଆ ହେଉଥିଲା, କିନ୍ତୁ ଆଜିକାଲି ସେପରି ଶିକ୍ଷାର ପ୍ରଚଳନ ନାହିଁ । ମନୁଷ୍ୟର ଗୋଟାଏ ସଂକୃତିତ ଅବସ୍ଥା ଆସିଗଲେ, ସେ ସହଜରେ ଆଉ ସେଥିରୁ ନିଷ୍ପତ୍ତି ପାଏ ନାହିଁ । ଯେଉଁମାନଙ୍କର ମାନସିକ ପ୍ରବୃତ୍ତି ଚିକିତ୍ସା ଉଚ୍ଚବରରେ ଥାଏ, ସେହିମାନେ କୌଣସି କାରଣବଶତଃ ଏପରି ଅବସ୍ଥାର ଅଧୀନ ହେଲେ ସୁଦ୍ଧା ବିନେ ସୁସମୟ ଆସି ଆତ୍ମଶକ୍ତିର ପରୀକ୍ଷା ଦେବା ପାଇଁ ସେମାନଙ୍କୁ ଗୋଟିଏ ଭିନ୍ନ କର୍ମକ୍ଷେତ୍ରରେ ପ୍ରବେଶ କରାଏ । ପ୍ରତ୍ୟେକ ଗୃହସ୍ଥ ନିଜର ପାରିବାରିକ ପରିସ୍ଥିତି ମଧ୍ୟରେ ଲକ୍ଷ୍ୟାନ୍ୱୟରେ ଅନୁକୂଳ ଅବସ୍ଥାକୁ ଲକ୍ଷ୍ୟ ରଖି ଶକ୍ତି ପ୍ରୟୋଗ କରିପାରେ ଓ ତଦ୍ୱାରା ତାର ଯେଉଁ ବିକାଶ ଜନ୍ମେ, ସେଥିରେ ନିଜସ୍ବର ଯଥେଷ୍ଟ ପରିଚୟ ମିଳେ । ନିଜସ୍ବ ରକ୍ଷା କରି ନ ପାରି ଅଧିକାଂଶ କେବଳ ଏକ ଧାରାବାହିକ କର୍ମପଦ୍ଧାର ଆଶ୍ରୟରେ ଜୀବନକୁ କଟାଇ ଦିଅନ୍ତି । ମନୁଷ୍ୟସ୍ବର ଶ୍ରେଷ୍ଠ ନିଦର୍ଶନ ଏଥିରେ ନଥାଏ । ଜଗତରେ ଯେତେ ବିସ୍ମୟକର ଓ ମହତ୍ତ୍ୱ କାର୍ଯ୍ୟ ସମ୍ପାଦିତ ହୋଇଛି, ସେଥିରେ ଗୃହସ୍ଥର ପ୍ରଭାବ ଅଛି । ଗୃହସ୍ଥ ନିଜକୁ ଛୋଟ ମନେ କରିବା ଉଚିତ ନୁହେଁ । ଅର୍ଥ କିମ୍ବା କ୍ଷମତାର ପ୍ରଭାବକୁ ଭୟ କରି ସେ ଯଦି ଶକ୍ତିବିକାଶର ପଥରୋଧ କରିଦିଏ, ତାହାହେଲେ ଜଗତରେ ତା ପାଇଁ ଉପଯୁକ୍ତ ସ୍ଥାନ ରହେ ନାହିଁ । ଯେଉଁମାନେ ସର୍ବଦା ଦୀନ ହୀନ ଭାବରେ କାଳାତିପାତ କରନ୍ତି, ସେମାନଙ୍କର ପଥ ମଧ୍ୟ ସଂକୃତିତ ନୁହେଁ । ପ୍ରତ୍ୟେକ ଗୃହସ୍ଥର ଦୃଢ଼ କର୍ତ୍ତବ୍ୟ ଜ୍ଞାନ ରହିବା ବାଞ୍ଛନୀୟ । ସାମାନ୍ୟ କର୍ମ ନିଷ୍ଠାର ସହିତ ସମ୍ପାଦନ କରି ଜଣେ ଗୃହସ୍ଥ ଉଚ୍ଚସ୍ଥାନର ଅଧିକାରୀ ହୋଇପାରେ । କର୍ତ୍ତବ୍ୟଜ୍ଞାନରୁ ନିଜସ୍ବର ପରାକାଷ୍ଠ୍ୟ ମିଳେ । କର୍ତ୍ତବ୍ୟପରାୟଣତା ଗୃହୀ ସାଂସାରିକ ବିପଦର ସମ୍ମୁଖୀନ ହୋଇ ସୁଦ୍ଧା ନିଜସ୍ବ ହରାଏ ନାହିଁ । ତାର ଲକ୍ଷ୍ୟ ଗୋଟାଏ ଅବଲମ୍ବନକୁ ଆଶ୍ରୟ କରିଥାଏ । ଅବଲମ୍ବନ ନଥିଲେ ମନୁଷ୍ୟର ଗତି ସହଜ ହୁଏ ନାହିଁ ଓ ଲକ୍ଷ୍ୟର ସ୍ଥିରତା ମଧ୍ୟ ରହେ ନାହିଁ । ନିଜର ଆକାଂକ୍ଷା ଓ ରୁଚି ଅନୁଯାୟୀ ମନୁଷ୍ୟ ଅବଲମ୍ବନ ଗ୍ରହଣ କରେ । କେବଳ ଗୋଟିଏ ଗଢ଼ାଳିକା ପ୍ରବାହରେ ଭାସିଯିବା ଲୋକଙ୍କ ସଂଖ୍ୟା ସଂସାରରେ ଅନେକ ଦେଖାଯାଏ । ସେମାନଙ୍କୁ ପ୍ରକୃତ ଗୃହସ୍ଥ ବୋଲି କୁହାଯାଇ ନ ପାରେ । କୌଣସି ରୀତି କିମ୍ବା ପ୍ରଥାକୁ ଅନୁସରଣ କରି କାନ୍ଦୁକାନ୍ଦୁକାନ୍ଦୁ ଗ୍ରହଣ କରାଯାଇପାରେ; କିନ୍ତୁ ସେଥିରେ ବିଶେଷତ୍ୱ ପ୍ରତି ଲକ୍ଷ୍ୟ ଦେବା ଉଚିତ । ଯାବତୀୟ କର୍ମ କରି ନିଜର ଲକ୍ଷ୍ୟ ଆଡ଼କୁ ଅଗ୍ରସର ହେବା ପାଇଁ ଆଦୌ ବାଧା ନାହିଁ । କର୍ମରେ ଅନୁପ୍ରାଣିତ ହୋଇ ନିଜସ୍ବକୁ ଭୁଲିଯିବା ଦ୍ୱାରା ମନୁଷ୍ୟସ୍ବର ଅବମାନନା ଘଟେ । ସୈନିକ ଯୁଦ୍ଧକ୍ଷେତ୍ରରେ ସେନାନାୟକର ଆଦେଶ ଅତି ଦୃଢ଼ ଭାବରେ ପାଳନ କରେ । ସେପରି କରିବା ତାର ପ୍ରଧାନ କର୍ତ୍ତବ୍ୟ, କିନ୍ତୁ କର୍ତ୍ତବ୍ୟ ପାଳନ ବେଳେ ଅବଲମ୍ବନର ଶକ୍ତି ତାକୁ ଯେପରି ପ୍ରଫୁଲ୍ଲ ରଖେ ଓ ସେ ଯେପରି ଅଦମ୍ୟ ସାହସରେ ସଂଗ୍ରାମ କରେ, ତାହା କେବଳ ସେନାପତିଙ୍କର ଆଦେଶବାଣୀ ଶ୍ରବଣରେ ସମ୍ଭବପର ନୁହେଁ । ପ୍ରତ୍ୟେକ ଗୃହସ୍ଥର ବୀର ପରି ଆଚରଣ କରିବା ଗୋଟିଏ ଧର୍ମ । ଭୟାନ୍ତ୍ର ହେଲେ ତା ପାଇଁ ଜଗତରେ ଉଚ୍ଚସ୍ଥାନ ରହେ ନାହିଁ । ଗୃହସ୍ଥର ପ୍ରଧାନ ଧର୍ମ ସଂସାର କ୍ଷେତ୍ରରେ ନିଷ୍ଠାର ସହିତ କର୍ତ୍ତବ୍ୟ ପାଳନ ।

SubQuestion No : 7

Q.7 ମନୁଷ୍ୟସ୍ବର ଶ୍ରେଷ୍ଠ ନିଦର୍ଶନ କେଉଁଥିରେ ନ ଥାଏ?

- Ans
- ☒ 1. କର୍ତ୍ତବ୍ୟ ପାଳନ କରିବାରେ ।
 - ☒ 2. ପ୍ରଥାକୁ ଅନୁସରଣ କରିବାରେ ।
 - ☒ 3. ଧାରାବାହିକ କର୍ମପଦ୍ଧାକୁ ଆଶ୍ରୟ କରି ଜୀବନକୁ କଟାଇବାରେ ।
 - ☒ 4. ଦୀନହୀନ ଭାବରେ କାଳାତିପାତ କରିବାରେ ।

Question ID : 630680448302

Option 1 ID : 6306801750405

Option 2 ID : 6306801750406

Option 3 ID : 6306801750407

Option 4 ID : 6306801750404

Status : Answered

Chosen Option : 3

Comprehension:

ସାଂସାରିକ ବାଧାବିହୀନ ମଧ୍ୟରେ ମନୁଷ୍ୟର ନିଜସ୍ବ ପ୍ରକାଶିତ ହେବା ସହଜ ନୁହେଁ । ଅନେକ ସମୟରେ ସାମାଜିକ ରୀତିନୀତି ମଧ୍ୟ ପ୍ରତିବନ୍ଧକ ସ୍ବରୂପ ହୋଇଥାଏ । ପୂର୍ବକାଳରେ ଆମ ଦେଶରେ ଗୃହସ୍ଥର ଆଚରଣ ସମ୍ବନ୍ଧରେ ଶିକ୍ଷା ଦିଆ ହେଉଥିଲା, କିନ୍ତୁ ଆଜିକାଲି ସେପରି ଶିକ୍ଷାର ପ୍ରଚଳନ ନାହିଁ । ମନୁଷ୍ୟର ଗୋଟାଏ ସଂକ୍ରୁତିତ ଅବସ୍ଥା ଆସିଗଲେ, ସେ ସହଜରେ ଆଉ ସେଥିରୁ ନିଷ୍ପତ୍ତି ପାଏ ନାହିଁ । ଯେଉଁମାନଙ୍କର ମାନସିକ ପ୍ରବୃତ୍ତି ଚିକିତ୍ସା ଉଚ୍ଚବରରେ ଥାଏ, ସେହିମାନେ କୌଣସି କାରଣବଶତଃ ଏପରି ଅବସ୍ଥାର ଅଧୀନ ହେଲେ ସୁଦ୍ଧା ବିନେ ସୁସମୟ ଆସି ଆତ୍ମଶକ୍ତିର ପରୀକ୍ଷା ଦେବା ପାଇଁ ସେମାନଙ୍କୁ ଗୋଟିଏ ଭିନ୍ନ କର୍ମକ୍ଷେତ୍ରରେ ପ୍ରବେଶ କରାଏ । ପ୍ରତ୍ୟେକ ଗୃହସ୍ଥ ନିଜର ପାରିବାରିକ ପରିସ୍ଥିତି ମଧ୍ୟରେ ଇଚ୍ଛାକୁସାରେ ଅନୁକୂଳ ଅବସ୍ଥାକୁ ଲକ୍ଷ୍ୟ ରଖି ଶକ୍ତି ପ୍ରୟୋଗ କରିପାରେ ଓ ତଦ୍ବାରା ତାର ଯେଉଁ ବିକାଶ ଜନ୍ମେ, ସେଥିରେ ନିଜସ୍ବର ଯଥେଷ୍ଟ ପରିଚୟ ମିଳେ । ନିଜସ୍ବ ରକ୍ଷା କରି ନ ପାରି ଅଧିକାଂଶ କେବଳ ଏକ ଧାରାବାହିକ କର୍ମପନ୍ଥାର ଆଶ୍ରୟରେ ଜୀବନକୁ କଟାଇ ଦିଅନ୍ତି । ମନୁଷ୍ୟସ୍ବର ଶ୍ରେଷ୍ଠ ନିଦର୍ଶନ ଏଥିରେ ନଥାଏ । ଜଗତରେ ଯେତେ ବିସ୍ମୟକର ଓ ମହତ୍ବ କାର୍ଯ୍ୟ ସମ୍ପାଦିତ ହୋଇଛି, ସେଥିରେ ଗୃହସ୍ଥର ପ୍ରଭାବ ଅଛି । ଗୃହସ୍ଥ ନିଜକୁ ଛୋଟ ମନେ କରିବା ଉଚିତ ନୁହେଁ । ଅର୍ଥ କିମ୍ବା କ୍ଷମତାର ପ୍ରଭାବକୁ ଭୟ କରି ସେ ଯଦି ଶକ୍ତିବିକାଶର ପଥରୋଧ କରିଦିଏ, ତାହାହେଲେ ଜଗତରେ ତା ପାଇଁ ଉପଯୁକ୍ତ ସ୍ଥାନ ରହେ ନାହିଁ । ଯେଉଁମାନେ ସର୍ବଦା ଦୀନ ହୀନ ଭାବରେ କାଳାତିପାତ କରନ୍ତି, ସେମାନଙ୍କର ପଥ ମଧ୍ୟ ସଂକ୍ରୁତିତ ନୁହେଁ । ପ୍ରତ୍ୟେକ ଗୃହସ୍ଥର ବୃଦ୍ଧ କର୍ତ୍ତବ୍ୟ ଜ୍ଞାନ ରହିବା ବାଞ୍ଛନୀୟ । ସାମାନ୍ୟ କର୍ମ ନିଷ୍ଠାର ସହିତ ସମ୍ପାଦନ କରି ଜଣେ ଗୃହସ୍ଥ ଉଚ୍ଚସ୍ଥାନର ଅଧିକାରୀ ହୋଇପାରେ । କର୍ତ୍ତବ୍ୟଜ୍ଞାନରୁ ନିଜସ୍ବର ପରାକାଷ୍ଠ ମିଳେ । କର୍ତ୍ତବ୍ୟପରାୟଣତା ଗୃହୀ ସାଂସାରିକ ବିପଦର ସମ୍ମୁଖୀନ ହୋଇ ସୁଦ୍ଧା ନିଜସ୍ବ ହରାଏ ନାହିଁ । ତାର ଲକ୍ଷ୍ୟ ଗୋଟାଏ ଅବଲମ୍ବନକୁ ଆଶ୍ରୟ କରିଥାଏ । ଅବଲମ୍ବନ ନଥିଲେ ମନୁଷ୍ୟର ଗତି ସହଜ ହୁଏ ନାହିଁ ଓ ଲକ୍ଷ୍ୟର ସ୍ଥିରତା ମଧ୍ୟ ରହେ ନାହିଁ । ନିଜର ଆକାଂକ୍ଷା ଓ ରୁଚି ଅନୁଯାୟୀ ମନୁଷ୍ୟ ଅବଲମ୍ବନ ଗ୍ରହଣ କରେ । କେବଳ ଗୋଟିଏ ଗଠ୍ଥାଳିକା ପ୍ରବାହରେ ଭାସିଯିବା ଲୋକଙ୍କ ସଂଖ୍ୟା ସଂସାରରେ ଅନେକ ଦେଖାଯାଏ । ସେମାନଙ୍କୁ ପ୍ରକୃତ ଗୃହସ୍ଥ ବୋଲି କୁହାଯାଇ ନ ପାରେ । କୌଣସି ରୀତି କିମ୍ବା ପ୍ରଥାକୁ ଅନୁସରଣ କରି କାନ୍ଦୁକାନ୍ଦୁ ଗ୍ରହଣ କରାଯାଇପାରେ; କିନ୍ତୁ ସେଥିରେ ବିଶେଷତ୍ବ ପ୍ରତି ଲକ୍ଷ୍ୟ ଦେବା ଉଚିତ । ଯାବତୀୟ କର୍ମ କରି ନିଜର ଲକ୍ଷ୍ୟ ଆଡ଼କୁ ଅଗ୍ରସର ହେବା ପାଇଁ ଆଦୌ ବାଧା ନାହିଁ । କର୍ମରେ ଅନୁପ୍ରାଣିତ ହୋଇ ନିଜସ୍ବକୁ ଭୁଲିଯିବା ଦ୍ବାରା ମନୁଷ୍ୟସ୍ବର ଅବମାନନା ଘଟେ । ସୈନିକ ଯୁଦ୍ଧକ୍ଷେତ୍ରରେ ସେନାନାୟକର ଆଦେଶ ଅତି ଦୃଢ଼ ଭାବରେ ପାଳନ କରେ । ସେପରି କରିବା ତାର ପ୍ରଧାନ କର୍ତ୍ତବ୍ୟ, କିନ୍ତୁ କର୍ତ୍ତବ୍ୟ ପାଳନ ବେଳେ ଅବଲମ୍ବନର ଶକ୍ତି ତାକୁ ଯେପରି ପ୍ରଫୁଲ୍ଲ ରଖେ ଓ ସେ ଯେପରି ଅଦମ୍ୟ ସାହସରେ ସଂଗ୍ରାମ କରେ, ତାହା କେବଳ ସେନାପତିଙ୍କର ଆଦେଶବାଣୀ ଶ୍ରବଣରେ ସମ୍ଭବପର ନୁହେଁ । ପ୍ରତ୍ୟେକ ଗୃହସ୍ଥର ବୀର ପରି ଆଚରଣ କରିବା ଗୋଟିଏ ଧର୍ମ । ଭୟାନ୍ତ୍ର ହେଲେ ତା ପାଇଁ ଜଗତରେ ଉଚ୍ଚସ୍ଥାନ ରହେ ନାହିଁ । ଗୃହସ୍ଥର ପ୍ରଧାନ ଧର୍ମ ସଂସାର କ୍ଷେତ୍ରରେ ନିଷ୍ଠାର ସହିତ କର୍ତ୍ତବ୍ୟ ପାଳନ ।

SubQuestion No : 8

Q.8 କେଉଁ ଗୃହସ୍ଥର ସଂସାରରେ ଉପଯୁକ୍ତ ସ୍ଥାନ ନାହିଁ?

- Ans ☒ 1. ଯେଉଁ ଗୃହସ୍ଥ ନିଜକୁ ବଡ଼ ମନେ କରି, ଅର୍ଥ ଓ କ୍ଷମତା ମାଧ୍ୟମରେ ବିକାଶର କରନ୍ତି, ତା ପାଇଁ ଉପଯୁକ୍ତ ସ୍ଥାନ ନାହିଁ ।
- ☒ 2. ଯେଉଁ ଗୃହସ୍ଥ ନିଜକୁ ଛୋଟ ମନେ କରିବା ସହିତ ଅର୍ଥ କିମ୍ବା କ୍ଷମତାର ପ୍ରଭାବକୁ ଭୟ କରି ବିକାଶର ପଥରୋଧ କରନ୍ତି, ତା ପାଇଁ ଉପଯୁକ୍ତ ସ୍ଥାନ ନାହିଁ ।
- ☒ 3. ଯିଏ ଅନୁକୂଳ ଅବସ୍ଥାକୁ ଲକ୍ଷ୍ୟ ରଖି ଶକ୍ତି ପ୍ରୟୋଗ କରିପାରେ, ତା ପାଇଁ ଉପଯୁକ୍ତ ସ୍ଥାନ ନାହିଁ ।
- ☒ 4. ଯିଏ କର୍ମରେ ଅନୁପ୍ରାଣିତ ହୋଇ ନିଜସ୍ବକୁ ଭୁଲିଯାଏ, ତା ପାଇଁ ଉପଯୁକ୍ତ ସ୍ଥାନ ନାହିଁ ।

Question ID : 630680448303

Option 1 ID : 6306801750408

Option 2 ID : 6306801750409

Option 3 ID : 6306801750410

Option 4 ID : 6306801750411

Status : Answered

Chosen Option : 2

Q.9 ଗୃହସ୍ଥର ପ୍ରଧାନ ଧର୍ମ କ'ଣ?

- Ans ☒ 1. ଆବଶ୍ୟକ ସ୍ଥଳେ ଭୟ କରିବା
- ☒ 2. କର୍ତ୍ତବ୍ୟ ବିମୁଖ ହେବା
- ☒ 3. ସଂସାରରେ ରହି ନିଷ୍ଠାର ସହିତ କର୍ତ୍ତବ୍ୟ ପାଳନ କରିବା ।
- ☒ 4. କର୍ମରେ ଅନୁପ୍ରାଣିତ ହୋଇ ନିଜସ୍ବକୁ ଭୁଲିଯିବା ।

Question ID : 630680448310

Option 1 ID : 6306801750434

Option 2 ID : 6306801750435

Option 3 ID : 6306801750432

Option 4 ID : 6306801750433

Status : Answered

Chosen Option : 3

Q.10 ଆଜି କେଉଁ ଶିକ୍ଷାର ପ୍ରଚଳନ ନାହିଁ?

- Ans ☒ 1. ଶାରୀରିକ ଶିକ୍ଷା
☒ 2. ଗୃହସ୍ଥର ଆଚରଣମୂଳକ ଶିକ୍ଷା
☒ 3. ପ୍ରାଚୀନ ଶିକ୍ଷା
☒ 4. ମାନସିକ ଶିକ୍ଷା

Question ID : 630680448309
Option 1 ID : 6306801750431
Option 2 ID : 6306801750429
Option 3 ID : 6306801750428
Option 4 ID : 6306801750430
Status : Answered
Chosen Option : 2

Section : Part 1 General Knowledge and Current Affairs

Q.1 COP27: 27th annual UN meeting on climate was held in which country?

- Ans ☒ 1. Egypt
☒ 2. Canada
☒ 3. Japan
☒ 4. India

Question ID : 630680448312
Option 1 ID : 6306801750443
Option 2 ID : 6306801750442
Option 3 ID : 6306801750441
Option 4 ID : 6306801750440
Status : Not Answered
Chosen Option : --

Q.2 Which among the following is a feature of Public Bill?

- Ans ☒ 1. Its drafting is the responsibility of the member concerned
☒ 2. It reflects the stand of opposition party on public matter
☒ 3. It is introduced by a minister only in parliament
☒ 4. Its introduction requires one month's notice in the House

Question ID : 630680448318
Option 1 ID : 6306801750467
Option 2 ID : 6306801750466
Option 3 ID : 6306801750464
Option 4 ID : 6306801750465
Status : Not Answered
Chosen Option : --

Q.3 Who is the new Prime Minister of Sweden based on available information as of October 2022?

- Ans
- ☒ 1. Joe Biden
 - ☒ 2. Ulf Kristersson
 - ☒ 3. Vladimir Putin
 - ☒ 4. Volodymyr Zelenskyy

Question ID : 630680448311
Option 1 ID : 6306801750439
Option 2 ID : 6306801750437
Option 3 ID : 6306801750438
Option 4 ID : 6306801750436
Status : Answered
Chosen Option : 2

Q.4 'Nutrition at Doorsteps' program launched in Odisha, aims at which among following social cause?

- Ans
- ☒ 1. To launch a flagship program to empower girls and ladies of the state
 - ☒ 2. To provide free fruits and vegetables to each household in the state
 - ☒ 3. To address malnutrition and anemia in Swabhiman Anchal
 - ☒ 4. To provide mothers and new born babies with complete nutritional care in the state

Question ID : 630680448313
Option 1 ID : 6306801750445
Option 2 ID : 6306801750444
Option 3 ID : 6306801750447
Option 4 ID : 6306801750446
Status : Answered
Chosen Option : 3

Q.5 The National Highways Authority of India (NHAI) was operationalized in which of the following year?

- Ans
- ☒ 1. 1999
 - ☒ 2. 1993
 - ☒ 3. 1991
 - ☒ 4. 1995

Question ID : 630680448317
Option 1 ID : 6306801750463
Option 2 ID : 6306801750461
Option 3 ID : 6306801750460
Option 4 ID : 6306801750462
Status : Not Answered
Chosen Option : --

Q.6 The missionaries prepared the Odia letters and printed the first Odia Bible in which of the following year?

- Ans
- ☐ 1. 1806
 - ☐ 2. 1805
 - ☒ 3. 1804
 - ☐ 4. 1803

Question ID : 630680448315
Option 1 ID : 6306801750455
Option 2 ID : 6306801750454
Option 3 ID : 6306801750453
Option 4 ID : 6306801750452
Status : Not Answered
Chosen Option : --

Q.7 Drought Prone Area Programme was initiated during which of the Five-Year Plan?

- Ans
- ☐ 1. Fifth Five-Year Plan
 - ☒ 2. Fourth Five-Year Plan
 - ☐ 3. Second Five-Year Plan
 - ☐ 4. Third Five-Year Plan

Question ID : 630680448320
Option 1 ID : 6306801750475
Option 2 ID : 6306801750474
Option 3 ID : 6306801750472
Option 4 ID : 6306801750473
Status : Not Answered
Chosen Option : --

Q.8 In which of the following years did the Jallianwala Bagh massacre take place?

- Ans
- ☒ 1. 1919
 - ☐ 2. 1923
 - ☐ 3. 1921
 - ☐ 4. 1922

Question ID : 630680448314
Option 1 ID : 6306801750448
Option 2 ID : 6306801750451
Option 3 ID : 6306801750449
Option 4 ID : 6306801750450
Status : Answered
Chosen Option : 1

Q.9 What is the normal systolic blood pressure in human beings?

- Ans
- ☐ 1. 110 mm of Hg
 - ☒ 2. 120 mm of Hg
 - ☐ 3. 90 mm of Hg
 - ☐ 4. 80 mm of Hg

Question ID : 630680448319

Option 1 ID : 6306801750469

Option 2 ID : 6306801750468

Option 3 ID : 6306801750470

Option 4 ID : 6306801750471

Status : Answered

Chosen Option : 4

Q.10 As per Koeppen classification of climates, what type of climate does "BWk" represents?

- Ans
- ☐ 1. Mediterranean
 - ☒ 2. Mid-latitude deserts
 - ☐ 3. Tundra
 - ☐ 4. Tropical wet and dry

Question ID : 630680448316

Option 1 ID : 6306801750456

Option 2 ID : 6306801750458

Option 3 ID : 6306801750457

Option 4 ID : 6306801750459

Status : Not Answered

Chosen Option : --

Section : Part 1 Reasoning Ability

Q.1 How is the wife of Shivam's maternal grandmother's only son-in-law related to Shivam?

- Ans
- ☒ 1. Mother
 - ☐ 2. Father
 - ☐ 3. Aunt
 - ☐ 4. Uncle

Question ID : 630680448325

Option 1 ID : 6306801750492

Option 2 ID : 6306801750493

Option 3 ID : 6306801750494

Option 4 ID : 6306801750495

Status : Answered

Chosen Option : 2

Q.2 W means '+', X means '-', Y means '×' and Z means '÷', then

$$5 Y 4 W 3 X 20 Z 5 = ?$$

- Ans
- ☒ 1. 17
 - ☒ 2. 19
 - ☒ 3. 18
 - ☒ 4. 20

Question ID : 630680448329
Option 1 ID : 6306801750508
Option 2 ID : 6306801750510
Option 3 ID : 6306801750509
Option 4 ID : 6306801750511

Status : Answered

Chosen Option : 2

Q.3 What will come in the place of question mark (as per mineral and their symbols)?

Iron: Fe::Tungsten: ?

- Ans
- ☒ 1. V
 - ☒ 2. H
 - ☒ 3. C
 - ☒ 4. W

Question ID : 630680448327
Option 1 ID : 6306801750502
Option 2 ID : 6306801750501
Option 3 ID : 6306801750503
Option 4 ID : 6306801750500

Status : Answered

Chosen Option : 4

Q.4 Read the given statement(s) and conclusions carefully. Assuming that the information given in the statements is true, even if it appears to be at variance with commonly known facts, decide which of the given conclusions logically follow(s) from the statement(s).

Statement:

Some deserts are sweet

Some sweet are walnuts

Conclusion:

1. All walnuts are either sweet or deserts
2. Some walnuts are sweet

- Ans
- ☒ 1. Only conclusion 1 follows
 - ☒ 2. Only conclusion 2 follows
 - ☒ 3. Neither 1 nor 2 follows
 - ☒ 4. Both 1 and 2 follow

Question ID : 630680448326
Option 1 ID : 6306801750496
Option 2 ID : 6306801750497
Option 3 ID : 6306801750499
Option 4 ID : 6306801750498

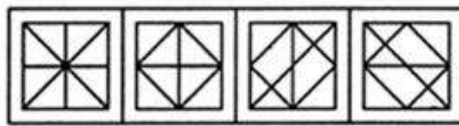
Status : Answered

Chosen Option : 2

Q.5 Which of the following four options embeds the original figure X?



(X)



(1)

(2)

(3)

(4)

Ans ☒ 1. 1

☐ 2. 2

☐ 3. 4

☐ 4. 3

Question ID : 630680448328

Option 1 ID : 6306801750504

Option 2 ID : 6306801750505

Option 3 ID : 6306801750507

Option 4 ID : 6306801750506

Status : Answered

Chosen Option : 1

Q.6 Which will replace the question mark in the given series?

AA, EC, IE, OG, ??

Ans ☐ 1. OP

☐ 2. IU

☐ 3. PO

☒ 4. UI

Question ID : 630680448323

Option 1 ID : 6306801750484

Option 2 ID : 6306801750486

Option 3 ID : 6306801750485

Option 4 ID : 6306801750487

Status : Answered

Chosen Option : 4

Q.7 The rank of Rajiv is 10th from the top and 25 from the bottom in a group then how many boys were there in that group?

Ans ☐ 1. 32

☐ 2. 33

☐ 3. 35

☒ 4. 34

Question ID : 630680448322

Option 1 ID : 6306801750482

Option 2 ID : 6306801750481

Option 3 ID : 6306801750483

Option 4 ID : 6306801750480

Status : Answered

Chosen Option : 4

Q.8 What will come in the place of question mark to make it logically complete?

8, 15, 29, 57, ?

- Ans
- ☒ 1. 145
 - ☒ 2. 123
 - ☒ 3. 113
 - ☒ 4. 128

Question ID : 630680448330
Option 1 ID : 6306801750515
Option 2 ID : 6306801750514
Option 3 ID : 6306801750513
Option 4 ID : 6306801750512
Status : Answered
Chosen Option : 3

Q.9 Five friends namely Pramod, Keval, Ritesh, Saurabh and Tarun are sitting in a line facing West. Pramod and Keval are sitting together. Ritesh is sitting at the south end and Saurabh is sitting at the North end. Tarun is sitting between Keval and Ritesh. Who is sitting between Saurabh and Keval?

- Ans
- ☒ 1. Ritesh
 - ☒ 2. Pramod
 - ☒ 3. Saurabh
 - ☒ 4. Keval

Question ID : 630680448321
Option 1 ID : 6306801750478
Option 2 ID : 6306801750476
Option 3 ID : 6306801750479
Option 4 ID : 6306801750477
Status : Answered
Chosen Option : 2

Q.10 If RUST becomes SVTU and TUSK becomes UVTL. What SOFT will become in the same manner?

- Ans
- ☒ 1. TPGU
 - ☒ 2. TUPG
 - ☒ 3. PUTG
 - ☒ 4. TGPU

Question ID : 630680448324
Option 1 ID : 6306801750489
Option 2 ID : 6306801750490
Option 3 ID : 6306801750491
Option 4 ID : 6306801750488
Status : Answered
Chosen Option : 1

Q.1 What does "RGB" stand for in display properties settings?

- Ans
- ☐ 1. Random Graphics Box
 - ☐ 2. Real-time Graphics Boost
 - ☐ 3. Resolution for Games and Browsing
 - ☒ 4. Red, Green, Blue

Question ID : 630680448335

Option 1 ID : 6306801750533

Option 2 ID : 6306801750535

Option 3 ID : 6306801750534

Option 4 ID : 6306801750532

Status : Not Answered

Chosen Option : --

Q.2 What is the term for the practice of sharing information, ideas, and opinions on the internet?

- Ans
- ☐ 1. Teli-communication
 - ☒ 2. Social networking
 - ☐ 3. Internet shopping
 - ☐ 4. Skydiving

Question ID : 630680448334

Option 1 ID : 6306801750530

Option 2 ID : 6306801750529

Option 3 ID : 6306801750528

Option 4 ID : 6306801750531

Status : Answered

Chosen Option : 2

Q.3 How does ICT benefit Railway Reservation services in e-Governance?

- Ans
- ☒ 1. By simplifying ticket booking and improving access
 - ☐ 2. By reducing the number of available trains
 - ☐ 3. By making reservation processes manual and time-consuming
 - ☐ 4. By increasing ticket prices

Question ID : 630680448331

Option 1 ID : 6306801750518

Option 2 ID : 6306801750516

Option 3 ID : 6306801750517

Option 4 ID : 6306801750519

Status : Answered

Chosen Option : 1

Q.4 Which type of computer memory is volatile and loses its data when the computer is powered off?

- Ans
- ☐ 1. HDD
 - ☐ 2. ROM
 - ☐ 3. CPU Cache
 - ☒ 4. RAM

Question ID : 630680448332
Option 1 ID : 6306801750522
Option 2 ID : 6306801750521
Option 3 ID : 6306801750523
Option 4 ID : 6306801750520
Status : Answered
Chosen Option : 4

Q.5 The first computer mouse was invented by:

- Ans
- ☐ 1. Charles Babbage
 - ☐ 2. Steve Jobs
 - ☐ 3. Tim Berners-Lee
 - ☒ 4. Douglas Engelbart

Question ID : 630680448333
Option 1 ID : 6306801750527
Option 2 ID : 6306801750524
Option 3 ID : 6306801750525
Option 4 ID : 6306801750526
Status : Not Answered
Chosen Option : --

Section : Part 1 Child Development Learning Curriculum and Assessment

Q.1 Which approach primarily positions the teacher as the main source of knowledge and authority in the classroom?

- Ans
- ☐ 1. Donor-centered
 - ☐ 2. Admin-centered
 - ☐ 3. Learner-centered
 - ☒ 4. Teacher-centered

Question ID : 630680448349
Option 1 ID : 6306801750590
Option 2 ID : 6306801750591
Option 3 ID : 6306801750588
Option 4 ID : 6306801750589
Status : Answered
Chosen Option : 4

Q.2 During early adolescence, which physical change is commonly observed?

- Ans
- ✓ 1. Decreased appetite
 - ✗ 2. Lowered voice in females
 - ✗ 3. Growth spurt
 - ✗ 4. Reduced sleep requirement

Question ID : 630680448336
Option 1 ID : 6306801750536
Option 2 ID : 6306801750538
Option 3 ID : 6306801750537
Option 4 ID : 6306801750539

Status : Answered

Chosen Option : 3

Q.3 Which classroom environment promotes active learning?

- Ans
- ✗ 1. Teacher-centered with lecture style
 - ✓ 2. Student-centered with group activities
 - ✗ 3. A silent room with no interaction
 - ✗ 4. Dim lighting with no visual aids

Question ID : 630680448340
Option 1 ID : 6306801750553
Option 2 ID : 6306801750552
Option 3 ID : 6306801750554
Option 4 ID : 6306801750555

Status : Answered

Chosen Option : 2

Q.4 ନିମ୍ନଲିଖିତ ମଧ୍ୟରୁ କେଉଁଟି ସକାରାତ୍ମକ ସ୍ମୃତିକରଣର ଉଦାହରଣ ଅଟେ?

- Ans
- ✓ 1. ଭଲ କାମ ପାଇଁ ଜଣେ ବିଦ୍ୟାର୍ଥୀଙ୍କୁ ଏକ ସ୍ୱର୍ଣ୍ଣ ତାରକା ପୁରସ୍କାର ଦେବା
 - ✗ 2. ଖରାପ ଆଚରଣ ପାଇଁ ଏକ ବିଶେଷାଧିକାର ଛଡ଼ାଇନେବା
 - ✗ 3. କଥାବାର୍ତ୍ତା କରୁଥିବାରୁ କୌଣସି ବିଦ୍ୟାର୍ଥୀଙ୍କୁ ଶ୍ରେଣୀଗୃହରୁ ବାହାରକୁ ପଠାଇଦେବା
 - ✗ 4. ଅଂଶଗ୍ରହଣ ନକରିଥିବା ପାଇଁ ଅତିରିକ୍ତ ହୋମୱର୍କ ଦେବା

Question ID : 630680448348
Option 1 ID : 6306801750584
Option 2 ID : 6306801750585
Option 3 ID : 6306801750586
Option 4 ID : 6306801750587

Status : Answered

Chosen Option : 1

Q.5 What is the primary purpose of formulating instructional objectives in curriculum development?

- Ans**
- ☐ 1. To determine grading systems
 - ☐ 2. To select textbooks
 - ☒ 3. To guide the selection of content
 - ☐ 4. To mandate teaching methodologies

Question ID : 630680448346

Option 1 ID : 6306801750577

Option 2 ID : 6306801750579

Option 3 ID : 6306801750578

Option 4 ID : 6306801750576

Status : Answered

Chosen Option : 3

Q.6 When a child sees another child get praised for good behavior and decides to behave similarly, this is an example of learning through:

- Ans**
- ☒ 1. Observation
 - ☐ 2. Experience
 - ☐ 3. Trial and error
 - ☐ 4. Imitation

Question ID : 630680448341

Option 1 ID : 6306801750557

Option 2 ID : 6306801750559

Option 3 ID : 6306801750556

Option 4 ID : 6306801750558

Status : Answered

Chosen Option : 1

Q.7 Which of the following approaches emphasizes passive absorption of information by the learners?

- Ans**
- ☐ 1. Constructivist approach
 - ☒ 2. Direct instruction
 - ☐ 3. Collaborative learning
 - ☐ 4. Problem-based learning

Question ID : 630680448350

Option 1 ID : 6306801750595

Option 2 ID : 6306801750594

Option 3 ID : 6306801750593

Option 4 ID : 6306801750592

Status : Answered

Chosen Option : 2

Q.8 How can technology be leveraged in an inclusive classroom?

- Ans
- ☐ 1. To replace teachers
 - ☐ 2. To segregate students based on ability
 - ☐ 3. To discourage collaborative learning
 - ☒ 4. To provide assistive tools

Question ID : 630680448342
Option 1 ID : 6306801750560
Option 2 ID : 6306801750561
Option 3 ID : 6306801750563
Option 4 ID : 6306801750562
Status : Answered
Chosen Option : 4

Q.9 Special education primarily focuses on:

- Ans
- ☐ 1. Educating everyone together without differentiation.
 - ☒ 2. Providing education in separate facilities for students with disabilities.
 - ☐ 3. Integrating students with disabilities into regular classrooms.
 - ☐ 4. Using adaptive technologies in classrooms.

Question ID : 630680448343
Option 1 ID : 6306801750565
Option 2 ID : 6306801750567
Option 3 ID : 6306801750566
Option 4 ID : 6306801750564
Status : Answered
Chosen Option : 2

Q.10 Which principle of curriculum construction emphasizes that the curriculum should provide opportunities for the all-round development of the individual?

- Ans
- ☐ 1. Flexibility
 - ☐ 2. Continuity
 - ☐ 3. Utility
 - ☒ 4. Child-centeredness

Question ID : 630680448345
Option 1 ID : 6306801750572
Option 2 ID : 6306801750575
Option 3 ID : 6306801750574
Option 4 ID : 6306801750573
Status : Answered
Chosen Option : 1

Q.11 ଯଦି ମାତାପିତାଙ୍କୁ ସେମାନଙ୍କ ପିଲାଙ୍କ ବିକାଶ ବିକଳତା ହେଉଛି ବୋଲି ସନ୍ଦେହ ହେଉଥାଏ, ତେବେ ସେମାନେ କେଉଁ ପେସାଦାରଙ୍କ ସାହାଯ୍ୟ ନେବା ଉଚିତ?

Ans ☒ 1.

ବିକାଶାତ୍ମକ ଫିଜିଓଥେରାପିଷ୍ଟ(Developmental Physiotherapist)

☒ 2. ବିକାଶାତ୍ମକ ଧାଈ(Developmental midwife)

☒ 3.

ବିକାଶାତ୍ମକ ଶିଶୁ ରୋଗ ବିଶେଷଜ୍ଞ(Developmental Paediatrician)

☒ 4. ବିକାଶାତ୍ମକ ଶଲ୍ୟ ଚିକିତ୍ସକ (Developmental Surgeon)

Question ID : 630680448338

Option 1 ID : 6306801750545

Option 2 ID : 6306801750544

Option 3 ID : 6306801750546

Option 4 ID : 6306801750547

Status : Answered

Chosen Option : 3

Q.12 ମିଳିତ କାରିଯନ୍ତ୍ର ଶିଶୁ ଅଧିକାର ସଂଗ୍ରହକର୍ତ୍ତା (CRC) ଅନୁଯାୟୀ, ନିମ୍ନଲିଖିତ ମଧ୍ୟରୁ କେଉଁଟିକୁ ପ୍ରତ୍ୟେକ ଶିଶୁଙ୍କ ପାଇଁ ଏକ ମୌଳିକ ଅଧିକାର ଭାବରେ ମାନ୍ୟତା ମିଳିନାହିଁ?

Ans ☒ 1. ସ୍ୱାସ୍ଥ୍ୟ ଅଧିକାର

☒ 2. ଧର୍ମ ପାଳନ କରିବାର ଅଧିକାର

☒ 3. ଶିକ୍ଷା ଅଧିକାର

☒ 4. ଖେଳିବାର ଅଧିକାର

Question ID : 630680448344

Option 1 ID : 6306801750570

Option 2 ID : 6306801750568

Option 3 ID : 6306801750569

Option 4 ID : 6306801750571

Status : Answered

Chosen Option : 2

Q.13 Which of the following conditions is essential for the readiness of an individual to learn a specific skill or concept?

Ans ☒ 1. Maturation

☒ 2. Fatigue

☒ 3. Reinforcement

☒ 4. Tasks

Question ID : 630680448339

Option 1 ID : 6306801750551

Option 2 ID : 6306801750549

Option 3 ID : 6306801750550

Option 4 ID : 6306801750548

Status : Answered

Chosen Option : 1

Q.14 A teacher who emphasizes on neatness, proper spacing, and highlighting main points is focusing on which skill?

- Ans
- ☐ 1. Questioning Skills
 - ☐ 2. Communication Skills
 - ☐ 3. Evaluation Skills
 - ☒ 4. Blackboard Writing Skills

Question ID : 630680448347
Option 1 ID : 6306801750581
Option 2 ID : 6306801750580
Option 3 ID : 6306801750582
Option 4 ID : 6306801750583
Status : Answered
Chosen Option : 4

Q.15 ପ୍ରାରମ୍ଭିକ କିଶୋରାବସ୍ଥାରେ ଭାବନାତ୍ମକ ବିକାଶର ପ୍ରମୁଖ ବିଶେଷତା ନିମ୍ନଲିଖିତ ମଧ୍ୟରୁ କେଉଁଟି ଅଟେ?

- Ans
- ☐ 1. ଅଣ-ସମ୍ବେଦନଶୀଳ ଏବଂ ଉତ୍ତେଜନା ପ୍ରବଣ
 - ☐ 2. ଭାବପ୍ରବଣ ନିବେଦନ ପ୍ରତି ସମ୍ବେଦନଶୀଳ ନୁହେଁ
 - ☒ 3. ସହଜରେ ଠକା ଯାଇ ପାରିବ
 - ☐ 4. ଭାବନାତ୍ମକ ଭାବରେ ପୂର୍ବାନୁମାନ ଯୋଗ୍ୟ

Question ID : 630680448337
Option 1 ID : 6306801750542
Option 2 ID : 6306801750543
Option 3 ID : 6306801750541
Option 4 ID : 6306801750540
Status : Answered
Chosen Option : 4

Section : Part II Subject Contents

Q.1 What is the value of $\left(k + \frac{1}{k}\right)\left(k - \frac{1}{k}\right)\left(k^2 + \frac{1}{k^2}\right)\left(k^4 + \frac{1}{k^4}\right)\left(\frac{k^{16}+1}{k^8}\right)\left(\frac{k^{32}+1}{k^{16}}\right)$?

- Ans
- ☐ 1. $\left(k^{32} + \frac{1}{k^{32}}\right)$
 - ☒ 2. $\left(k^{64} - \frac{1}{k^{64}}\right)$
 - ☐ 3. $\left(k^{64} + \frac{1}{k^{64}}\right)$
 - ☐ 4. $\left(k^{32} - \frac{1}{k^{32}}\right)$

Question ID : 630680448355
Option 1 ID : 6306801750612
Option 2 ID : 6306801750615
Option 3 ID : 6306801750614
Option 4 ID : 6306801750613
Status : Not Answered
Chosen Option : --

Q.2 The compound interest (compounding half yearly) received on Rs. 14000 for 2 years is Rs. 15030.4. What is the rate of interest per annum?

- Ans
- ☐ 1. 35 percent
 - ☐ 2. 20 percent
 - ☒ 3. 40 percent
 - ☐ 4. 25 percent

Question ID : 630680448357
Option 1 ID : 6306801750622
Option 2 ID : 6306801750620
Option 3 ID : 6306801750623
Option 4 ID : 6306801750621

Status : Not Answered

Chosen Option : --

Q.3 If $p(x) = 3x + 2$, then what is the zero of the polynomial $p(x)$?

- Ans
- ☐ 1. $x = -2$
 - ☐ 2. $x = \frac{2}{3}$
 - ☒ 3. $x = -\frac{2}{3}$
 - ☐ 4. $x = 2$

Question ID : 630680448353
Option 1 ID : 6306801750607
Option 2 ID : 6306801750604
Option 3 ID : 6306801750605
Option 4 ID : 6306801750606

Status : Answered

Chosen Option : 3

Q.4 The Sum of a rational and an irrational number is always a _____.

- Ans
- ☐ 1. integer
 - ☐ 2. natural number
 - ☒ 3. irrational number
 - ☐ 4. rational number

Question ID : 630680448352
Option 1 ID : 6306801750602
Option 2 ID : 6306801750603
Option 3 ID : 6306801750601
Option 4 ID : 6306801750600

Status : Answered

Chosen Option : 3

Q.5 Which is that smallest three digit number which when decreased by 5 becomes divisible by both 4 and 5?

- Ans
- ☐ 1. 105
 - ☐ 2. 135
 - ☐ 3. 115
 - ☒ 4. 125

Question ID : 630680448351

Option 1 ID : 6306801750598

Option 2 ID : 6306801750599

Option 3 ID : 6306801750597

Option 4 ID : 6306801750596

Status : Answered

Chosen Option : 1

Q.6 ଏକ ଚତୁର୍ଭୁଜର ଗୋଟିଏ କର୍ଣ୍ଣର ଦୈର୍ଘ୍ୟ 22 cm ଅଟେ । ଅନ୍ୟ ଦୁଇଟି ଶୀର୍ଷ ବିନ୍ଦୁରୁ ଏହି କର୍ଣ୍ଣ ପ୍ରତି ଅଙ୍କାଯାଇଥିବା ଲମ୍ବର ଦୈର୍ଘ୍ୟ ଯଥାକ୍ରମେ 8 cm ଏବଂ 12 cm ଅଟେ । ଚତୁର୍ଭୁଜର କ୍ଷେତ୍ରଫଳ କେତେ ?

- Ans
- ☐ 1. 110 cm²
 - ☐ 2. 160 cm²
 - ☒ 3. 220 cm²
 - ☐ 4. 250 cm²

Question ID : 630680448361

Option 1 ID : 6306801750637

Option 2 ID : 6306801750639

Option 3 ID : 6306801750636

Option 4 ID : 6306801750638

Status : Not Answered

Chosen Option : --

Q.7 W ର ଆୟ Z ର ଆୟର 170 ପ୍ରତିଶତ ଏବଂ W ର ଖର୍ଚ୍ଚ Z ର ଖର୍ଚ୍ଚର 70 ପ୍ରତିଶତ ଅଟେ । ଯଦି Z ଗାଈ ଆୟର 30 ପ୍ରତିଶତ ସଞ୍ଚୟ କରନ୍ତି, ତେବେ W ଗାଈ ନିଜ ଆୟର କେତେ ପ୍ରତିଶତ ସଞ୍ଚୟ କରିବେ ?

- Ans
- ☐ 1. 73.62 ପ୍ରତିଶତ
 - ☐ 2. 70.26 ପ୍ରତିଶତ
 - ☐ 3. 72.15 ପ୍ରତିଶତ
 - ☒ 4. 71.18 ପ୍ରତିଶତ

Question ID : 630680448358

Option 1 ID : 6306801750625

Option 2 ID : 6306801750626

Option 3 ID : 6306801750624

Option 4 ID : 6306801750627

Status : Not Answered

Chosen Option : --

Q.8 ଋତୁସର ଗୋଟିଏ ଜର୍ଣ୍ଣ ଅନ୍ୟ ଜର୍ଣ୍ଣର 60 ପ୍ରତିଶତ ଅଟେ । ଋତୁସର କ୍ଷେତ୍ରଫଳ ସହିତ ବୃହତ ଜର୍ଣ୍ଣର ଦୈର୍ଘ୍ୟର ବର୍ଗର ଅନୁପାତ କେତେ?

- Ans
- ☒ 1. 4 : 11
 - ☒ 2. 2 : 9
 - ☒ 3. 3 : 10
 - ☒ 4. 5 : 7

Question ID : 630680448362

Option 1 ID : 6306801750640

Option 2 ID : 6306801750642

Option 3 ID : 6306801750641

Option 4 ID : 6306801750643

Status : Not Answered

Chosen Option : --

Q.9 If $2^n = \sqrt{256}$, then what is the value of n?

- Ans
- ☒ 1. 5
 - ☒ 2. 3
 - ☒ 3. 4
 - ☒ 4. 8

Question ID : 630680448354

Option 1 ID : 6306801750609

Option 2 ID : 6306801750608

Option 3 ID : 6306801750610

Option 4 ID : 6306801750611

Status : Answered

Chosen Option : 4

Q.10 What is the value of $\frac{\sqrt{80}-\sqrt{112}}{\sqrt{45}-\sqrt{63}}$?

- Ans
- ☒ 1. $1\frac{1}{3}$
 - ☒ 2. $1\frac{7}{9}$
 - ☒ 3. $\frac{3}{4}$
 - ☒ 4. $1\frac{3}{4}$

Question ID : 630680448356

Option 1 ID : 6306801750618

Option 2 ID : 6306801750619

Option 3 ID : 6306801750616

Option 4 ID : 6306801750617

Status : Not Answered

Chosen Option : --

Q.11 In triangle ABC, $AB = AC$. If $\angle BAC = 40$ degrees, then what is the value of $\angle ABC$?

- Ans
- ☒ 1. 80 degrees
 - ☒ 2. 70 degrees
 - ☒ 3. 60 degrees
 - ☒ 4. 65 degrees

Question ID : 630680448360
Option 1 ID : 6306801750635
Option 2 ID : 6306801750632
Option 3 ID : 6306801750633
Option 4 ID : 6306801750634
Status : Answered
Chosen Option : 2

Q.12 The angles of a triangle are $(2x - 1)$ degrees, $3x$ degrees and $(4x + 10)$ degrees, then what is the value of x ?

- Ans
- ☒ 1. 19
 - ☒ 2. 15
 - ☒ 3. 16
 - ☒ 4. 17

Question ID : 630680448359
Option 1 ID : 6306801750628
Option 2 ID : 6306801750631
Option 3 ID : 6306801750630
Option 4 ID : 6306801750629
Status : Answered
Chosen Option : 1

Q.13 Which of the following is a scalar quantity?

- Ans
- ☒ 1. Acceleration
 - ☒ 2. Force
 - ☒ 3. Speed
 - ☒ 4. Velocity

Question ID : 630680448368
Option 1 ID : 6306801750667
Option 2 ID : 6306801750664
Option 3 ID : 6306801750665
Option 4 ID : 6306801750666
Status : Answered
Chosen Option : 2

Q.14 What is the balanced chemical equation for the reaction between hydrogen and oxygen to form water (H₂O)?

- Ans
- ☒ 1. $\text{H}_2\text{O} \rightarrow \text{H}_2 + \text{O}_2$
 - ☒ 2. $2\text{H}_2 + \text{O}_2 \rightarrow 2\text{H}_2\text{O}$
 - ☒ 3. $4\text{H}_2 + \text{O}_2 \rightarrow 4\text{H}_2\text{O}$
 - ☒ 4. $\text{H}_2 + \text{O}_2 \rightarrow \text{H}_2\text{O}$

Question ID : 630680448366

Option 1 ID : 6306801750659

Option 2 ID : 6306801750656

Option 3 ID : 6306801750658

Option 4 ID : 6306801750657

Status : Answered

Chosen Option : 2

Q.15 What does the symbol "H" represent in the periodic table?

- Ans
- ☒ 1. Helium
 - ☒ 2. Hafnium
 - ☒ 3. Hassium
 - ☒ 4. Hydrogen

Question ID : 630680448365

Option 1 ID : 6306801750652

Option 2 ID : 6306801750655

Option 3 ID : 6306801750654

Option 4 ID : 6306801750653

Status : Answered

Chosen Option : 4

Q.16 In which state of matter do particles have the least freedom of movement?

- Ans
- ☒ 1. Liquid
 - ☒ 2. Gas
 - ☒ 3. Solid
 - ☒ 4. Plasma

Question ID : 630680448369

Option 1 ID : 6306801750669

Option 2 ID : 6306801750670

Option 3 ID : 6306801750668

Option 4 ID : 6306801750671

Status : Answered

Chosen Option : 3

Q.17 When an acid reacts with a base, what type of reaction takes place?

- Ans
- ☐ 1. Oxidation-reduction reaction
 - ☒ 2. Neutralization reaction
 - ☐ 3. Precipitation reaction
 - ☐ 4. Combustion reaction

Question ID : 630680448367
Option 1 ID : 6306801750660
Option 2 ID : 6306801750662
Option 3 ID : 6306801750661
Option 4 ID : 6306801750663
Status : Answered
Chosen Option : 2

Q.18 What is the relationship between pressure and the area over which force is applied?

- Ans
- ☐ 1. Pressure is proportional to the square of the area
 - ☐ 2. Pressure is directly proportional to the area
 - ☐ 3. Pressure is not related to the area
 - ☒ 4. Pressure is inversely proportional to the area

Question ID : 630680448374
Option 1 ID : 6306801750691
Option 2 ID : 6306801750690
Option 3 ID : 6306801750689
Option 4 ID : 6306801750688
Status : Answered
Chosen Option : 2

Q.19 ନିମ୍ନଲିଖିତ ମଧ୍ୟରୁ କେଉଁଟି ଏସିଡ୍ ର ଗୁଣ ଅଟେ?

- Ans
- ☐ 1. ତିକ୍ତ ସ୍ବାଦ
 - ☐ 2. ସ୍ବର୍ଣ୍ଣ କଲେ ପିଚ୍ଛିଳ ଲାଗେ
 - ☒ 3. ନୀଳ ଲିଟମସ୍ କାଗଜ ଲାଲରେ ପରିବର୍ତ୍ତନ ହୋଇଯିବ।
 - ☐ 4. 7 ରୁ ଅଧିକ pH

Question ID : 630680448373
Option 1 ID : 6306801750684
Option 2 ID : 6306801750686
Option 3 ID : 6306801750685
Option 4 ID : 6306801750687
Status : Answered
Chosen Option : 3

Q.20 Which planet in our solar system is known as the "Red Planet"?

- Ans
- ☒ 1. Jupiter
 - ☒ 2. Earth
 - ☒ 3. Mars
 - ☒ 4. Venus

Question ID : 630680448371
Option 1 ID : 6306801750677
Option 2 ID : 6306801750678
Option 3 ID : 6306801750679
Option 4 ID : 6306801750676
Status : Answered
Chosen Option : 3

Q.21 ଅଧିକାଂଶ ଅଧାତୁଗୁଡ଼ିକ ପାଇଁ କୋଠରୀ ତାପମାତ୍ରାରେ ପଦାର୍ଥର ଅବସ୍ଥା କ'ଣ ହୋଇଥାଏ?

- Ans
- ☒ 1. ପ୍ଲାଜମା
 - ☒ 2. ତରଳ
 - ☒ 3. କଠିନ
 - ☒ 4. ଗ୍ୟାସ୍

Question ID : 630680448372
Option 1 ID : 6306801750682
Option 2 ID : 6306801750681
Option 3 ID : 6306801750680
Option 4 ID : 6306801750683
Status : Answered
Chosen Option : 4

Q.22 Which of the following is a characteristic property of metals?

- Ans
- ☒ 1. Good conductors of electricity
 - ☒ 2. Brittle
 - ☒ 3. Low melting point
 - ☒ 4. High electronegativity

Question ID : 630680448363
Option 1 ID : 6306801750646
Option 2 ID : 6306801750645
Option 3 ID : 6306801750647
Option 4 ID : 6306801750644
Status : Answered
Chosen Option : 1

Q.23 ଯେତେବେଳେ ଆଲୋକ ତରଙ୍ଗ ଗୋଟିଏ ମାଧ୍ୟମରୁ ଅନ୍ୟ ମାଧ୍ୟମକୁ ଗତିକରିବା ସମୟରେ ଦିଗ ପରିବର୍ତ୍ତନ କରିଥାଏ, ତାହାକୁ କ'ଣ କୁହାଯାଏ?

- Ans**
- ✓ 1. ପ୍ରତିସରଣ
 - ✗ 2. ପ୍ରକୀର୍ଣ୍ଣନ
 - ✗ 3. ପ୍ରତିଫଳନ
 - ✗ 4. ବିକୀର୍ଣ୍ଣନ

Question ID : 630680448370
Option 1 ID : 6306801750673
Option 2 ID : 6306801750674
Option 3 ID : 6306801750672
Option 4 ID : 6306801750675
Status : Answered
Chosen Option : 3

Q.24 How many elements are there in the periodic table (as of my knowledge cutoff date in September 2021)?

- Ans**
- ✓ 1. 118
 - ✗ 2. 92
 - ✗ 3. 106
 - ✗ 4. 63

Question ID : 630680448364
Option 1 ID : 6306801750649
Option 2 ID : 6306801750648
Option 3 ID : 6306801750651
Option 4 ID : 6306801750650
Status : Answered
Chosen Option : 1

Q.25 ସାଧାରଣ ଥଣ୍ଡା ଓ ଜନସଂଖ୍ୟା ଭଳି ରୋଗ ସୃଷ୍ଟି ପାଇଁ କେଉଁ ଅଣୁଜୀବ ଦାୟୀ ?

- Ans**
- ✗ 1. ପ୍ରୋଟୋଜୋଆ (ଆବିପ୍ରାଣୀ)
 - ✗ 2. କବ୍ଜ
 - ✓ 3. ଭୂତାଣୁ
 - ✗ 4. ଶୈବାଳ

Question ID : 630680448384
Option 1 ID : 6306801750729
Option 2 ID : 6306801750730
Option 3 ID : 6306801750728
Option 4 ID : 6306801750731
Status : Answered
Chosen Option : 3

Q.26 ନିମ୍ନଲିଖିତ ମଧ୍ୟରୁ କେଉଁଟି ଜୀବମାନଙ୍କ ମଧ୍ୟରେ ଏକ ଶାରୀରିକ ଅନୁକୂଳନ ଅଟେ ?

- Ans
- ☐ 1. ଏକ ଭିନ୍ନ ସ୍ଥାନକୁ ସ୍ଥାନାନ୍ତରିତ ହେବା
 - ☐ 2. ଏକ ନୂତନ କୌଶଳ ଶିଖିବା
 - ☒ 3. ଶୀତ ଦିନ ପାଇଁ ଲୋମର ଏକ ଅପେକ୍ଷାକୃତ ମୋଟା ଆସ୍ତରଣ ବିକଶିତ ହେବା
 - ☐ 4. ରୋଗ ପ୍ରତିରୋଧକ ଶକ୍ତି ବିକଶିତ କରିବା

Question ID : 630680448376

Option 1 ID : 6306801750698

Option 2 ID : 6306801750696

Option 3 ID : 6306801750699

Option 4 ID : 6306801750697

Status : Answered

Chosen Option : 3

Q.27 Which of the following is a common example of a microorganism?

- Ans
- ☐ 1. Oak tree
 - ☒ 2. Bacteria
 - ☐ 3. Ladybug
 - ☐ 4. Rose bush

Question ID : 630680448383

Option 1 ID : 6306801750727

Option 2 ID : 6306801750726

Option 3 ID : 6306801750724

Option 4 ID : 6306801750725

Status : Answered

Chosen Option : 2

Q.28 Which organelle is often referred to as the "powerhouse" of the cell?

- Ans
- ☐ 1. Golgi apparatus
 - ☐ 2. Nucleus
 - ☐ 3. Endoplasmic reticulum
 - ☒ 4. Mitochondrion

Question ID : 630680448381

Option 1 ID : 6306801750717

Option 2 ID : 6306801750716

Option 3 ID : 6306801750719

Option 4 ID : 6306801750718

Status : Answered

Chosen Option : 4

Q.29 What is the function of the cell's nucleus?

- Ans
- ☐ 1. Lipid synthesis
 - ☐ 2. Energy production
 - ☒ 3. Genetic information storage and regulation
 - ☐ 4. Protein synthesis

Question ID : 630680448382

Option 1 ID : 6306801750723

Option 2 ID : 6306801750721

Option 3 ID : 6306801750722

Option 4 ID : 6306801750720

Status : Answered

Chosen Option : 3

Q.30 ମୃତ୍ତିକା ବିଜ୍ଞାନରେ, ସଂକ୍ଷିପ୍ତ ଶବ୍ଦ "OM"ର ଅର୍ଥ କ'ଣ?

- Ans
- ☐ 1. ଅପ୍ଟିମାଲ ମ୍ୟାଚ୍ଚର (Optimal Moisture)
 - ☐ 2. ଓସ୍ମୋଟିକ୍ ମ୍ୟାଟେରିଆଲ (Osmotic Material)
 - ☐ 3. ଆଉଟଷ୍ଟାଣ୍ଡିଙ୍ଗ୍ ମିନେରାଲ୍ସ (Outstanding Minerals)
 - ☒ 4. ଅର୍ଗାନିକ୍ ମ୍ୟାଟର (Organic Matter)

Question ID : 630680448379

Option 1 ID : 6306801750710

Option 2 ID : 6306801750711

Option 3 ID : 6306801750709

Option 4 ID : 6306801750708

Status : Answered

Chosen Option : 4

Q.31 What does the acronym "ATP" stand for in the context of respiration and energy production?

- Ans
- ☒ 1. Adenosine Triphosphate
 - ☐ 2. Air Transport Protocol
 - ☐ 3. Aerobic Transformation Process
 - ☐ 4. Alveolar Transport Pathway

Question ID : 630680448378

Option 1 ID : 6306801750705

Option 2 ID : 6306801750704

Option 3 ID : 6306801750707

Option 4 ID : 6306801750706

Status : Answered

Chosen Option : 1

Q.32 କିଶୋର ଅବସ୍ଥାରେ ସଂକ୍ଷିପ୍ତ ନାମ "HGH"ର ଅର୍ଥ କ'ଣ?

Ans ☒ 1.

ହାଇପରଆକ୍ଟିଭ୍ ଗ୍ରୋଥ୍ ହରମୋନ୍ (Hyperactive Growth Hormone)

☒ 2. ହ୍ୟୁମାନ ଗ୍ରୋଥ୍ ହରମୋନ୍ (Human Growth Hormone)

☒ 3. ହାଇ ଗ୍ରୋଥ୍ ହରମୋନ୍ (High Growth Hormone)

☒ 4. ହେଲ୍ଥୀ ଗ୍ରୋଥ୍ ହାବିଟ୍ (Healthy Growth Habit)

Question ID : 630680448386

Option 1 ID : 6306801750739

Option 2 ID : 6306801750737

Option 3 ID : 6306801750736

Option 4 ID : 6306801750738

Status : Answered

Chosen Option : 2

Q.33 Which of the following is a primary characteristic of adolescence?

Ans ☒ 1. Stable physical development

☒ 2. Decreased social interactions

☒ 3. Reduced cognitive abilities

☒ 4. Rapid physical growth and maturation

Question ID : 630680448385

Option 1 ID : 6306801750732

Option 2 ID : 6306801750733

Option 3 ID : 6306801750734

Option 4 ID : 6306801750735

Status : Answered

Chosen Option : 1

Q.34 What does the acronym "GMO" typically refer to in the study of biological adaptation?

Ans ☒ 1. Genetic Modification Observation

☒ 2. Genomic Mapping of Organisms

☒ 3. Growth and Maturation Overhaul

☒ 4. Genetically Modified Organism

Question ID : 630680448375

Option 1 ID : 6306801750692

Option 2 ID : 6306801750693

Option 3 ID : 6306801750695

Option 4 ID : 6306801750694

Status : Not Answered

Chosen Option : --

Q.35 କେଉଁ ମୃତ୍ତିକା କଣିକା ସବୁଠାରୁ ବଡ଼ ଏବଂ ଉତ୍ତମ ବାୟୁ ଚଳାଚଳ ହୁଏ କିନ୍ତୁ ପାଣିକୁ ଭଲ ଭାବରେ ଧରି ରଖେ ନାହିଁ ?

Ans ☒ 1. ବାଲିଆ (Sand)

☐ 2. ଦୋରସା (Loam)

☐ 3. ଚିକିଟା (Clay)

☐ 4. କାବୁଆ (Silt)

Question ID : 630680448380

Option 1 ID : 6306801750712

Option 2 ID : 6306801750715

Option 3 ID : 6306801750714

Option 4 ID : 6306801750713

Status : Answered

Chosen Option : 1

Q.36 What is the primary purpose of respiration in living organisms?

Ans ☒ 1. To produce energy

☐ 2. To regulate body temperature

☐ 3. To support growth

☐ 4. To filter blood

Question ID : 630680448377

Option 1 ID : 6306801750700

Option 2 ID : 6306801750702

Option 3 ID : 6306801750703

Option 4 ID : 6306801750701

Status : Answered

Chosen Option : 1

Section : Part II Pedagogy

Q.1 Piaget defined a _____ to be a generalized action that improves by being repeatedly applied to similar situations in varying contexts.

Ans ☐ 1. observation

☐ 2. schema

☐ 3. plan

☒ 4. scheme

Question ID : 630680448392

Option 1 ID : 6306801750762

Option 2 ID : 6306801750760

Option 3 ID : 6306801750763

Option 4 ID : 6306801750761

Status : Answered

Chosen Option : 2

Q.2 Which of the following is an example of open-ended items in mathematics?

Ans ☒ 1.

The average of three numbers is 34. What are those numbers?

☒ 2.

Find out the perimeter of the rectangle whose length and breadth are 7 cm and 3 cm respectively.

☒ 3. Find out the average of 78, 83 and 91.

☒ 4. Calculate 58 divided by 8.

Question ID : 630680448393

Option 1 ID : 6306801750765

Option 2 ID : 6306801750767

Option 3 ID : 6306801750764

Option 4 ID : 6306801750766

Status : Answered

Chosen Option : 1

Q.3 Which of the following is the initial stage of the experiential learning cycle?

Ans ☒ 1. Processing

☒ 2. Publishing

☒ 3. Applying

☒ 4. Experiencing

Question ID : 630680448391

Option 1 ID : 6306801750756

Option 2 ID : 6306801750757

Option 3 ID : 6306801750759

Option 4 ID : 6306801750758

Status : Answered

Chosen Option : 3

Q.4 Match the following in the context of taxonomy of educational objectives.

	Educational objectives		Domain
I	Knowledge	1	Cognitive Domain
II	Articulation	2	Psychomotor Domain
III	Responding	3	Affective Domain

Ans ☒ 1. I-2, II-1 III-3

☒ 2. I-1, II-2, III-3

☒ 3. I-1, II-3, III-2

☒ 4. I-2, II-3, III-1

Question ID : 630680448388

Option 1 ID : 6306801750747

Option 2 ID : 6306801750745

Option 3 ID : 6306801750746

Option 4 ID : 6306801750744

Status : Answered

Chosen Option : 2

Q.5 Which of the following statement is correct regarding the given statement?

‘Mathematics aims at abstraction’

I. Algebra, a branch of mathematics, deals with abstraction.

II. Abstraction is a means of encompassing wider range of application of mathematics.

- Ans
- ☒ 1. Only I
 - ☒ 2. Both I and II
 - ☒ 3. Only II
 - ☒ 4. Neither I nor II

Question ID : 630680448389
Option 1 ID : 6306801750748
Option 2 ID : 6306801750750
Option 3 ID : 6306801750749
Option 4 ID : 6306801750751
Status : Answered
Chosen Option : 2

Q.6 In mathematics, what is correct regarding the nature of remedial activities?

I. More material intensive

II. Based on the experience of the child

- Ans
- ☒ 1. Only I
 - ☒ 2. Neither I nor II
 - ☒ 3. Both I and II
 - ☒ 4. Only II

Question ID : 630680448394
Option 1 ID : 6306801750768
Option 2 ID : 6306801750771
Option 3 ID : 6306801750770
Option 4 ID : 6306801750769
Status : Answered
Chosen Option : 4

Q.7 ‘The form of reasoning in which a general law or principle is derived from a study of particular objects or specific processes.’ The statement given above defines which method of teaching mathematics?

- Ans
- ☒ 1. Inductive method
 - ☒ 2. Synthetic method
 - ☒ 3. Analytic method
 - ☒ 4. Deductive method

Question ID : 630680448390
Option 1 ID : 6306801750752
Option 2 ID : 6306801750754
Option 3 ID : 6306801750753
Option 4 ID : 6306801750755
Status : Answered
Chosen Option : 4

Q.8 'While constructing roads and bridges, concepts of mathematics like measurements, time are used.' The statement given above is an example of which aim of teaching mathematics?

- Ans
- ☐ 1. Cultural aim
 - ☒ 2. Social aim
 - ☐ 3. Disciplinary aim
 - ☐ 4. Moral aim

Question ID : 630680448387
Option 1 ID : 6306801750743
Option 2 ID : 6306801750740
Option 3 ID : 6306801750742
Option 4 ID : 6306801750741
Status : Answered
Chosen Option : 4

Q.9 The constructivist approach in teaching science emphasizes:

- Ans
- ☐ 1. Standardized testing.
 - ☒ 2. Active construction of knowledge by learners.
 - ☐ 3. Rote memorization of scientific facts
 - ☐ 4. Passive absorption of content.

Question ID : 630680448397
Option 1 ID : 6306801750781
Option 2 ID : 6306801750783
Option 3 ID : 6306801750782
Option 4 ID : 6306801750780
Status : Answered
Chosen Option : 2

Q.10 କେଉଁ ଶିକ୍ଷାଦାନ ରଣନୀତି ତିଆରି, ଡିଜାଇନ୍ ଏବଂ ସମସ୍ୟା ସମାଧାନ ମାଧ୍ୟମରେ ସକ୍ରିୟ ଯୋଗଦାନକୁ ପ୍ରୋତ୍ସାହିତ କରେ?

- Ans
- ☐ 1. ସକ୍ରେଟିସଙ୍କ ପରି ପ୍ରଶ୍ନ ପଚାରିବା
 - ☒ 2. ଅନୁସନ୍ଧାନ ଭିତ୍ତିକ ଶିକ୍ଷା
 - ☐ 3. ପୋଡକାଝ ଶୁଣିବା
 - ☐ 4. ପାଠ୍ୟପୁସ୍ତକ ପଢ଼ିବା

Question ID : 630680448400
Option 1 ID : 6306801750793
Option 2 ID : 6306801750795
Option 3 ID : 6306801750794
Option 4 ID : 6306801750792
Status : Answered
Chosen Option : 2

Q.11 କୌଣସି ବିଦ୍ୟାର୍ଥୀର ବୈଜ୍ଞାନିକ ପରୀକ୍ଷଣ କରିବାର ଦକ୍ଷତାକୁ ଆକଳନ କରିବା ପାଇଁ କେଉଁ ଉପକରଣ ସବୁଠାରୁ ଉପଯୁକ୍ତ ହେବ?

- Ans**
- ☐ 1. ଲେଖା ପଢ଼ିକା ।
 - ☐ 2. ମୌଖିକ ସାକ୍ଷାତକାର ।
 - ☒ 3. ପ୍ରଦର୍ଶନ ମୂଲ୍ୟାଙ୍କନ ।
 - ☐ 4. ଏକାଧିକ ଉତ୍ତର ଦିଶିବ ପ୍ରଶ୍ନ ।

Question ID : 630680448402
Option 1 ID : 6306801750800
Option 2 ID : 6306801750803
Option 3 ID : 6306801750802
Option 4 ID : 6306801750801

Status : Answered

Chosen Option : 2

Q.12 The method that allows students to find out facts for themselves and train their minds in the process is:

- Ans**
- ☐ 1. Direct method.
 - ☐ 2. Rote learning method
 - ☒ 3. Discovery method.
 - ☐ 4. Observation method.

Question ID : 630680448396
Option 1 ID : 6306801750776
Option 2 ID : 6306801750779
Option 3 ID : 6306801750777
Option 4 ID : 6306801750778

Status : Answered

Chosen Option : 3

Q.13 Formative assessment in science primarily focuses on:

- Ans**
- ☒ 1. Assessing students' learning during the instruction process.
 - ☐ 2. Conducting final exams.
 - ☐ 3. Giving long homework assignments.
 - ☐ 4. Grading students at the end of the term.

Question ID : 630680448398
Option 1 ID : 6306801750785
Option 2 ID : 6306801750786
Option 3 ID : 6306801750787
Option 4 ID : 6306801750784

Status : Answered

Chosen Option : 1

Q.14 The integrated approach in science teaching:

- Ans
- ☐ 1. Avoids experiments.
 - ☐ 2. Focuses only on the theoretical aspects.
 - ☐ 3. Separates subjects based on their content.
 - ☒ 4. Merges concepts from various disciplines to provide a holistic view.

Question ID : 630680448401
Option 1 ID : 6306801750798
Option 2 ID : 6306801750797
Option 3 ID : 6306801750796
Option 4 ID : 6306801750799
Status : Answered
Chosen Option : 4

Q.15 The Nature of Science primarily focuses on:

- Ans
- ☐ 1. Simply memorizing facts.
 - ☒ 2. Testing theories and making predictions.
 - ☐ 3. Following a strict set of rules.
 - ☐ 4. Collection of data.

Question ID : 630680448399
Option 1 ID : 6306801750791
Option 2 ID : 6306801750790
Option 3 ID : 6306801750789
Option 4 ID : 6306801750788
Status : Answered
Chosen Option : 4

Q.16 Which of the following is NOT an objective of teaching science at the upper primary stage?

- Ans
- ☐ 1. Foster curiosity about the natural world.
 - ☒ 2. Memorization of facts without understanding.
 - ☐ 3. Develop problem-solving skills.
 - ☐ 4. Develop a scientific attitude.

Question ID : 630680448395
Option 1 ID : 6306801750775
Option 2 ID : 6306801750773
Option 3 ID : 6306801750774
Option 4 ID : 6306801750772
Status : Answered
Chosen Option : 2

Q.17 In science evaluation, what is the meaning of the acronym "OSCE"?

- Ans
- ☐ 1. Outcomes in Science Education
 - ☐ 2. Observing Scientific Concepts Effectively
 - ☒ 3. Objective Structured Clinical Examination
 - ☐ 4. Overall Science Curriculum Evaluation

Question ID : 630680448409
Option 1 ID : 6306801750830
Option 2 ID : 6306801750829
Option 3 ID : 6306801750828
Option 4 ID : 6306801750831
Status : Not Answered
Chosen Option : --

Q.18 Why is fostering a sense of wonder and curiosity a crucial objective in science education?

- Ans
- ☐ 1. To limit students' imagination
 - ☐ 2. To discourage asking questions
 - ☐ 3. To make science boring
 - ☒ 4. To encourage inquisitiveness and a love for learning

Question ID : 630680448403
Option 1 ID : 6306801750807
Option 2 ID : 6306801750804
Option 3 ID : 6306801750805
Option 4 ID : 6306801750806
Status : Answered
Chosen Option : 4

Q.19 What is the primary goal of the Integrated Approach in education?

- Ans
- ☐ 1. To emphasize the isolation of subjects
 - ☒ 2. To promote holistic learning by connecting various subjects
 - ☐ 3. To encourage rote memorization
 - ☐ 4. To minimize student engagement

Question ID : 630680448408
Option 1 ID : 6306801750824
Option 2 ID : 6306801750827
Option 3 ID : 6306801750825
Option 4 ID : 6306801750826
Status : Answered
Chosen Option : 2

Q.20 What tool assesses students' ability to recall factual information and concepts in science?

- Ans
- ✓ 1. Flashcards
 - ✗ 2. Lab practicals
 - ✗ 3. Science projects
 - ✗ 4. Group discussions

Question ID : 630680448410

Option 1 ID : 6306801750832

Option 2 ID : 6306801750835

Option 3 ID : 6306801750833

Option 4 ID : 6306801750834

Status : Answered

Chosen Option : 4

Q.21 What is the role of hands-on experiments in teaching the Nature of Science?

- Ans
- ✗ 1. To promote rote memorization
 - ✓ 2. To engage students in practical exploration
 - ✗ 3. To discourage practical learning
 - ✗ 4. To focus solely on theoretical concepts

Question ID : 630680448404

Option 1 ID : 6306801750809

Option 2 ID : 6306801750810

Option 3 ID : 6306801750808

Option 4 ID : 6306801750811

Status : Answered

Chosen Option : 2

Q.22 What does the acronym "PBL" stand for in the context of a method or approach in science education?

- Ans
- ✗ 1. Perceptive Biology Lab
 - ✗ 2. Precise Background Learning
 - ✗ 3. Primary Data Collection
 - ✓ 4. Problem-Based Learning

Question ID : 630680448406

Option 1 ID : 6306801750819

Option 2 ID : 6306801750816

Option 3 ID : 6306801750818

Option 4 ID : 6306801750817

Status : Answered

Chosen Option : 4

Q.23 What method allows scientists to test hypotheses and gather data under controlled conditions?

- Ans**
- ☐ 1. Observation
 - ☐ 2. Discovery
 - ☒ 3. Experimentation
 - ☐ 4. Problem-solving

Question ID : 630680448405

Option 1 ID : 6306801750814

Option 2 ID : 6306801750812

Option 3 ID : 6306801750813

Option 4 ID : 6306801750815

Status : **Answered**

Chosen Option : 3

Q.24 What does the acronym "STEM" stand for in the Integrated Approach to education?

- Ans**
- ☒ 1. Science, Technology, Engineering, and Mathematics
 - ☐ 2. Systematic Training in Educational Methods
 - ☐ 3. Simple Teaching and Education Model
 - ☐ 4. Structured Teaching for Effective Mentoring

Question ID : 630680448407

Option 1 ID : 6306801750820

Option 2 ID : 6306801750823

Option 3 ID : 6306801750821

Option 4 ID : 6306801750822

Status : **Not Answered**

Chosen Option : --